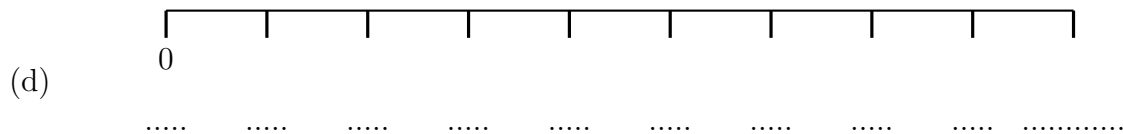
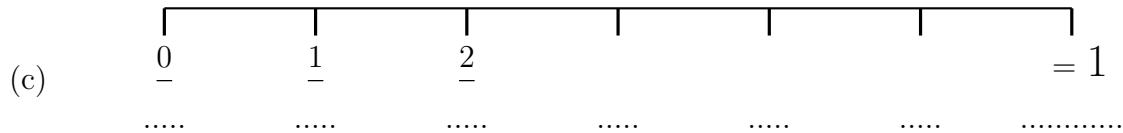
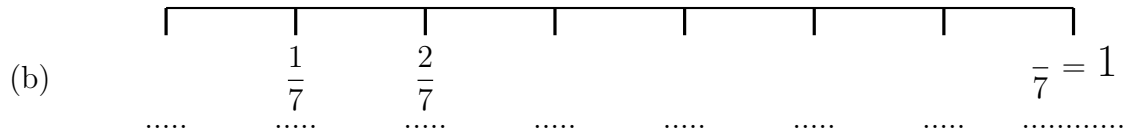
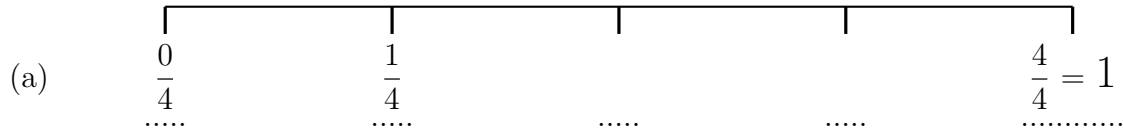
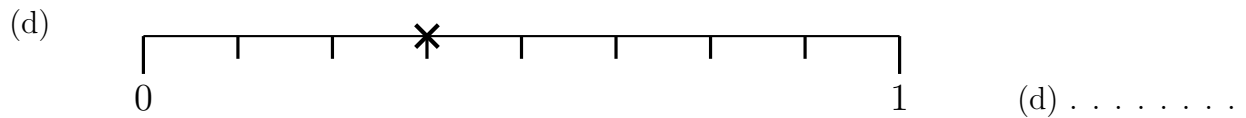
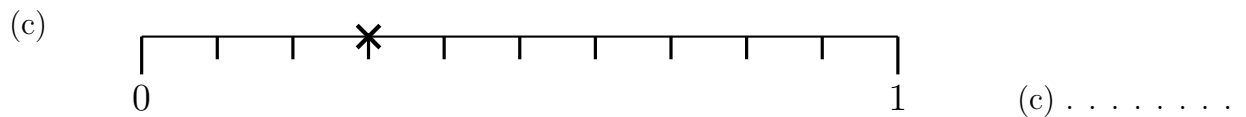
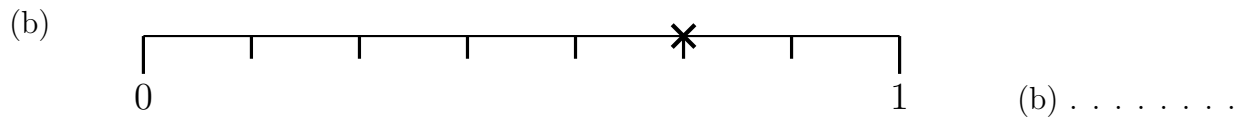
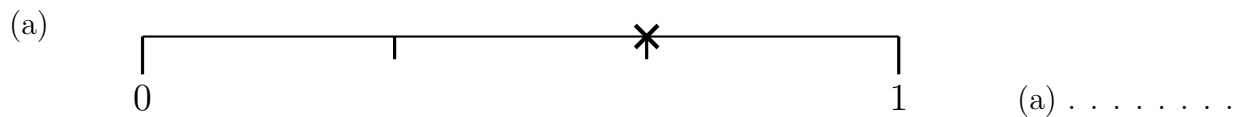


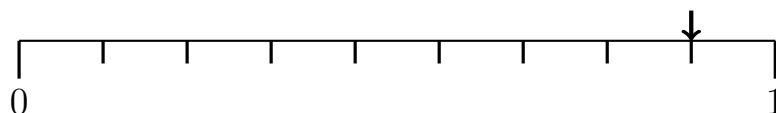
1. Complete the labels on each of these probability lines.



2. Write down the probability the cross shows on these probability lines.



3. A probability is shown on this probability line with an arrow.



Write down the probability shown as a fraction. (3)

Answers 1) (a) ... $\frac{2}{4}, \frac{3}{4}$... (b) $\frac{0}{7}, \dots, \frac{3}{7}, \frac{4}{7}, \frac{5}{7}, \frac{6}{7}, \frac{7}{7} = 1$ (c) $\frac{0}{6}, \frac{1}{6}, \frac{2}{6}, \frac{3}{6}, \frac{4}{6}, \frac{5}{6}, \frac{6}{6} = 1$

1) (d) $\frac{0}{9}, \frac{1}{9}, \frac{2}{9}, \frac{3}{9}, \frac{4}{9}, \frac{5}{9}, \frac{6}{9}, \frac{7}{9}, \frac{8}{9}, \frac{9}{9} = 1$ 2) (a) $\frac{2}{3}$ (b) $\frac{5}{7}$ (c) $\frac{3}{10}$ (d) $\frac{3}{8}$ 3) $\frac{8}{10}$