


F = fraction, D = decimal, P = percentage, R = ratio*

□ per cent means $\frac{\square \text{ out of } 100}{100}$ or $\frac{\square}{100}$ or $\frac{\square}{100}$

1. Part of this 100 square is shaded.

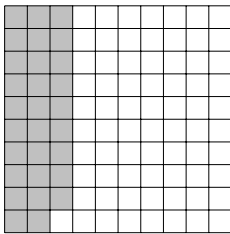


Write down the

(i) fraction shaded

(ii) percentage shaded %

2. Part of this 100 square is shaded.

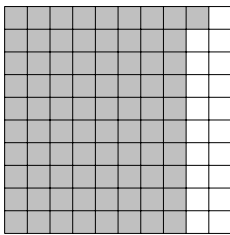


Write down the

(i) fraction shaded

(ii) percentage shaded %

3. Part of this 100 square is shaded.

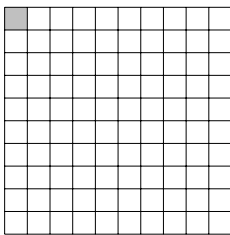


Write down the

(i) fraction shaded

(ii) percentage shaded %

4. Part of this 100 square is shaded.

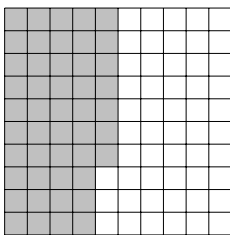


Write down the

(i) fraction shaded

(ii) percentage shaded %

5. Part of this 100 square is shaded.



Write down the

(i) fraction shaded

(ii) percentage shaded %

Ans 1)(i) $\frac{63}{100}$ (ii) 63 2)(i) $\frac{29}{100}$ (ii) 29 3)(i) $\frac{81}{100}$ (ii) 81 4)(i) $\frac{1}{100}$ (ii) 1 5)(i) $\frac{47}{100}$ (ii) 47