


F = fraction, D = decimal, P = percentage, R = ratio*

1. (i) Shade in 80% of the square below.









Key			
	1	0.1	0.01

(ii) Write 80% as a decimal (Use a calculator or the Key if this helps you)

(iii) Check: work out 80% as a decimal, $\frac{80}{100}$ on your calculator - is your decimal correct?

If you got question 1 correct then complete this table - otherwise ask for help.

<p>2 (i) Shade in 79% of the square below.</p>  <p>(ii) Write 79% as a decimal</p>	<p>3 (i) Shade in 5% of the square below.</p>  <p>(ii) Write 5% as a decimal</p>
<p>4 (i) Shade in 10% of the square below.</p>  <p>(ii) Write 10% as a decimal</p>	<p>5 (i) Shade in 57% of the square below.</p>  <p>(ii) Write 57% as a decimal</p>
<p>6 (i) Shade in 60% of the square below.</p>  <p>(ii) Write 60% as a decimal</p>	<p>7 (i) Shade in 8% of the square below.</p>  <p>(ii) Write 8% as a decimal</p>