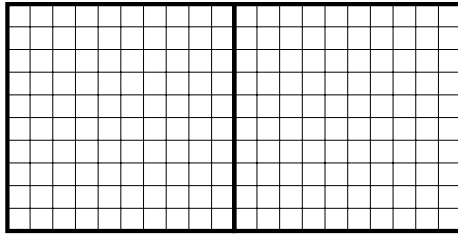


F = fraction, D = decimal, P = percentage, R = ratio\*

1. (i) Shade in 153% in the diagram below.



(ii) Write 153% as a decimal . . . . .

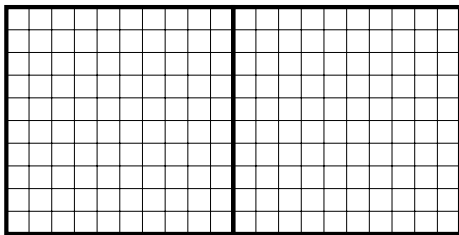
(iii) Complete this table.

Amount shaded	Improper fraction shaded	Proper fraction shaded
153%	$\frac{\quad}{100}$	$1 \frac{\quad}{100}$

Key

	$\frac{1}{10}$	$\frac{1}{100}$
Fraction	<b>1</b>	
Decimal	1	0.1 0.01
Percentage	100%	10% 1%

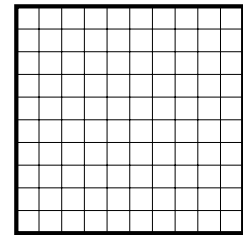
2 (i) Shade in  $1 + \frac{3}{100}$  in the diagram below



(ii) Write  $1 + \frac{3}{100}$  as a decimal . . . . .

(iii) Write  $1 + \frac{3}{100}$  as a percentage . . . . .


3 (i) Shade in 9% in the diagram below



(ii) Write 9% as a decimal . . . . .

(iii) Write 9% as a fraction . . . . .


4 (i) Shade in  $\frac{7}{10} + \frac{3}{100}$  in the diagram below



(ii) Write  $\frac{7}{10} + \frac{3}{100}$  as a decimal . . . . .

(iii) Write  $\frac{7}{10} + \frac{3}{100}$  as a percentage . . . . .

5 (i) Shade in 0.7 in this diagram

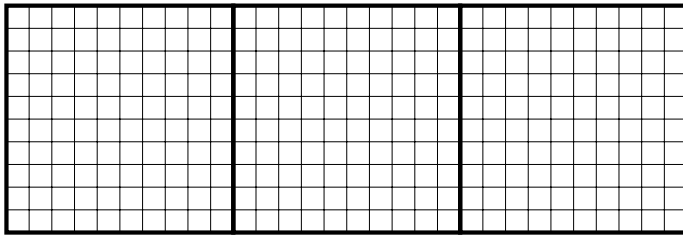


(ii) Write 0.7 as a fraction . . . . .

(iii) Write 0.7 as a percentage . . . . .

Turn over for more questions & ans

6. (a) (i) Shade in  $2 + 0.5 + 0.09$  in the diagram below.



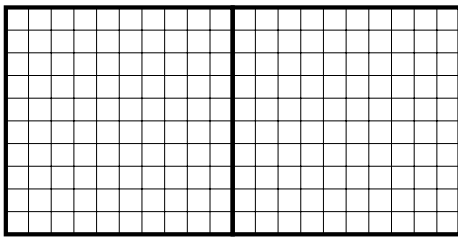
(ii) Write  $2 + 0.5 + 0.09$  as a decimal . . . . .

(iii) Write  $2 + 0.5 + 0.09$  as a percentage . . . . .

Key

Fraction	<b>1</b>	$\frac{1}{10}$	$\frac{1}{100}$
Decimal	1	0.1	0.01
Percentage	100%	10%	1%

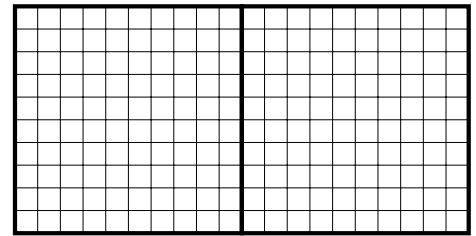
7 (i) Shade in  $1 + \frac{3}{10} + \frac{7}{100}$  in this diagram



(ii) Write  $1 + \frac{3}{10} + \frac{7}{100}$  as a decimal . . . . .

(iii) Write  $1 + \frac{3}{10} + \frac{7}{100}$  as a percentage . . . . .

8 (i) Shade in 173% in this diagram



(ii) Write 173% as a decimal . . . . .

9. Use your answers from questions 6 to 8 to complete this table.

Use question	Amount shaded	Improper fraction shaded	Proper fraction shaded
6 for diagram	$2 + 0.5 + 0.09$	$\frac{\quad}{100}$	$2 \frac{\quad}{100}$
7 for diagram	$1 + \frac{3}{10} + \frac{7}{100}$	$\frac{\quad}{100}$	$1 \frac{\quad}{100}$
8 for diagram	173%	$\frac{\quad}{100}$	$1 \frac{\quad}{100}$

Answers 1. (i) 153 small squares shaded (ii) 1.53 (iii)  $\frac{153}{100}$  and  $1\frac{53}{100}$  2. (ii) 1.03 (iii) 103%

3. (ii) 0.09 (iii)  $\frac{9}{100}$  4. (ii) 0.73 (iii) 73% 5. (ii)  $\frac{70}{100}$  or  $\frac{7}{10}$  (iii) 70%

6. (ii) 2.59 (iii) 259% 7. (ii) 1.37 (iii) 137% 8. (ii) 1.73

9.	$\frac{259}{100}$ and $2\frac{59}{100}$	$\frac{137}{100}$ and $1\frac{37}{100}$	$\frac{173}{100}$ and $1\frac{73}{100}$
----	---	---	---