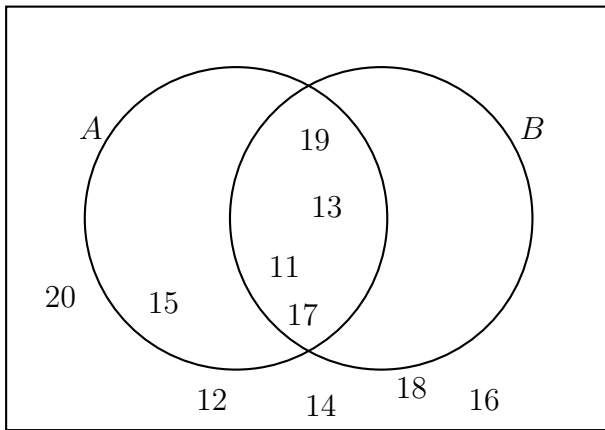


ξ

Q1 Complete these sets

(i) $A' = \{ \quad \quad \quad \}$

(ii) $A \cap B = \{ \quad \quad \quad \}$

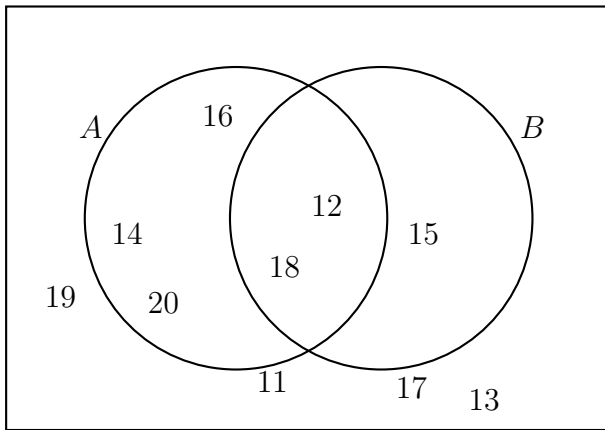


ξ

Q2 Complete these sets

(i) $B' = \{ \quad \quad \quad \}$

(ii) $A \cap B = \{ \quad \quad \quad \}$

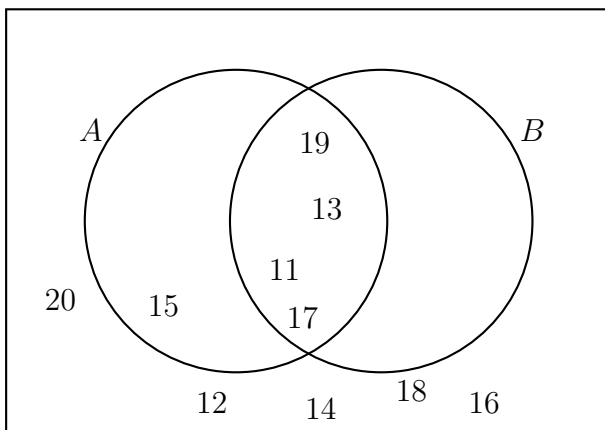


ξ

Q1 Complete these sets

(i) $A' = \{ \quad \quad \quad \}$

(ii) $A \cap B = \{ \quad \quad \quad \}$

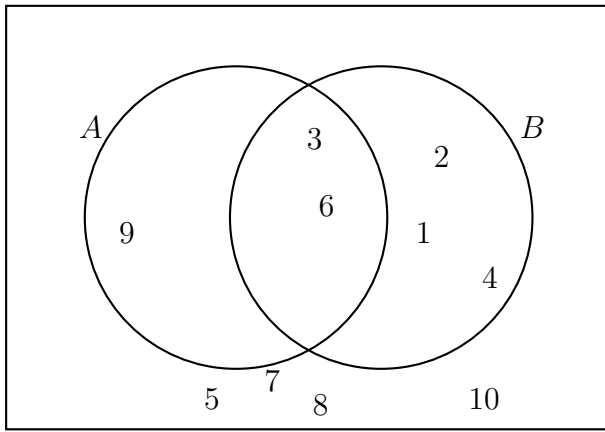


ξ

Q2 Complete these sets

(i) $B' = \{ \quad \quad \quad \}$

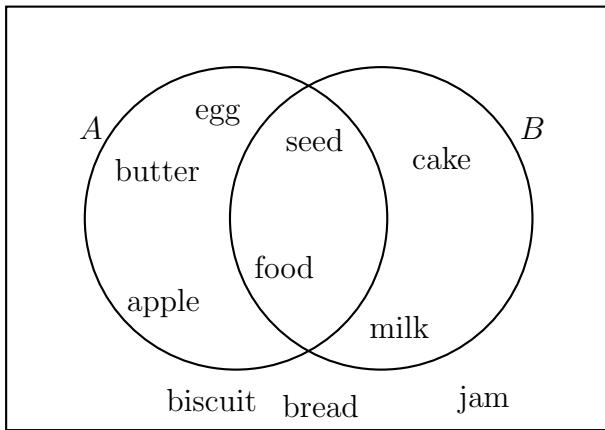
(ii) $A \cap B = \{ \quad \quad \quad \}$



Q3 Complete these sets

(i) $A' = \{ \quad \quad \quad \}$

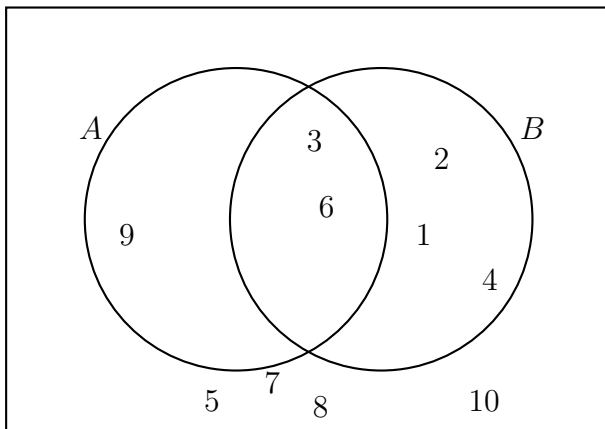
(ii) $A \cap B = \{ \quad \quad \quad \}$



Q4 Complete these sets

(i) $A' = \{ \quad \quad \quad \}$

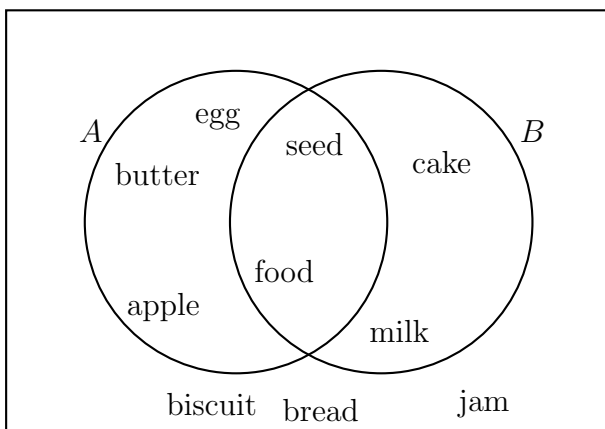
(ii) $A \cap B = \{ \quad \quad \quad \}$



Q3 Complete these sets

(i) $A' = \{ \quad \quad \quad \}$

(ii) $A \cap B = \{ \quad \quad \quad \}$



Q4 Complete these sets

(i) $A' = \{ \quad \quad \quad \}$

(ii) $A \cap B = \{ \quad \quad \quad \}$