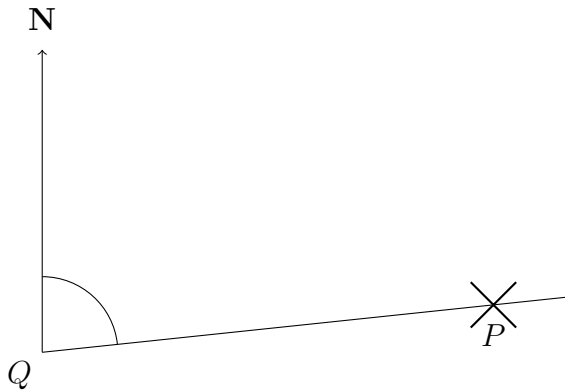
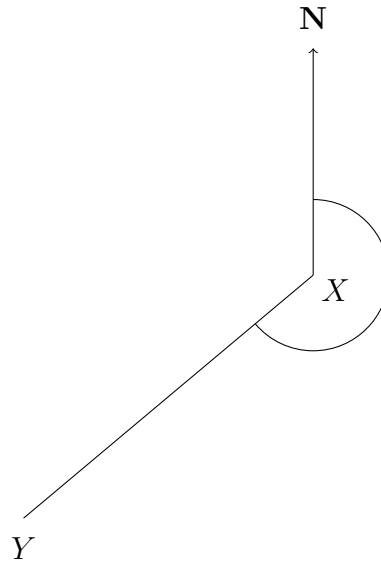


1. These diagrams show the position of

(a) two towers P and Q



(b) two treasure troves X and Y

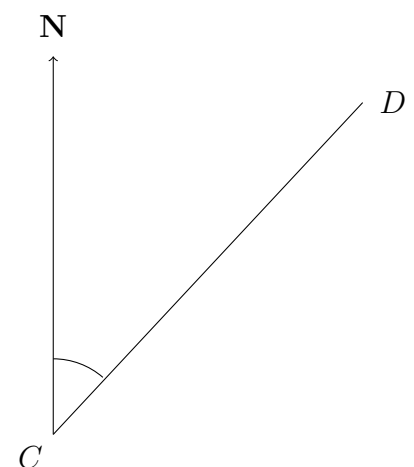
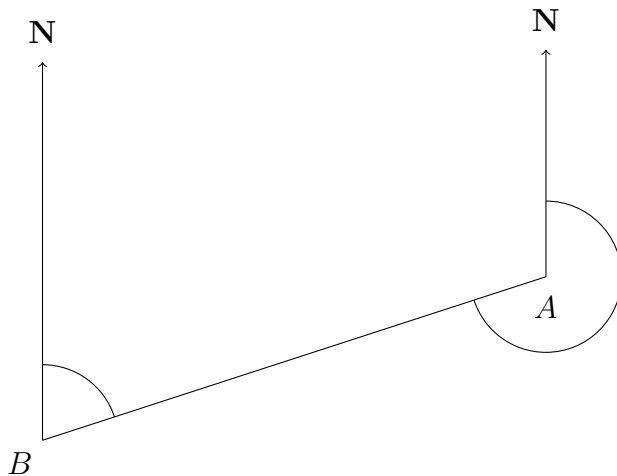


Write down

(a) the bearing of P from Q .....°

(b) the bearing of Y from X .....°

2. The diagram shows the position of six geocaches A, B, C, D, U and V.

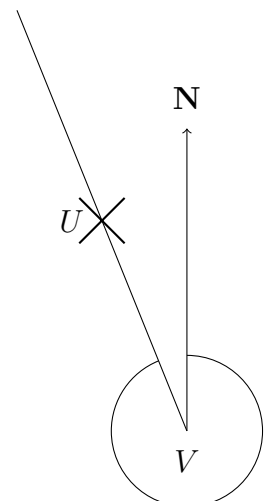


(a) Write down the bearing of B from A. ....°

(b) Write down the bearing of A from B. ....°

(c) Write down the bearing of D from C. ....°

(d) Write down the bearing of U from V. ....°



Answers:

1a) 084    b) 230    2a) 252    2b) 072    2c) 043    2d) 338