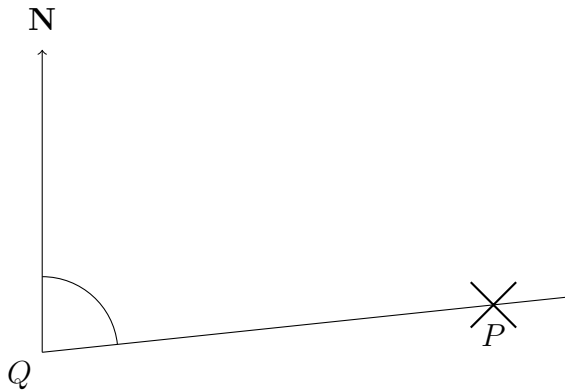
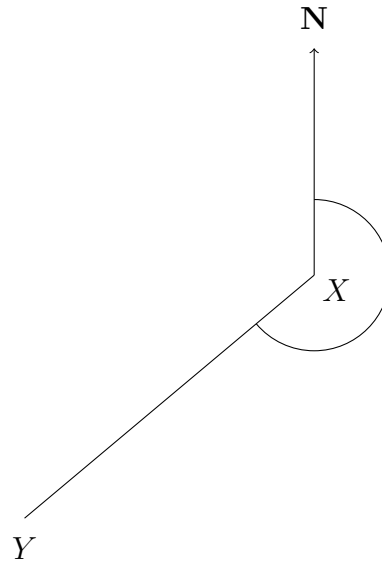


1. These diagrams show the position of

(a) two towers P and Q



(b) two treasure troves X and Y

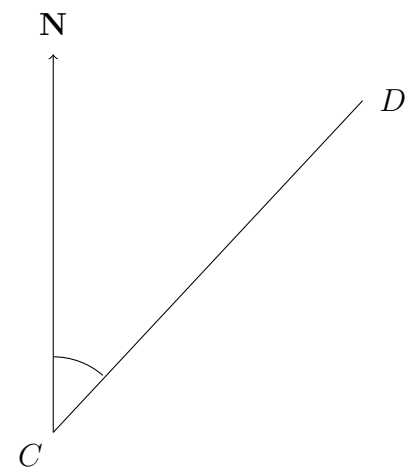
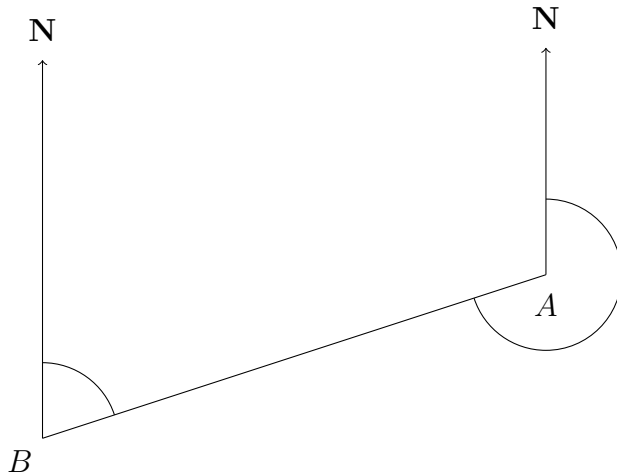


Write down

(a) the bearing of P from Q°

(b) the bearing of Y from X°

2. The diagram shows the position of six geocaches A, B, C, D, U and V.

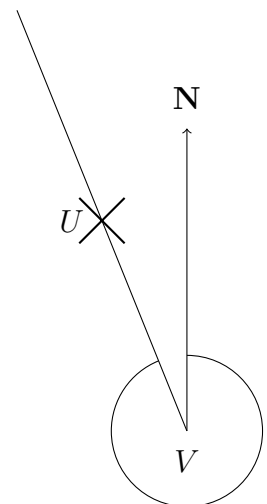


(a) Write down the bearing of B from A.°

(b) Write down the bearing of A from B.°

(c) Write down the bearing of D from C.°

(d) Write down the bearing of U from V.°



Answers:

1a) 084 b) 230 2a) 252 2b) 072 2c) 043 2d) 338