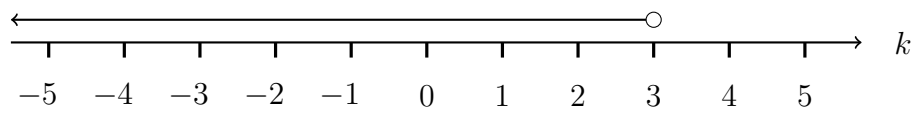


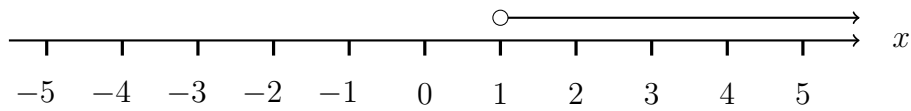
1. Here is an inequality, in k , shown on a number line.



Write down the inequality.

1.

2. Here is an inequality, in x , shown on a number line.

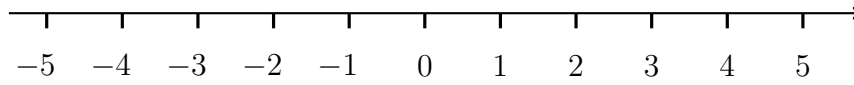


Write down the inequality.

2.

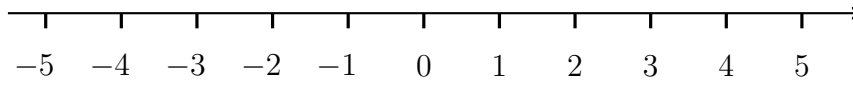
3. y is an integer such that $y \leq 3$

Show this inequality on the number line



4. k is an integer such that $k < -1$

Show this inequality on the number line



Answers

1. $k < 3$ or $3 > k$
2. $x > 1$ or $1 < x$
3. • at 3 and line to at least -5 and number line labelled y
4. ○ at -1 and line to at least -5 and number line labelled k