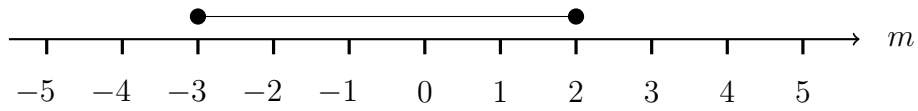


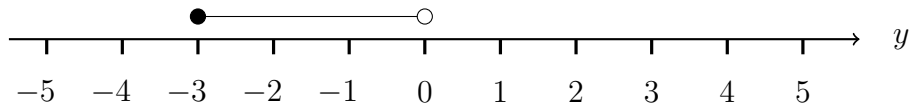
1. Here is an inequality, in  $m$ , shown on a number line.



Write down the inequality

1. ....

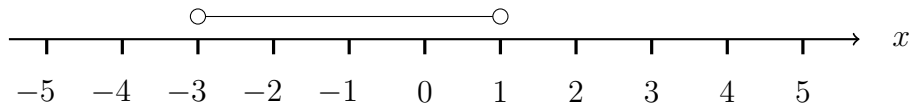
2. Here is an inequality, in  $y$ , shown on a number line.



Write down the inequality

2. ....

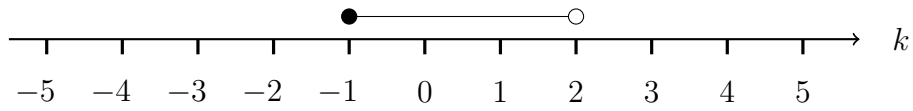
3. Here is an inequality, in  $x$ , shown on a number line.



Write down the inequality

3. ....

4. Here is an inequality, in  $k$ , shown on a number line.



Write down the inequality

4. ....

## Answers

1.  $-3 \leq m \leq 2$
2.  $-3 \leq y < 0$
3.  $-3 < x < 1$
4.  $-1 \leq k < 2$