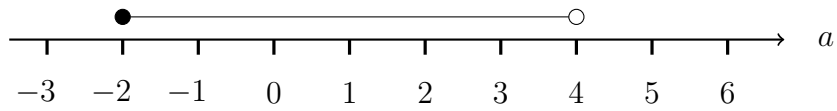


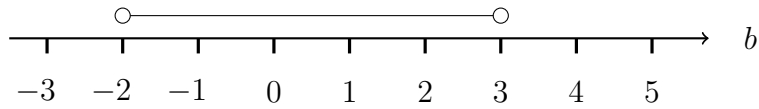
1. (a) Here is an inequality, in  $a$ , shown on a number line.  
 $a$  is an integer.



List all the possible values of  $a$ .

.....

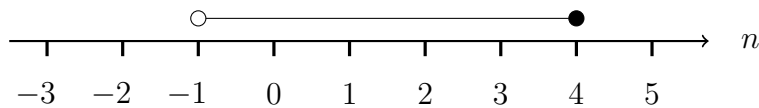
- (b) Here is an inequality, in  $b$ , shown on a number line.  
 $b$  is an integer.



List all the possible values of  $b$ .

.....

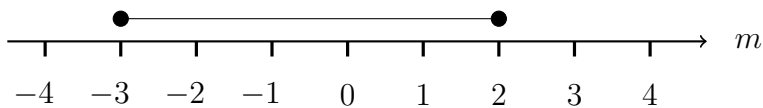
- (c) Here is an inequality, in  $c$ , shown on a number line.  
 $c$  is an integer.



List all the possible values of  $c$ .

.....

2. Here is an inequality, in  $m$ , shown on a number line.  
 $m$  is an integer.



List all the possible values of  $m$ .

.....

3. Here is an inequality, in  $x$ , shown on a number line.  
 $x$  is an integer.



List all the possible values of  $x$ .

.....

Answers

- 1a) -2, -1, 0, 1, 2, 3    1b) -1, 0, 1, 2    1c) 0, 1, 2, 3, 4  
 2) -3, -2, -1, 0, 1, 2    3) -2, -1, 0, 1, 2