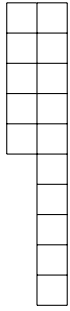


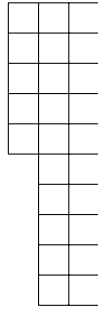
1. Here are some pictures in a sequence.



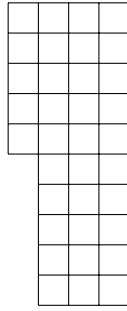
5



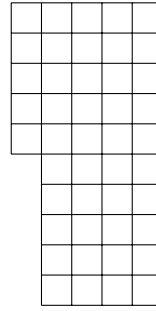
15



25



35



45

A maths teacher says the first term of the sequence is 5 and the term to term rule is + 10

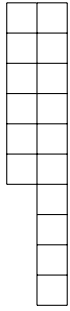
Complete the next 5 terms in the sequence below.

5 15 25 35 45

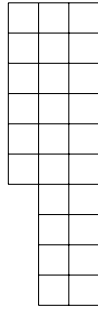
2. Here are some pictures in a sequence.



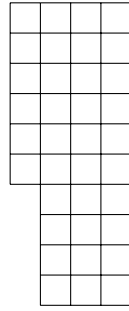
6



16



26



36

A maths teacher says the first term of the sequence is 6 and the term to term rule is + 10

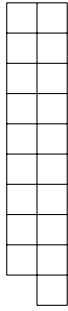
Complete the next 6 terms in the sequence below.

6 16 26 36

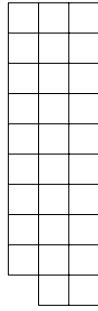
3. Here are some pictures in a sequence.



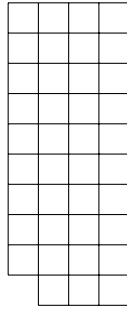
9



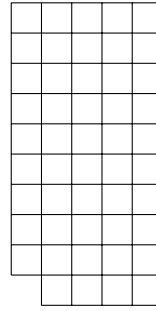
19



29



39



49

A maths teacher says the first term of the sequence is 9 and the term to term rule is + 10

Complete the next 5 terms in the sequence below.

9 19 29 39 49

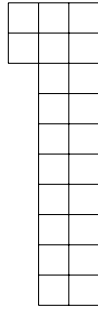
4. Here are some pictures in a sequence.



2



12



22

A maths teacher says the first term of the sequence is 2 and the term to term rule is + 10

Complete the next 7 terms in the sequence below.

2 12 22

Answers

1. 55, 65, 75, 85, 95
2. 46, 56, 66, 76, 86, 96
3. 59, 69, 79, 89, 99
4. 42, 52, 62, 72, 82, 92