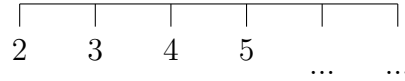


1. Complete the number line.



2. Complete the missing numbers.



3. Rehan didn't finish counting the grey squares.

How many small squares are grey?

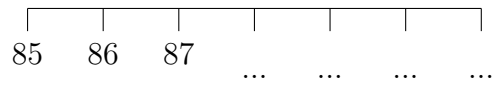
1	2	3	4	5	6	7	8	9	
11	12	13	14	15	16	17	18	19	
21	22	23	24	25	26	27	28	29	
31	32	33	34	35	36	37	38	39	
41	42	43	44	45	46	47	48	49	
51	52	53	54	55	56	57	58	59	

4. How many small squares are shaded in?

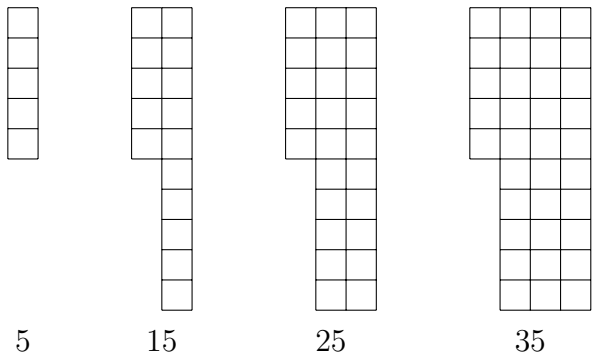
1	2	3	4	5	6	7	8	9	10
									20

5. How many small squares are shaded in?

6. Complete the number line.



7. Here are some pictures in a sequence and an incomplete 100 square.

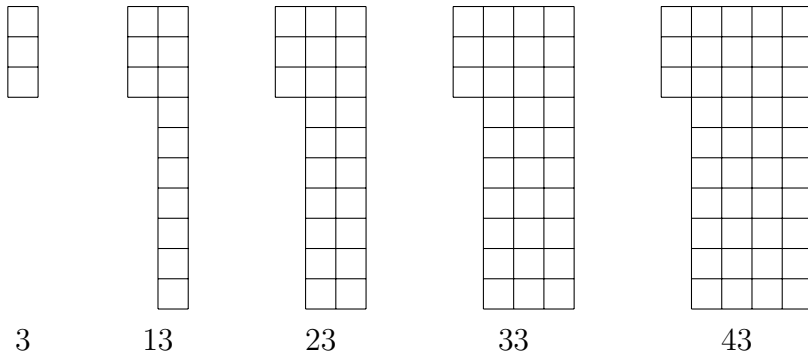


1	2	3	4		6	7	8	9	10
11	12	13	14		16	17	18	19	20
21	22	23	24		26	27	28	29	30
31	32	33	34		36	37	38	39	40
41	42	43	44	45	46	47	48	49	50
51	52	53	54	55	56	57	58	59	60
61	62	63	64	65	66	67	68	69	70
71	72	73	74	75	76	77	78	79	80
81	82	83	84	85	86	87	88	89	90
91	92	93	94	95	96	97	98	99	100

A maths teacher says the first term of the sequence is 5 and the term to term rule is + 10
 Complete the next 6 terms in the sequence below.

5 15 25 35

8. Here are some pictures in a sequence.



A maths teacher says the first term of the sequence is 3 and the term to term rule is + 10
 Complete the next 5 terms in the sequence below.

3 13 23 33 43

9. Aliyah says “My sequence starts at 2 and I counted on in tens.”

Her maths teacher says “The first term is 2 and the term to term rule is +10”

2 12 22 32

Complete the next 3 terms in Aliyah’s sequence.

10. Macy-May says “The first term of my sequence is 43 and the term to term rule is +10”

43 53 63

Complete the next 2 terms in Macy-May’s sequence.