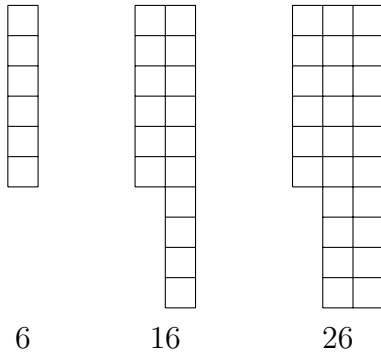


1. Here are some pictures in a sequence and an incomplete 100 square.



1	2	3	4	5		7	8	9	10
11	12	13	14	15		17	18	19	20
21	22	23	24	25		27	28	29	30
31	32	33	34	35	36	37	38	39	40
41	42	43	44	45	46	47	48	49	50
51	52	53	54	55	56	57	58	59	60
61	62	63	64	65	66	67	68	69	70
71	72	73	74	75	76	77	78	79	80
81	82	83	84	85	86	87	88	89	90
91	92	93	94	95	96	97	98	99	100

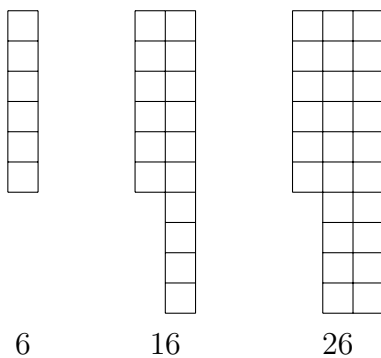
A maths teacher says the first term of the sequence is 6 and the term to term rule is + 10

Complete the next 7 terms in the sequence below.

6 16 26

base10add (7) answers Q1: 36, 46, 56, 66, 76, 86, 96 Q2: 48, 58, 68, 78, 88, 98

1. Here are some pictures in a sequence and an incomplete 100 square.



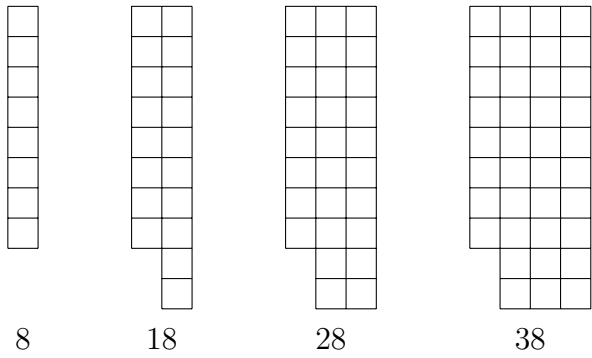
1	2	3	4	5		7	8	9	10
11	12	13	14	15		17	18	19	20
21	22	23	24	25		27	28	29	30
31	32	33	34	35	36	37	38	39	40
41	42	43	44	45	46	47	48	49	50
51	52	53	54	55	56	57	58	59	60
61	62	63	64	65	66	67	68	69	70
71	72	73	74	75	76	77	78	79	80
81	82	83	84	85	86	87	88	89	90
91	92	93	94	95	96	97	98	99	100

A maths teacher says the first term of the sequence is 6 and the term to term rule is + 10

Complete the next 7 terms in the sequence below.

6 16 26

2. Here are some pictures in a sequence and an incomplete 100 square.



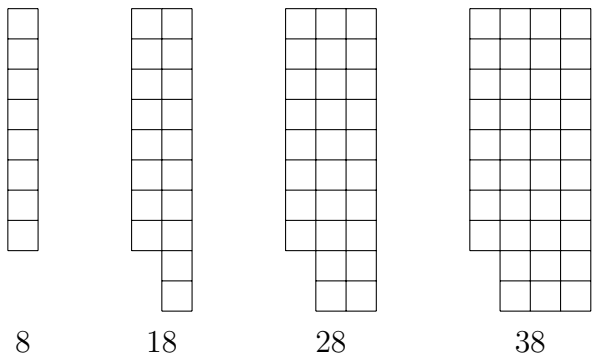
1	2	3	4	5	6	7		9	10
11	12	13	14	15	16	17		19	20
21	22	23	24	25	26	27		29	30
31	32	33	34	35	36	37		39	40
41	42	43	44	45	46	47	48	49	50
51	52	53	54	55	56	57	58	59	60
61	62	63	64	65	66	67	68	69	70
71	72	73	74	75	76	77	78	79	80
81	82	83	84	85	86	87	88	89	90
91	92	93	94	95	96	97	98	99	100

A maths teacher says the first term of the sequence is 8 and the term to term rule is + 10

Complete the next 6 terms in the sequence below.

8 18 28 38

2. Here are some pictures in a sequence and an incomplete 100 square.



1	2	3	4	5	6	7		9	10
11	12	13	14	15	16	17		19	20
21	22	23	24	25	26	27		29	30
31	32	33	34	35	36	37		39	40
41	42	43	44	45	46	47	48	49	50
51	52	53	54	55	56	57	58	59	60
61	62	63	64	65	66	67	68	69	70
71	72	73	74	75	76	77	78	79	80
81	82	83	84	85	86	87	88	89	90
91	92	93	94	95	96	97	98	99	100

A maths teacher says the first term of the sequence is 8 and the term to term rule is + 10

Complete the next 6 terms in the sequence below.

8 18 28 38