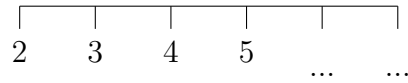


1. Complete the missing numbers.

1	2	3			6	7	8		
---	---	---	--	--	---	---	---	--	--

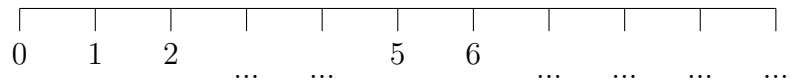
2. Complete the number line.



3. Complete the missing numbers.

3 4 5 6 7

4. Complete the number line.



5. Complete the missing numbers.

2 3 4

6. Complete the missing numbers.

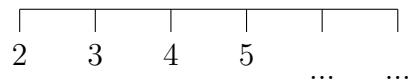
4	5	6			
---	---	---	--	--	--

base10add (1) Q1: 4, 5, ... 9, 10 Q2: 6,7 Q3: 8, 9, 10 Q4: 3, 4, ... 8, 9 Q5: 5, 6, 7, 8 Q6: 7, 8, 9

1. Complete the missing numbers.

1	2	3			6	7	8		
---	---	---	--	--	---	---	---	--	--

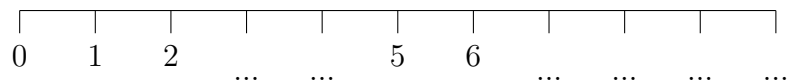
2. Complete the number line.



3. Complete the missing numbers.

3 4 5 6 7

4. Complete the number line.



5. Complete the missing numbers.

2 3 4

6. Complete the missing numbers.

4	5	6			
---	---	---	--	--	--