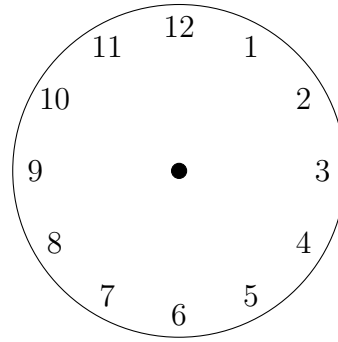
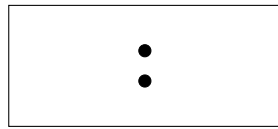
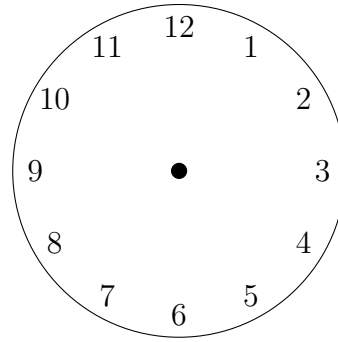
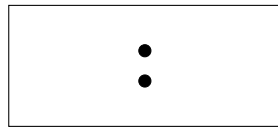


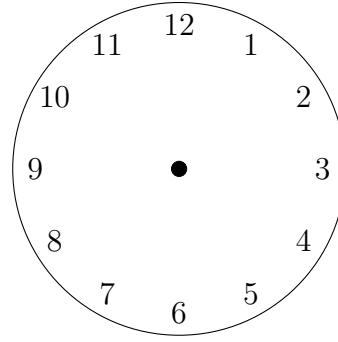
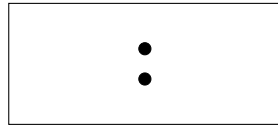
1. Write "Half past three" on this digital clock and draw the hands on this clock face.



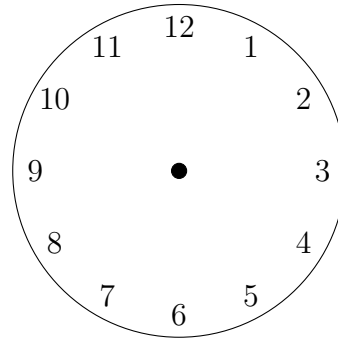
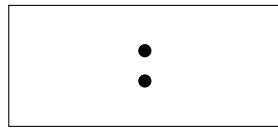
2. Write "Quarter past four" on this digital clock and draw the hands on this clock face.



3. Write "Half past ten" on this digital clock and draw the hands on this clock face.

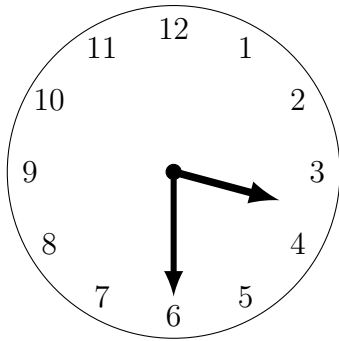


4. Write "Quarter past eleven" on this digital clock and draw the hands on this clock face.



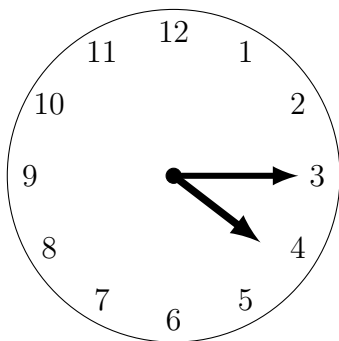
Answers

1. 3:30 or 03:30



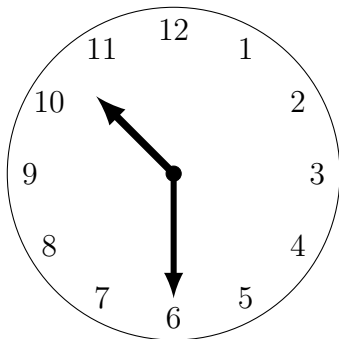
FYI: hour hand about half way towards the next hour

2. 4:15 or 04:15




FYI hour hand less than half way towards the next hour

3. 10:30



FYI hour hand about half way towards the next hour

4. 11:15



FYI hour hand less than half way towards the next hour