




1. Write "Twenty five past four" on this digital clock.




2. Write "Ten past ten" on this digital clock.



3. Write "Five past twelve" on this digital clock.



4. Write "Twenty past two" on this digital clock.



Answers

1. (0)4:25
2. 10:10
3. 12:05
4. (0)2:20