




1. Write "Ten to four" on this digital clock.




2. Write "Twenty five to two" on this digital clock.



3. Write "Five to ten" on this digital clock.



4. Write "Twenty to eleven" on this digital clock.



Answers

1. (0)3:50
2. (0)1:35
3. (0)9:55
4. 10:40