
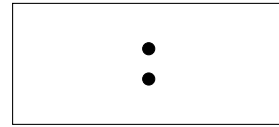



1. Write the time shown on this clock face onto the digital clock.




| |
|---|
| : |
|---|

2. Write the time shown on this clock face onto the digital clock.

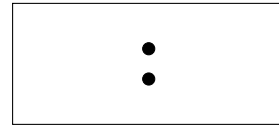



3. Write the time shown on this clock face onto the digital clock.



| |
|---|
| : |
|---|

4. Write the time shown on this clock face onto the digital clock.



Answers

1. 1:00 (or better 01:00)
2. 12:00
3. 5:00 (or better 05:00)
4. 10:00