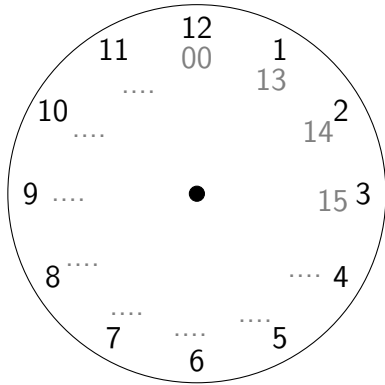
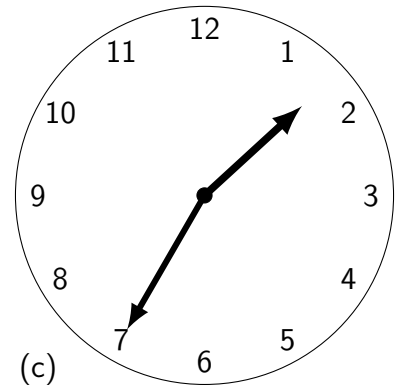
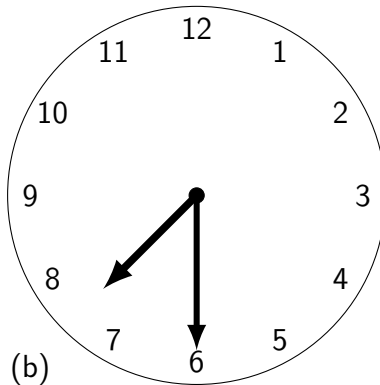
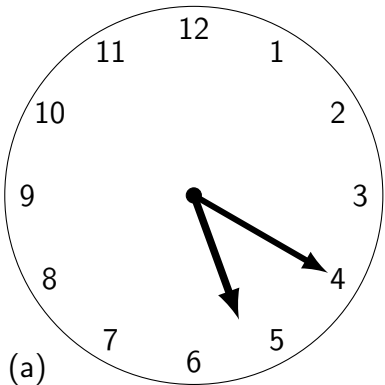


1. Complete the other possible hours when using a 24 hour digital clock.



2. Under each clock face write the time two possible times on the 24 hour clock.



□□:□□ • 24h

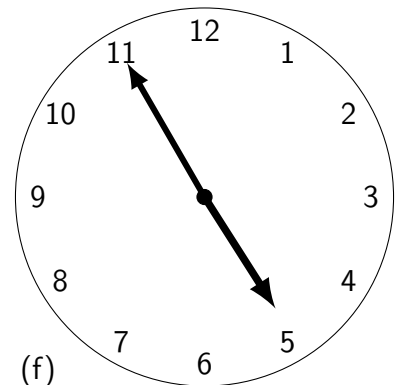
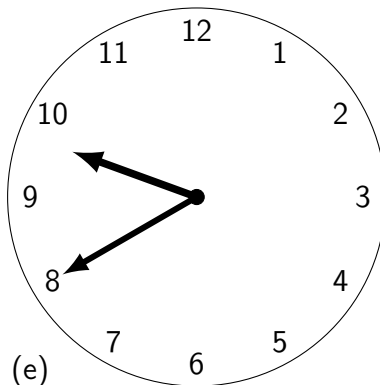
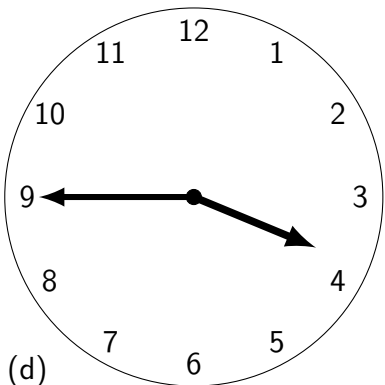
□□:□□ • 24h

□□:□□ • 24h

□□:□□ • 24h

□□:□□ • 24h

□□:□□ • 24h



□□:□□ • 24h

□□:□□ • 24h

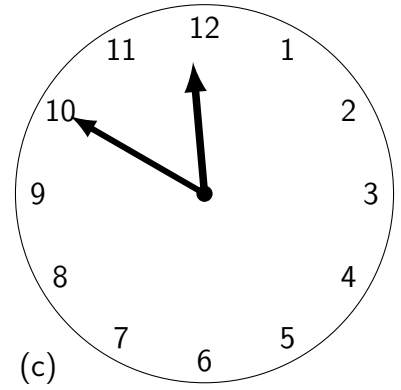
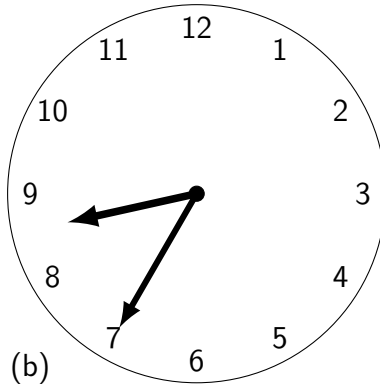
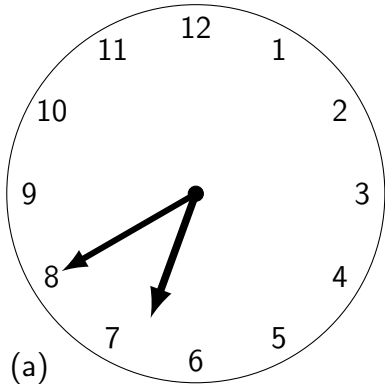
□□:□□ • 24h

□□:□□ • 24h

□□:□□ • 24h

□□:□□ • 24h

3. Under each clock face write the time two possible times on the 24 hour clock.



24h

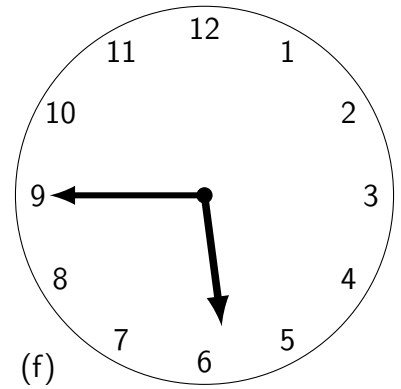
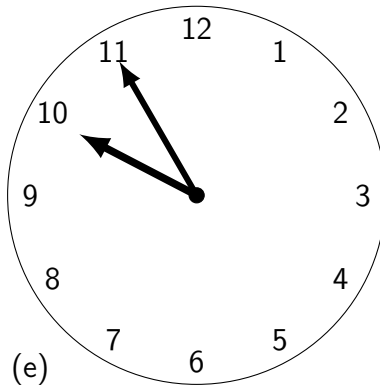
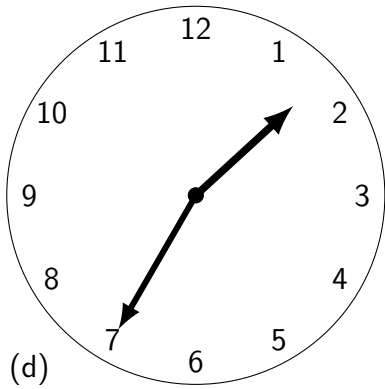
24h

24h

24h

24h

24h



24h

24h

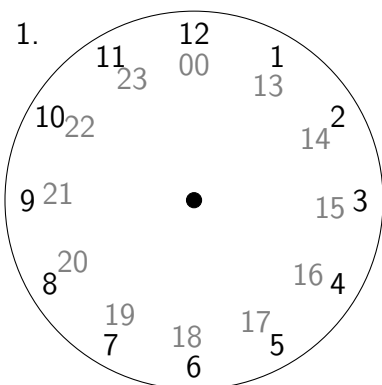
24h

24h

24h

24h

Answers:



2	(a)	(b)	(c)	(d)	(e)	(f)
	05:20	07:30	01:35	03:45	09:40	04:55
	17:20	19:30	13:35	15:45	21:40	16:55

3	(a)	(b)	(c)	(d)	(e)	(f)
	06:40	08:35	11:50	01:35	09:55	5:45
	18:40	20:35	23:50	13:35	21:55	17:45