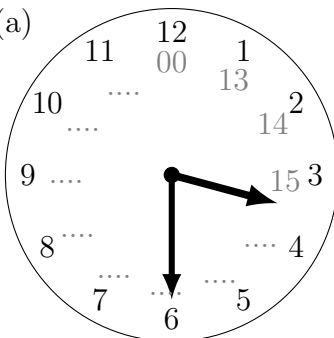
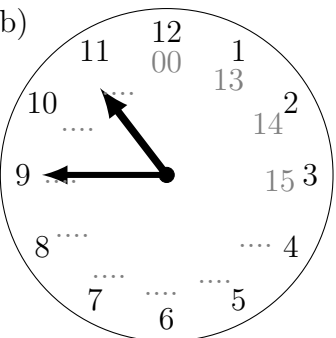
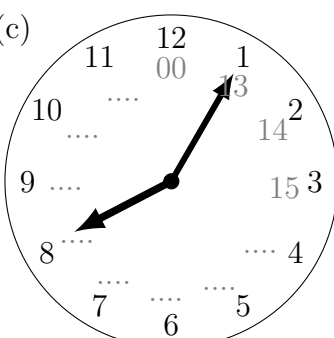
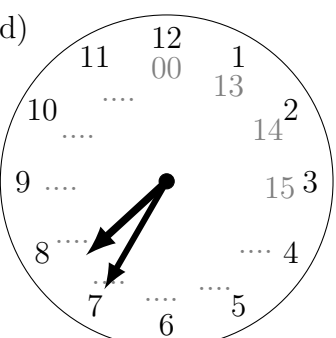


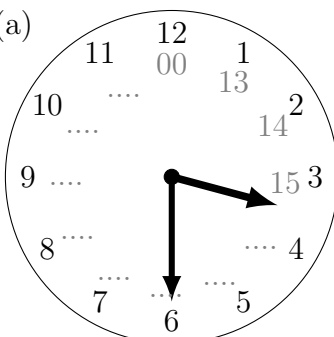
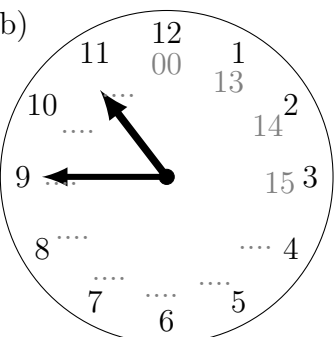
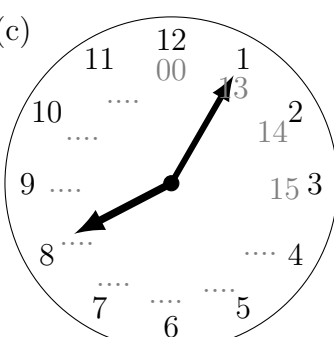
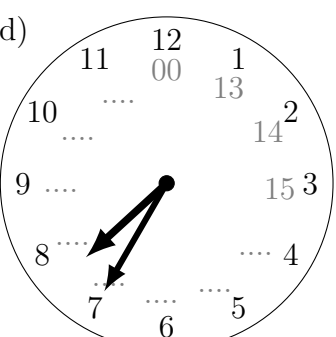
1. For each clock face, write the two possible times on the 24 hour digital clocks.

<p>(a)</p>  <div style="display: flex; flex-direction: column; align-items: center; margin-top: 10px;"> <div style="border: 1px solid black; padding: 5px; margin-bottom: 10px;">: 24</div> <div style="border: 1px solid black; padding: 5px;">: 24</div> </div>	<p>(b)</p>  <div style="display: flex; flex-direction: column; align-items: center; margin-top: 10px;"> <div style="border: 1px solid black; padding: 5px; margin-bottom: 10px;">: 24</div> <div style="border: 1px solid black; padding: 5px;">: 24</div> </div>
<p>(c)</p>  <div style="display: flex; flex-direction: column; align-items: center; margin-top: 10px;"> <div style="border: 1px solid black; padding: 5px; margin-bottom: 10px;">: 24</div> <div style="border: 1px solid black; padding: 5px;">: 24</div> </div>	<p>(d)</p>  <div style="display: flex; flex-direction: column; align-items: center; margin-top: 10px;"> <div style="border: 1px solid black; padding: 5px; margin-bottom: 10px;">: 24</div> <div style="border: 1px solid black; padding: 5px;">: 24</div> </div>

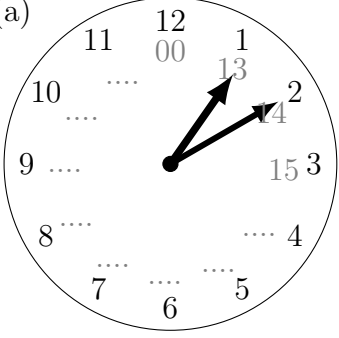
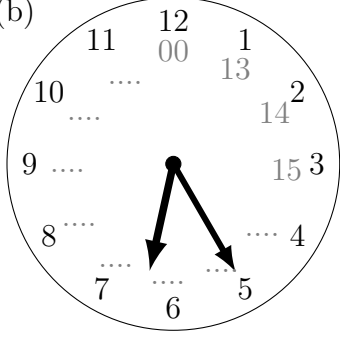
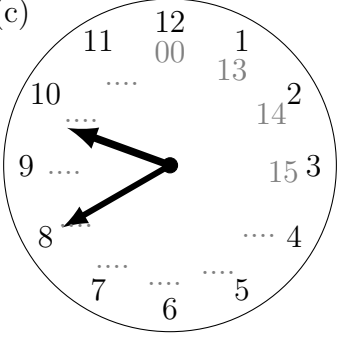
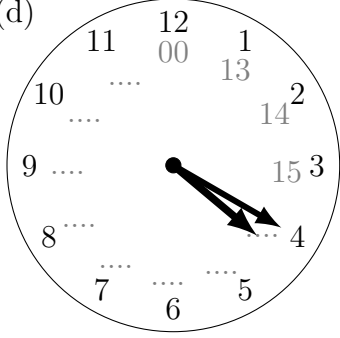
timeRead (9) Answers

1. (a) 03:30 and 15:30 (b) 10:45 and 22:45 (c) 08:05 and 20:45 (d) 07:35 and 19:35
 2. (a) 01:10 and 13:10 (b) 06:25 and 18:25 (c) 09:40 and 21:40 (d) 04:20 and 16:20

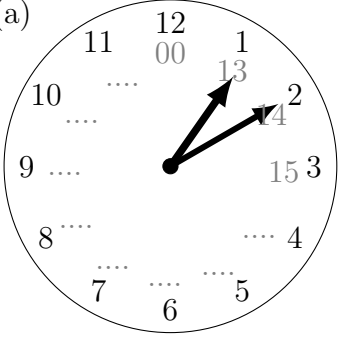
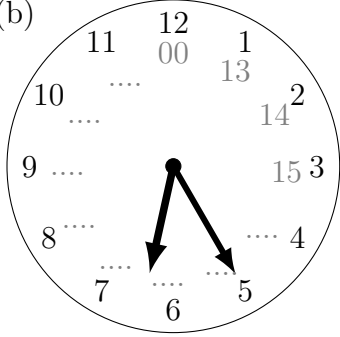
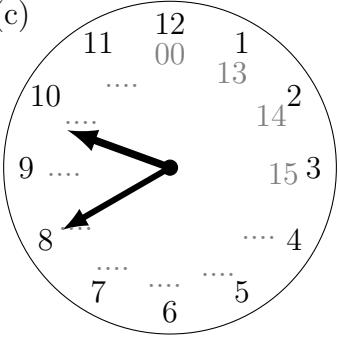
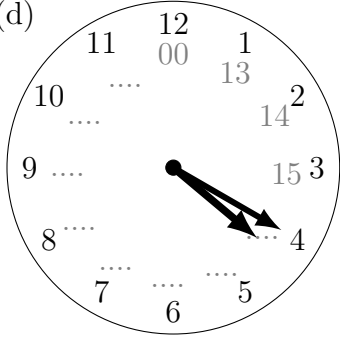
1. For each clock face, write the two possible times on the 24 hour digital clocks.

<p>(a)</p>  <div style="display: flex; flex-direction: column; align-items: center; margin-top: 10px;"> <div style="border: 1px solid black; padding: 5px; margin-bottom: 10px;">: 24</div> <div style="border: 1px solid black; padding: 5px;">: 24</div> </div>	<p>(b)</p>  <div style="display: flex; flex-direction: column; align-items: center; margin-top: 10px;"> <div style="border: 1px solid black; padding: 5px; margin-bottom: 10px;">: 24</div> <div style="border: 1px solid black; padding: 5px;">: 24</div> </div>
<p>(c)</p>  <div style="display: flex; flex-direction: column; align-items: center; margin-top: 10px;"> <div style="border: 1px solid black; padding: 5px; margin-bottom: 10px;">: 24</div> <div style="border: 1px solid black; padding: 5px;">: 24</div> </div>	<p>(d)</p>  <div style="display: flex; flex-direction: column; align-items: center; margin-top: 10px;"> <div style="border: 1px solid black; padding: 5px; margin-bottom: 10px;">: 24</div> <div style="border: 1px solid black; padding: 5px;">: 24</div> </div>

2. For each clock face, write the two possible times on the 24 hour digital clocks.

<p>(a)</p>  <p>Two empty boxes for digital time: <input type="text"/> : <input type="text"/> 24</p> <p>Two empty boxes for digital time: <input type="text"/> : <input type="text"/> 24</p>	<p>(b)</p>  <p>Two empty boxes for digital time: <input type="text"/> : <input type="text"/> 24</p> <p>Two empty boxes for digital time: <input type="text"/> : <input type="text"/> 24</p>
<p>(c)</p>  <p>Two empty boxes for digital time: <input type="text"/> : <input type="text"/> 24</p> <p>Two empty boxes for digital time: <input type="text"/> : <input type="text"/> 24</p>	<p>(d)</p>  <p>Two empty boxes for digital time: <input type="text"/> : <input type="text"/> 24</p> <p>Two empty boxes for digital time: <input type="text"/> : <input type="text"/> 24</p>

2. For each clock face, write the two possible times on the 24 hour digital clocks.

<p>(a)</p>  <p>Two empty boxes for digital time: <input type="text"/> : <input type="text"/> 24</p> <p>Two empty boxes for digital time: <input type="text"/> : <input type="text"/> 24</p>	<p>(b)</p>  <p>Two empty boxes for digital time: <input type="text"/> : <input type="text"/> 24</p> <p>Two empty boxes for digital time: <input type="text"/> : <input type="text"/> 24</p>
<p>(c)</p>  <p>Two empty boxes for digital time: <input type="text"/> : <input type="text"/> 24</p> <p>Two empty boxes for digital time: <input type="text"/> : <input type="text"/> 24</p>	<p>(d)</p>  <p>Two empty boxes for digital time: <input type="text"/> : <input type="text"/> 24</p> <p>Two empty boxes for digital time: <input type="text"/> : <input type="text"/> 24</p>