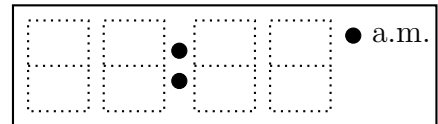
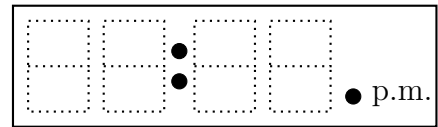


1. Write each time on the digital clock.

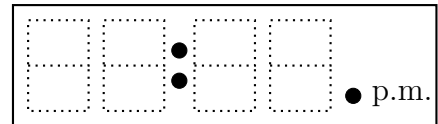
(a) "Half past seven"



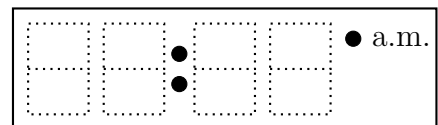
(b) "Quarter past two"



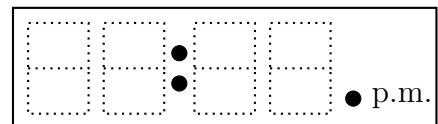
(c) "Half past eight"



(d) "Quarter past ten"



(e) "Quarter past four"

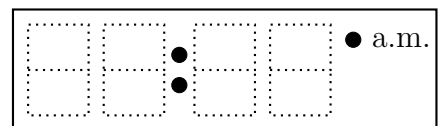


timeRead (8) Q1: (a) 07:30, (b) 02:15, (c) 08:30, (d) 10:15, (e) 04:15

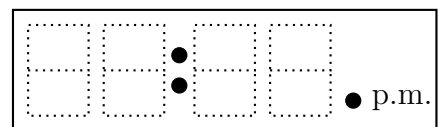
Q2: (a) 11:30, (b) 06:15, (c) 09:30, (d) 03:15, (e) 01:30

1. Write each time on the digital clock.

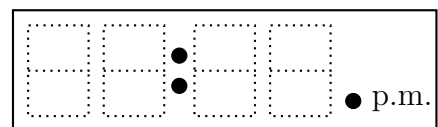
(a) "Half past seven"



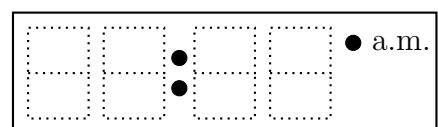
(b) "Quarter past two"



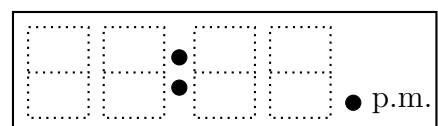
(c) "Half past eight"



(d) "Quarter past ten"

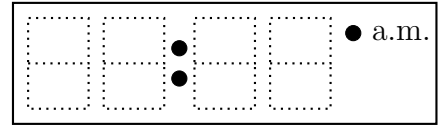


(e) "Quarter past four"

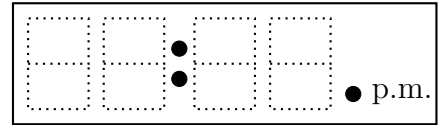


2. Write each time on the digital clock.

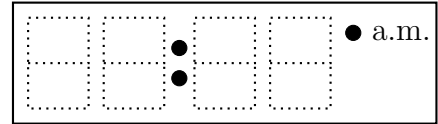
(a) "Half past eleven"



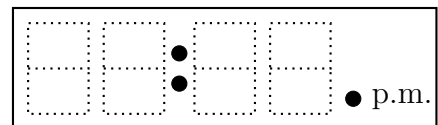
(b) "Quarter past six"



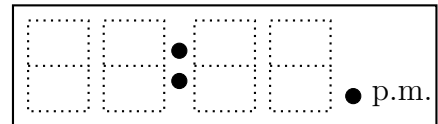
(c) "Half past nine"



(d) "Quarter past three"

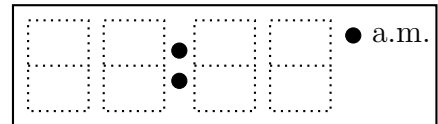


(e) "Half past one"

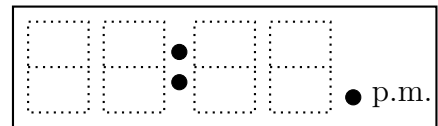


2. Write each time on the digital clock.

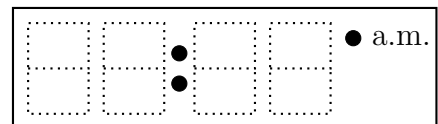
(a) "Half past eleven"



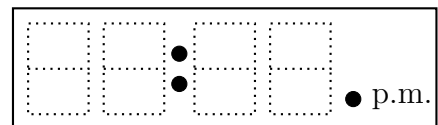
(b) "Quarter past six"



(c) "Half past nine"



(d) "Quarter past three"



(e) "Half past one"

