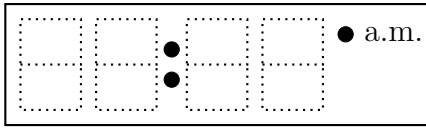
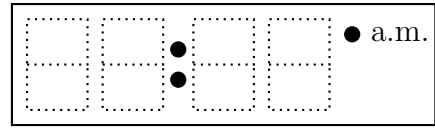


1. Write these times on the digital clocks.

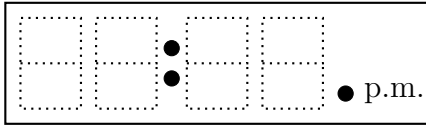
(a) "Ten past five"



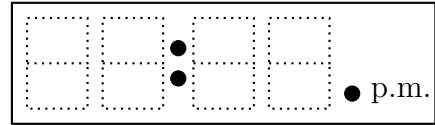
(b) "Ten to five"



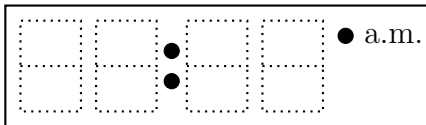
(c) "Twenty past three"



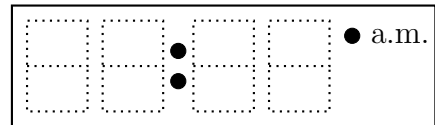
(d) "Twenty to three"



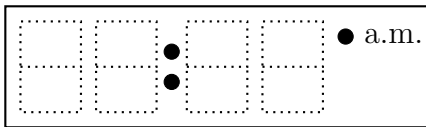
(e) "Five past eight"



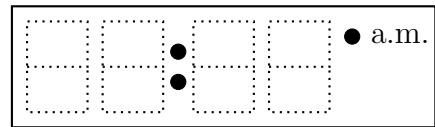
(f) "Five to eight"



(g) "Twenty five past two"



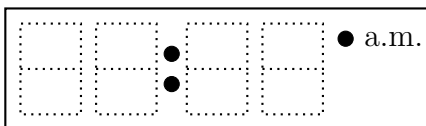
(h) "Twenty five to two"



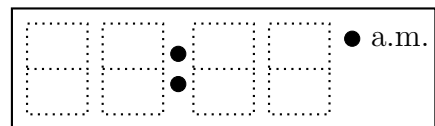
timeRead (14) Q1 (a) 05:10, (b) 04:50, (c) 03:20, (d) 02:40, (e) 08:05, (f) 07:55, (g) 02:25, (h) 01:35
 Q2 (a) 09:10, (b) 08:50, (c) 06:40, (d) 11:55, (e), (f) 03:35, (g) 10:50, (h) 05:55

1. Write these times on the digital clocks.

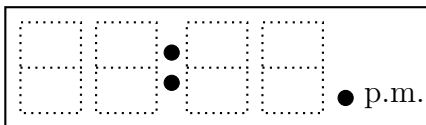
(a) "Ten past five"



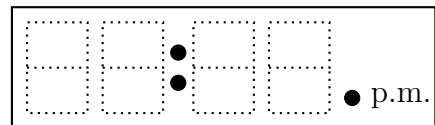
(b) "Ten to five"



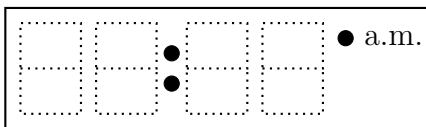
(c) "Twenty past three"



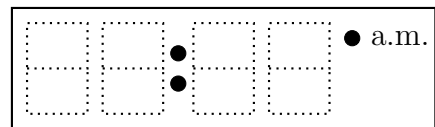
(d) "Twenty to three"



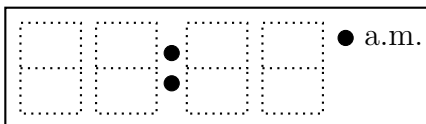
(e) "Five past eight"



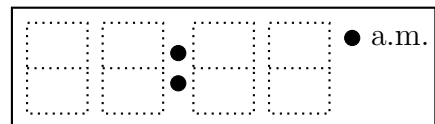
(f) "Five to eight"



(g) "Twenty five past two"

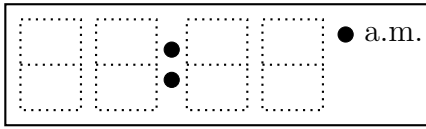


(h) "Twenty five to two"

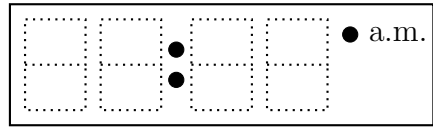


2. Write these times on the digital clocks.

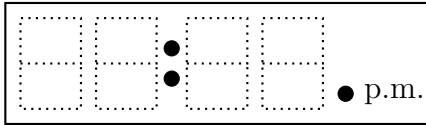
(a) "Ten past nine"



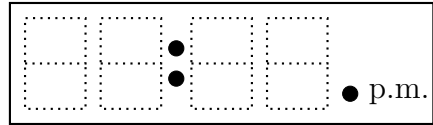
(b) "Ten to nine"



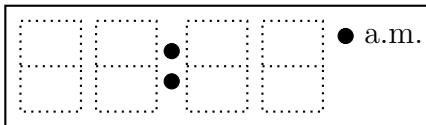
(c) "Twenty to seven"



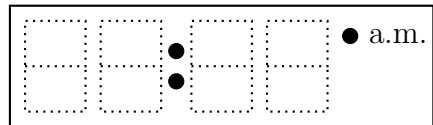
(d) "Five to twelve"



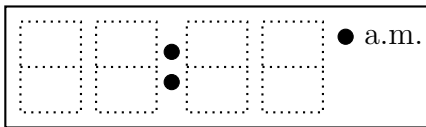
(e) "Twenty five to four"



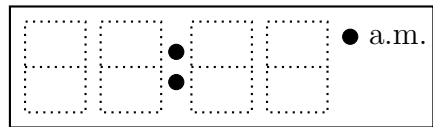
(f) "Ten to eleven"



(g) "Twenty to ten"

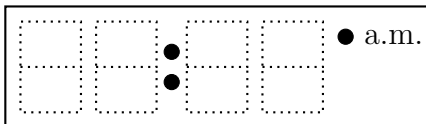


(h) "Five to six"

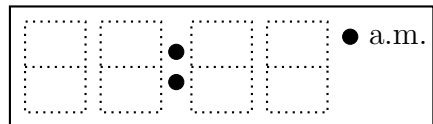


2. Write these times on the digital clocks.

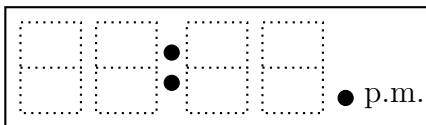
(a) "Ten past nine"



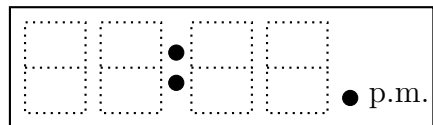
(b) "Ten to nine"



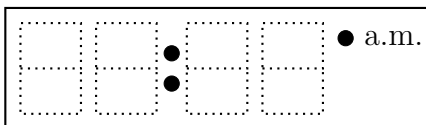
(c) "Twenty to seven"



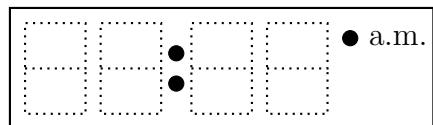
(d) "Five to twelve"



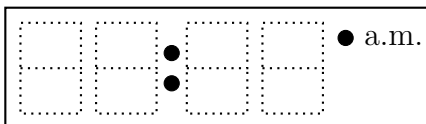
(e) "Twenty five to four"



(f) "Ten to eleven"



(g) "Twenty to ten"



(h) "Five to six"

