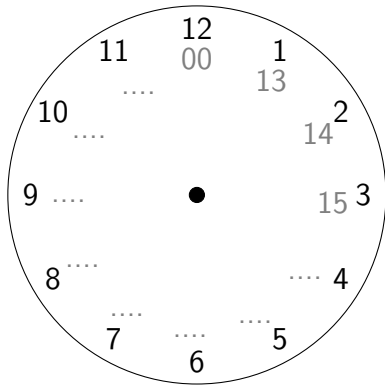
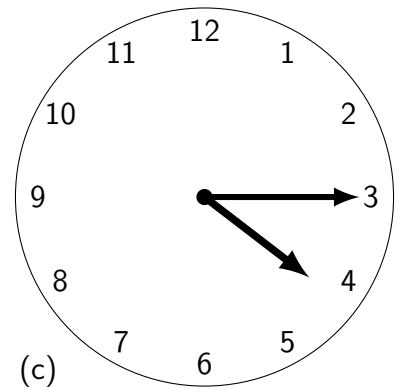
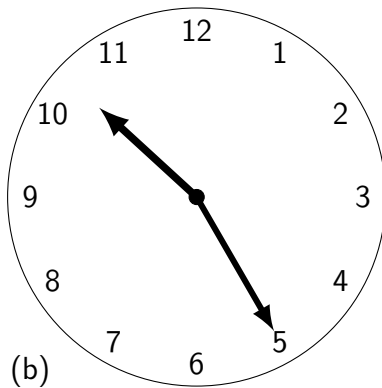
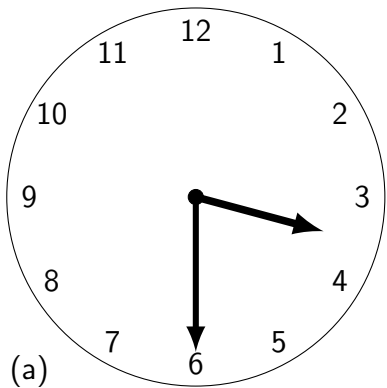


1. Complete the other possible hours when using a 24 hour digital clock.



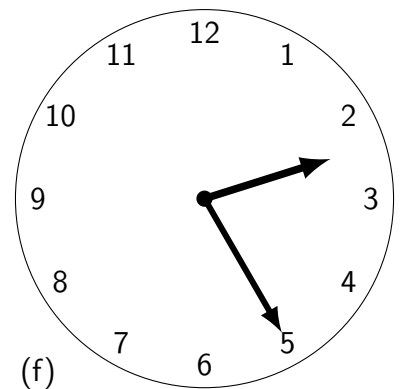
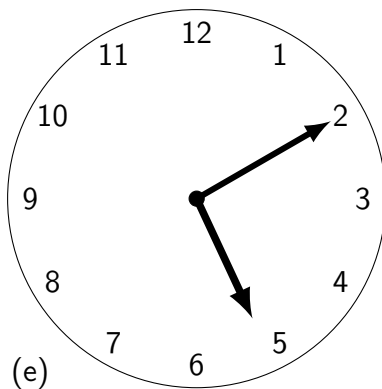
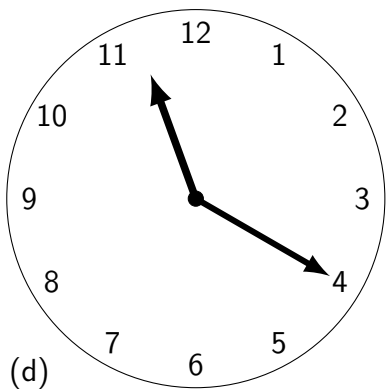
2. Under each clock face write the time two possible times on the 24 hour clock.



Two digital clock display boxes for (a). Each box has a dotted grid and a dot for the colon. The first box has a dot at the 3 o'clock position, and the second box has a dot at the 6 o'clock position.

Two digital clock display boxes for (b). Each box has a dotted grid and a dot for the colon. The first box has a dot at the 10 o'clock position, and the second box has a dot at the 12 o'clock position.

Two digital clock display boxes for (c). Each box has a dotted grid and a dot for the colon. The first box has a dot at the 3:30 position, and the second box has a dot at the 6:30 position.

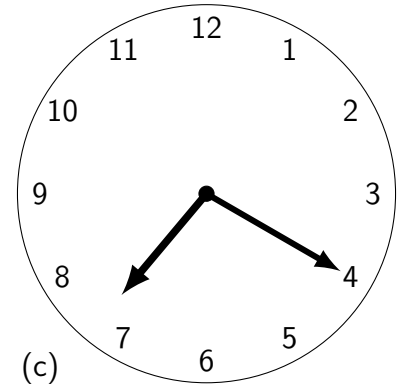
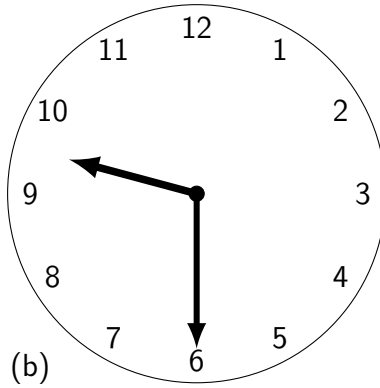
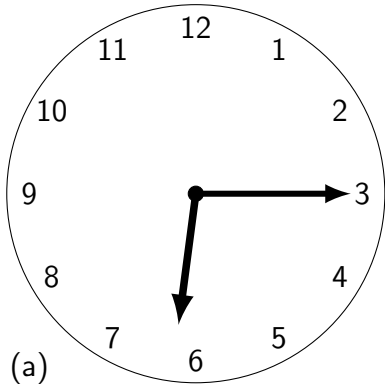


Two digital clock display boxes for (d). Each box has a dotted grid and a dot for the colon. The first box has a dot at the 11 o'clock position, and the second box has a dot at the 12 o'clock position.

Two digital clock display boxes for (e). Each box has a dotted grid and a dot for the colon. The first box has a dot at the 2 o'clock position, and the second box has a dot at the 12 o'clock position.

Two digital clock display boxes for (f). Each box has a dotted grid and a dot for the colon. The first box has a dot at the 2:30 position, and the second box has a dot at the 6:30 position.

3. Under each clock face write the time two possible times on the 24 hour clock.



□	□	□	□	●	□	□	□	●	24h
---	---	---	---	---	---	---	---	---	-----

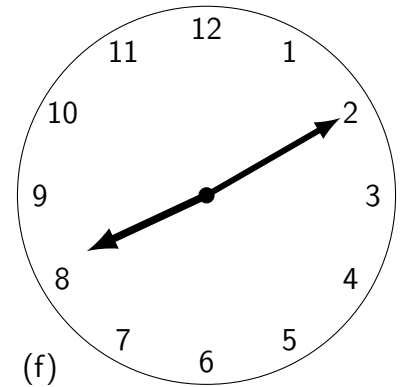
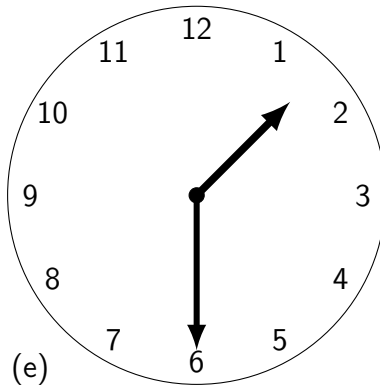
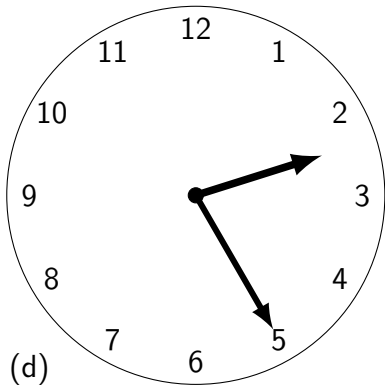
□	□	□	□	●	□	□	□	●	24h
---	---	---	---	---	---	---	---	---	-----

□	□	□	□	●	□	□	□	●	24h
---	---	---	---	---	---	---	---	---	-----

□	□	□	□	●	□	□	□	●	24h
---	---	---	---	---	---	---	---	---	-----

□	□	□	□	●	□	□	□	●	24h
---	---	---	---	---	---	---	---	---	-----

□	□	□	□	●	□	□	□	●	24h
---	---	---	---	---	---	---	---	---	-----



□	□	□	□	●	□	□	□	●	24h
---	---	---	---	---	---	---	---	---	-----

□	□	□	□	●	□	□	□	●	24h
---	---	---	---	---	---	---	---	---	-----

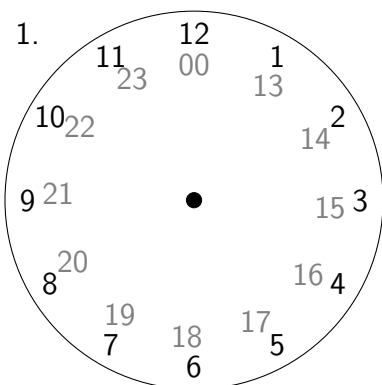
□	□	□	□	●	□	□	□	●	24h
---	---	---	---	---	---	---	---	---	-----

□	□	□	□	●	□	□	□	●	24h
---	---	---	---	---	---	---	---	---	-----

□	□	□	□	●	□	□	□	●	24h
---	---	---	---	---	---	---	---	---	-----

□	□	□	□	●	□	□	□	●	24h
---	---	---	---	---	---	---	---	---	-----

Answers:



2	(a)	(b)	(c)	(d)	(e)	(f)
	03:30	10:25	04:15	11:20	05:10	02:25
	15:30	22:25	16:15	23:20	17:10	14:25

3	(a)	(b)	(c)	(d)	(e)	(f)
	06:15	09:30	07:20	02:25	01:30	08:10
	18:15	21:30	19:20	14:25	13:30	20:10