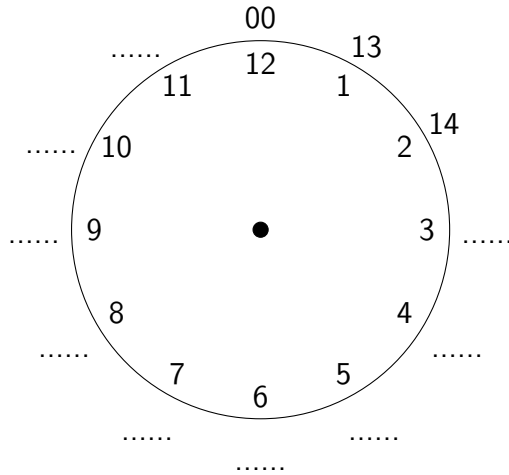
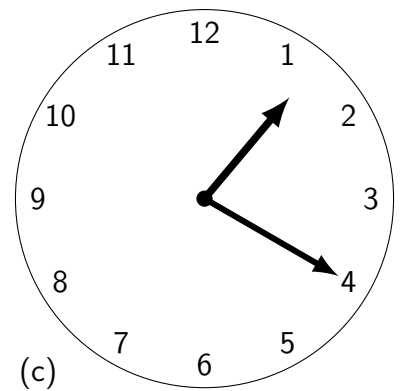
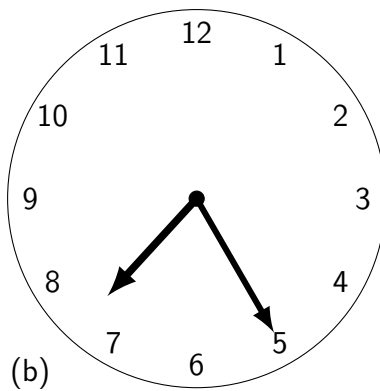
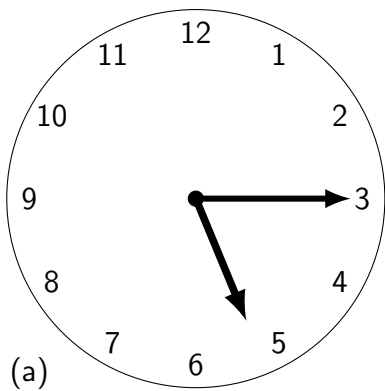


1. Complete the other possible hours when using a 24 hour digital clock.



2. Under each clock face write the time two possible times on the 24 hour clock.



□	□	□	□	●	□	□	□	●	24h
---	---	---	---	---	---	---	---	---	-----

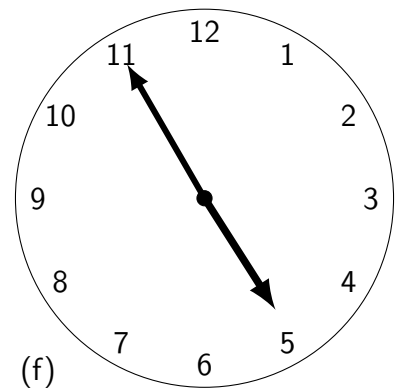
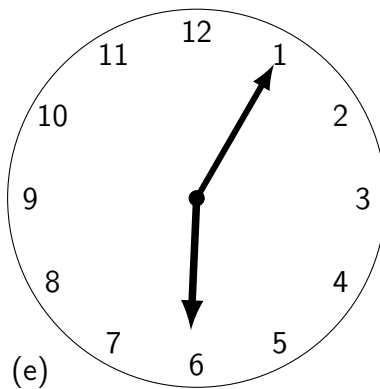
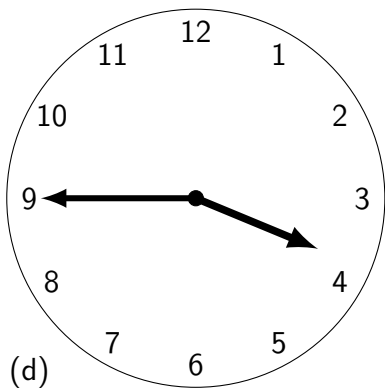
□	□	□	□	●	□	□	□	●	24h
---	---	---	---	---	---	---	---	---	-----

□	□	□	□	●	□	□	□	●	24h
---	---	---	---	---	---	---	---	---	-----

□	□	□	□	●	□	□	□	●	24h
---	---	---	---	---	---	---	---	---	-----

□	□	□	□	●	□	□	□	●	24h
---	---	---	---	---	---	---	---	---	-----

□	□	□	□	●	□	□	□	●	24h
---	---	---	---	---	---	---	---	---	-----



□	□	□	□	●	□	□	□	●	24h
---	---	---	---	---	---	---	---	---	-----

□	□	□	□	●	□	□	□	●	24h
---	---	---	---	---	---	---	---	---	-----

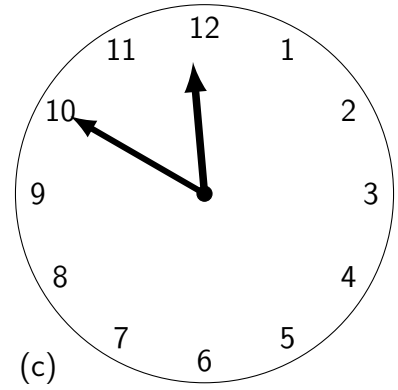
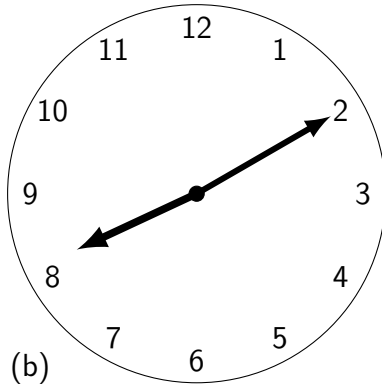
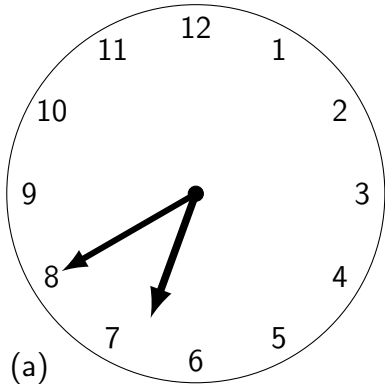
□	□	□	□	●	□	□	□	●	24h
---	---	---	---	---	---	---	---	---	-----

□	□	□	□	●	□	□	□	●	24h
---	---	---	---	---	---	---	---	---	-----

□	□	□	□	●	□	□	□	●	24h
---	---	---	---	---	---	---	---	---	-----

□	□	□	□	●	□	□	□	●	24h
---	---	---	---	---	---	---	---	---	-----

3. Under each clock face write the time two possible times on the 24 hour clock.



24h

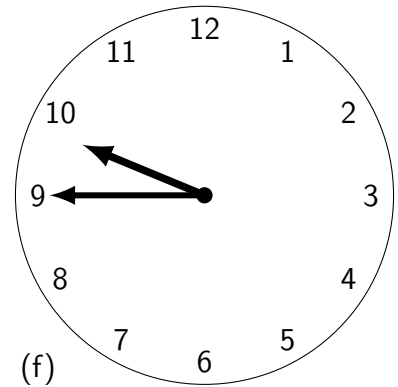
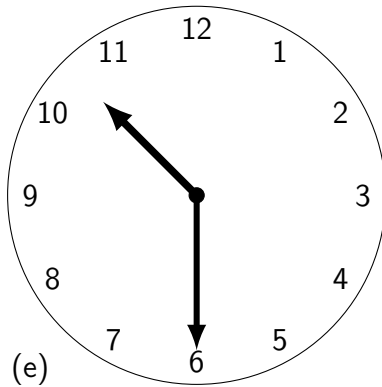
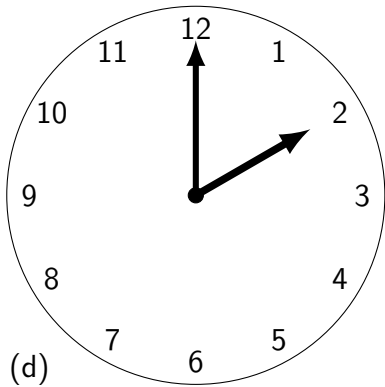
24h

24h

24h

24h

24h



24h

24h

24h

24h

24h

24h

4. Extension: Write these 24 hour clock times on the digital clocks below.

(a)

(b)

(c)

24h

24h

24h

p.m.

p.m.

p.m.