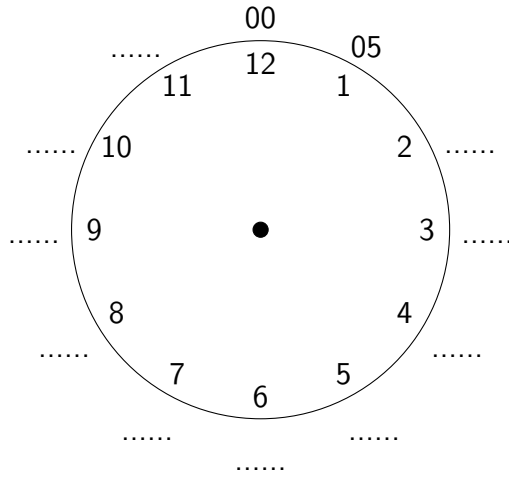
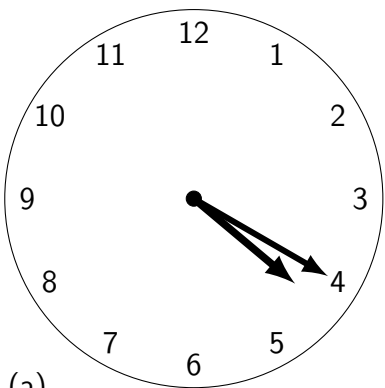


1. Complete the minutes on the outside of this clock face.

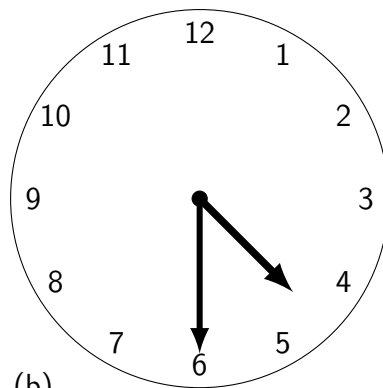


2. Under each clock face write the time on the digital clock.



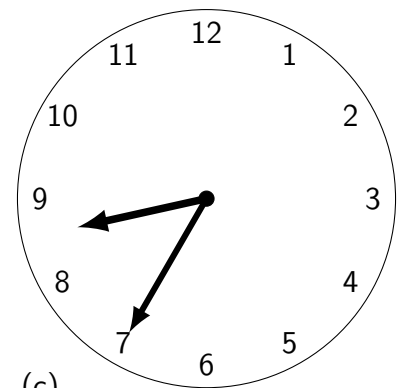
(a)

□	□	□	□	●	□	□	□	●	p.m.
□	□	□	□	□	□	□	□		



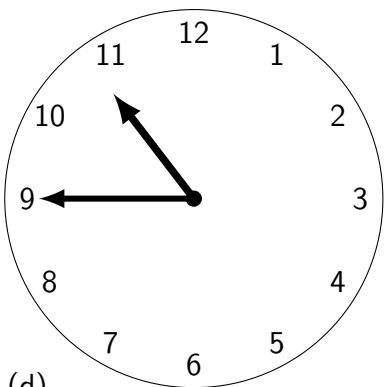
(b)

□	□	□	□	●	□	□	□	●	p.m.
□	□	□	□	□	□	□	□		



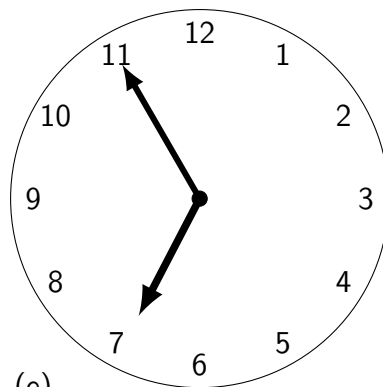
(c)

□	□	□	□	●	□	□	□	●	a.m.
□	□	□	□	□	□	□	□		



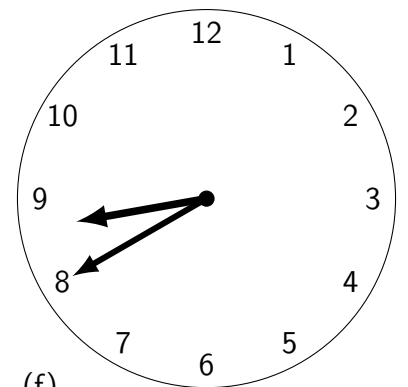
(d)

□	□	□	□	●	□	□	□	●	a.m.
□	□	□	□	□	□	□	□		



(e)

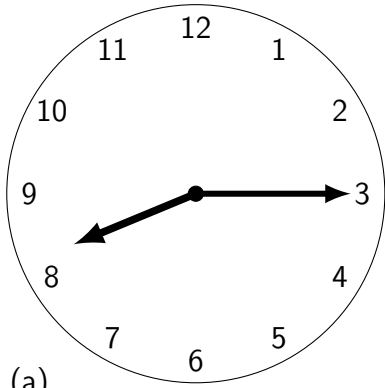
□	□	□	□	●	□	□	□	●	p.m.
□	□	□	□	□	□	□	□		



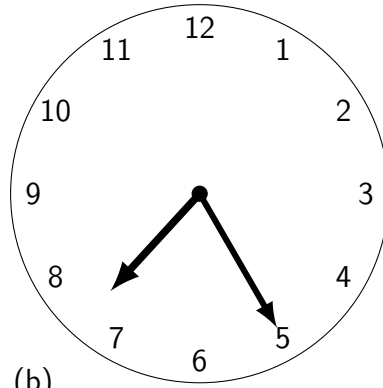
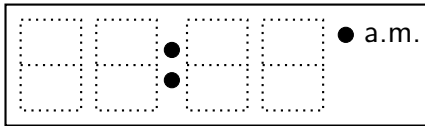
(f)

□	□	□	□	●	□	□	□	●	p.m.
□	□	□	□	□	□	□	□		

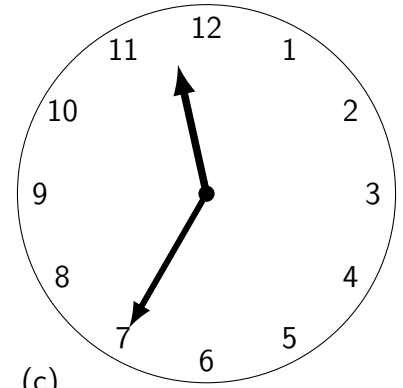
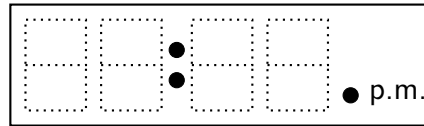
3. Under each clock face write the time on the digital clock.



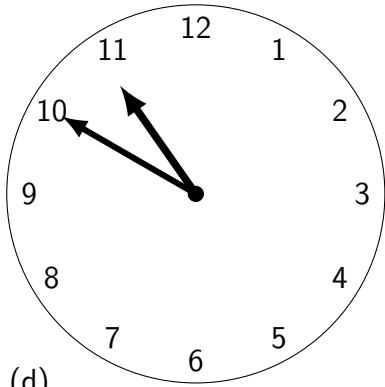
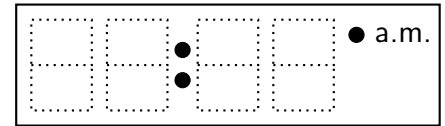
(a)



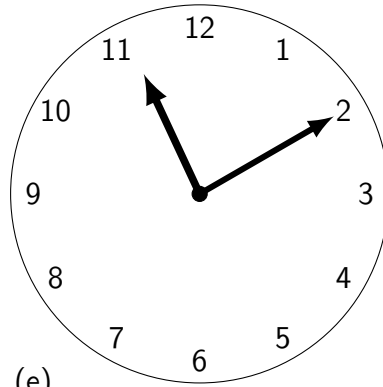
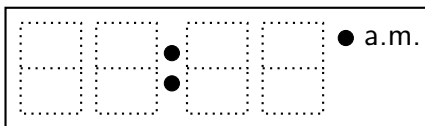
(b)



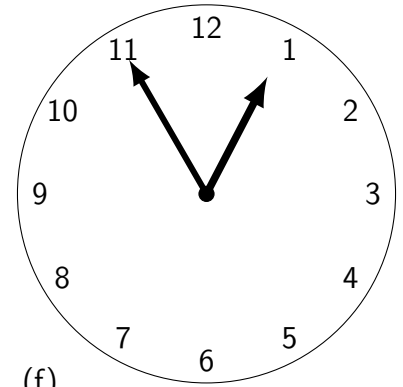
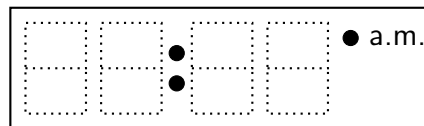
(c)



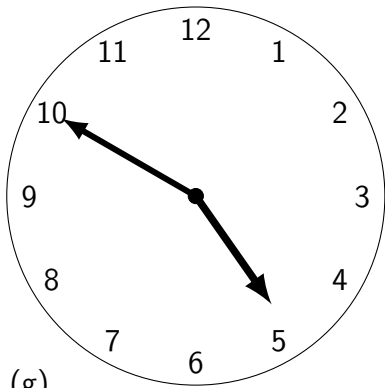
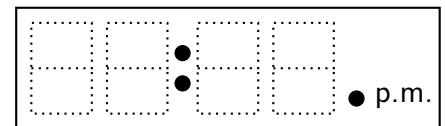
(d)



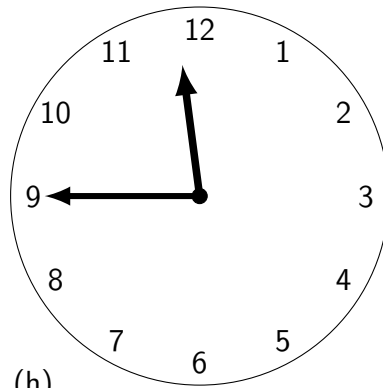
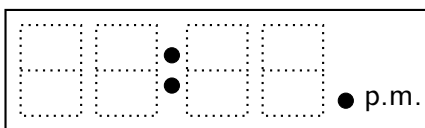
(e)



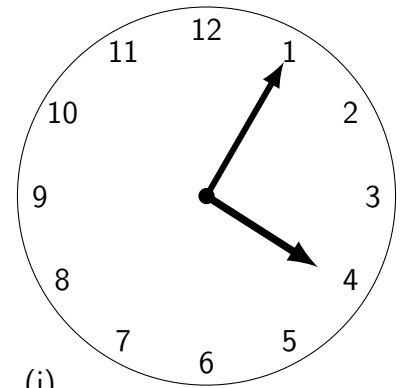
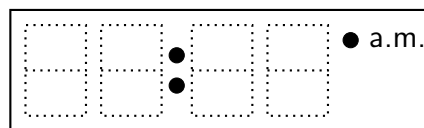
(f)



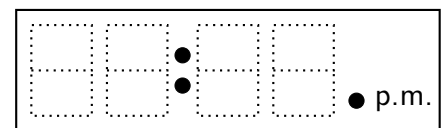
(g)



(h)



(i)



Answers: Q2 (a) 04:20 (b) 04:30 (c) 08:35 (d) 10: 45 (e) 06:55 (f) 08:40

Q3 (a) 08:15 (b) 07:25 (c) 11:35 (d) 10: 50 (e) 11:10 (f) 12:55

(g) 04: 50 (h) 11:45 (i) 04:05