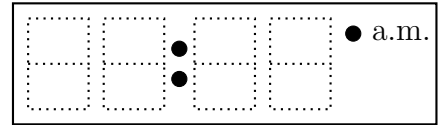
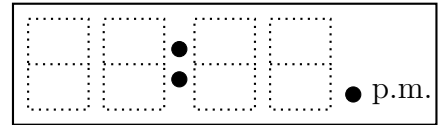


1. Write each time on the digital clock.

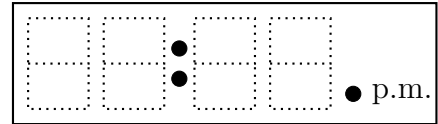
(a) "Twenty to seven"



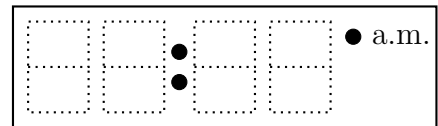
(b) "Five to two"



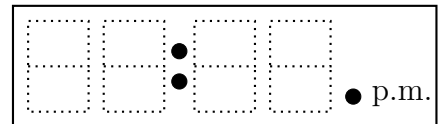
(c) "Twenty five to six"



(d) "Quarter to ten"



(e) "Ten to five"

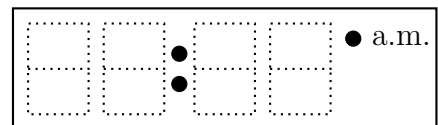


timeRead (12) Q1. (a) 06:40 (b) 01:55 (c) 05:35 (d) 09:45 (e) 04:50

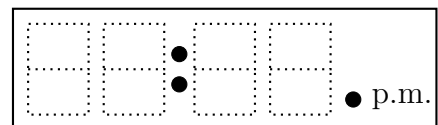
Q2: (a) 08:45 (b) 11:40 (c) 07:50 (d) 03:45 (e) 12:35

1. Write each time on the digital clock.

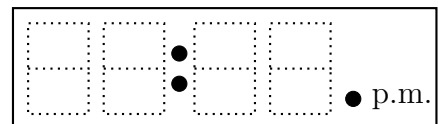
(a) "Twenty to seven"



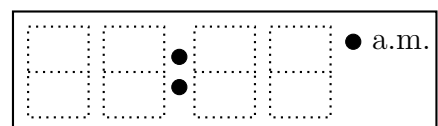
(b) "Five to two"



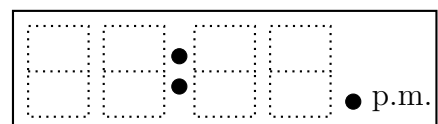
(c) "Twenty five to six"



(d) "Quarter to ten"

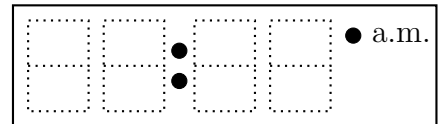


(e) "Ten to five"

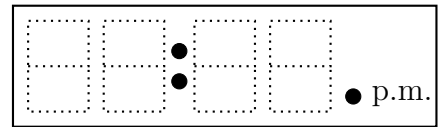


2. Write each time on the digital clock.

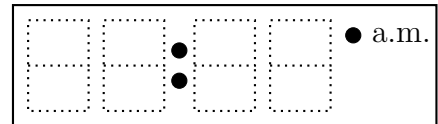
(a) "Quarter to nine"



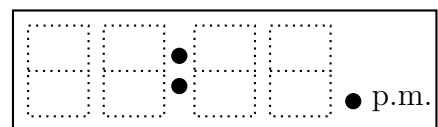
(b) "Twenty to twelve"



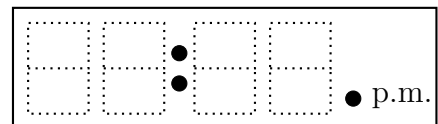
(c) "Ten to eight"



(d) "Quarter to four"

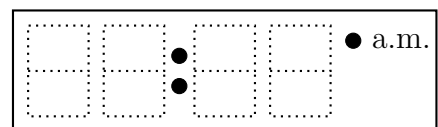


(e) "Twenty five to one"

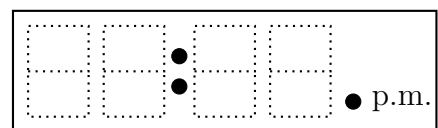


2. Write each time on the digital clock.

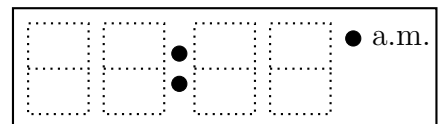
(a) "Quarter to nine"



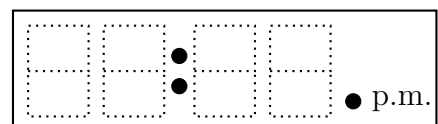
(b) "Twenty to twelve"



(c) "Ten to eight"



(d) "Quarter to four"



(e) "Twenty five to one"

