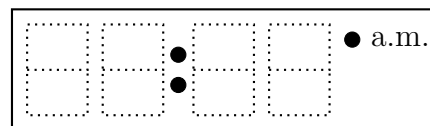
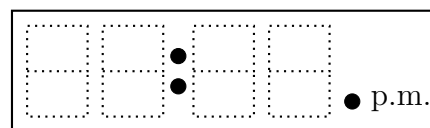


1. Write each time on the digital clock.

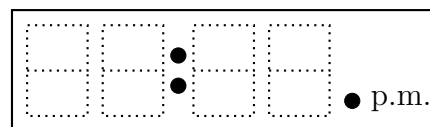
(a) "Ten past nine"



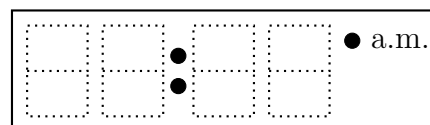
(b) "Twenty five past five"



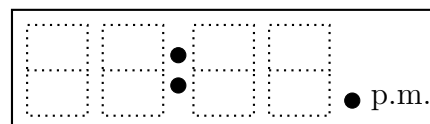
(c) "Five past four"



(d) "Twenty past eleven"



(e) "Five past seven"

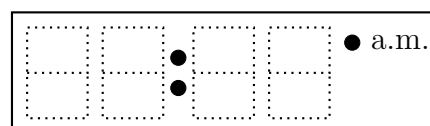


timeRead (12) Q1. (a) 09:10 (b) 05:25 (c) 04:05 (d) 11:20 (e) 07:05

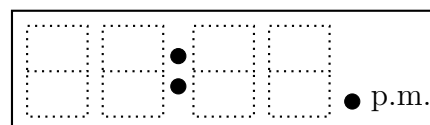
Q2: (a) 08:10 (b) 09:05 (c) 10:25 (d) 01:10 (e) 03:05

1. Write each time on the digital clock.

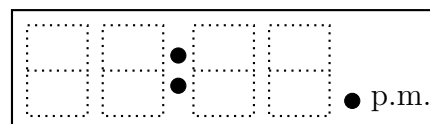
(a) "Ten past nine"



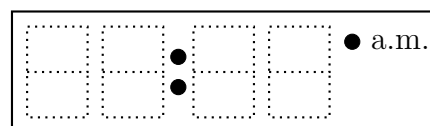
(b) "Twenty five past five"



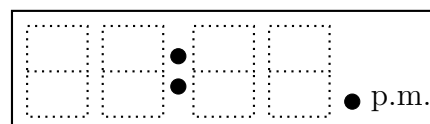
(c) "Five past four"



(d) "Twenty past eleven"

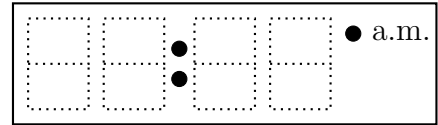


(e) "Five past seven"

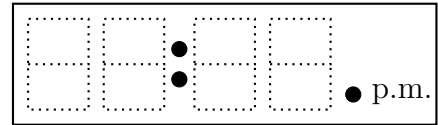


2. Write each time on the digital clock.

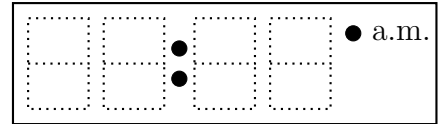
(a) "Ten past eight"



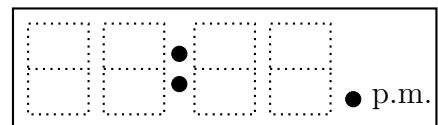
(b) "Five past nine"



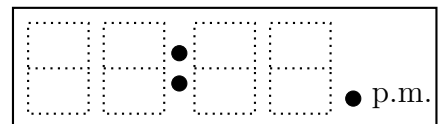
(c) "Twenty five past ten"



(d) "Ten past one"

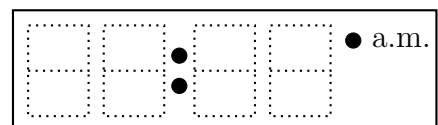


(e) "Five past three"

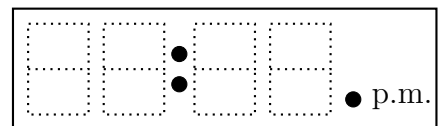


2. Write each time on the digital clock.

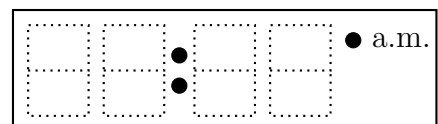
(a) "Ten past eight"



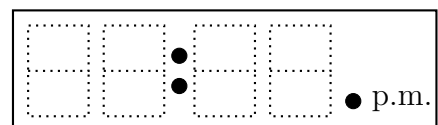
(b) "Five past nine"



(c) "Twenty five past ten"



(d) "Ten past one"



(e) "Five past three"

