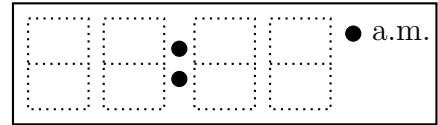
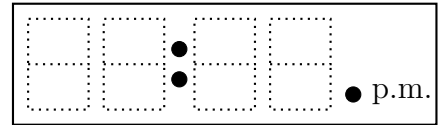


1. Write each time on the digital clock.

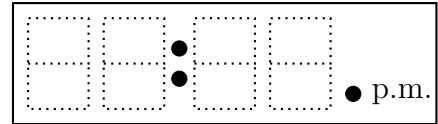
(a) "Twenty past seven"



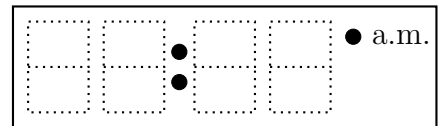
(b) "Twenty to seven"



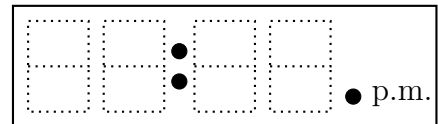
(c) "Ten past five"



(d) "Ten to five"



(e) "Quarter past five"

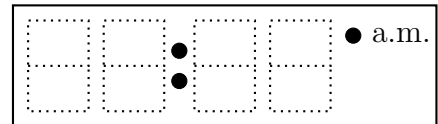


timeRead (12) Q1. (a) 07:20 (b) 06:40 (c) 05:10 (d) 04:50 (e) 05:15

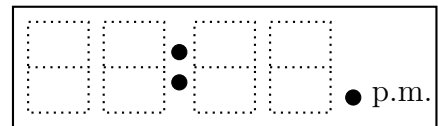
Q2: (a) 09:15 (b) 08:45 (c) 08:25 (d) 03:40 (e) 02:55

1. Write each time on the digital clock.

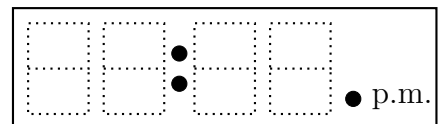
(a) "Twenty past seven"



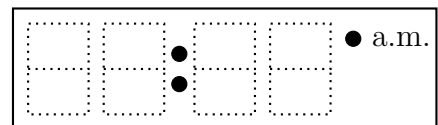
(b) "Twenty to seven"



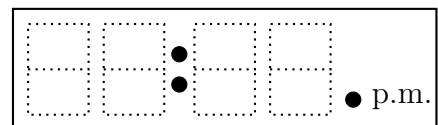
(c) "Ten past five"



(d) "Ten to five"

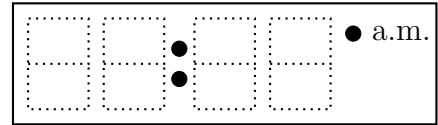


(e) "Quarter past five"

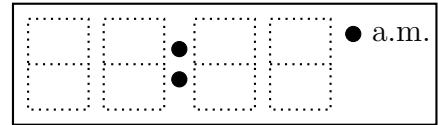


2. Write each time on the digital clock.

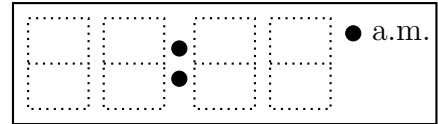
(a) "Quarter past nine"



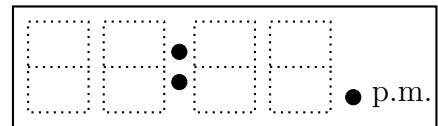
(b) "Quarter to nine"



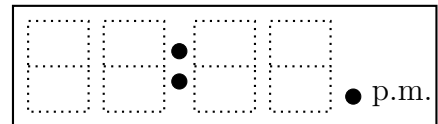
(c) "Twenty five past eight"



(d) "Twenty to four"

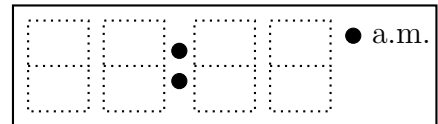


(e) "Five to three"

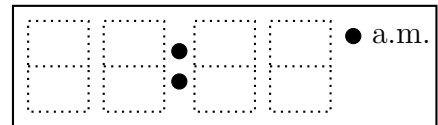


2. Write each time on the digital clock.

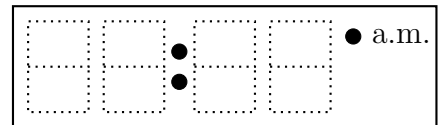
(a) "Quarter past nine"



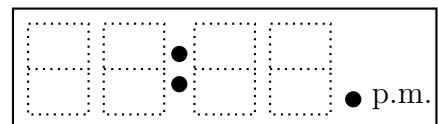
(b) "Quarter to nine"



(c) "Twenty five past eight"



(d) "Twenty to four"



(e) "Five to three"

