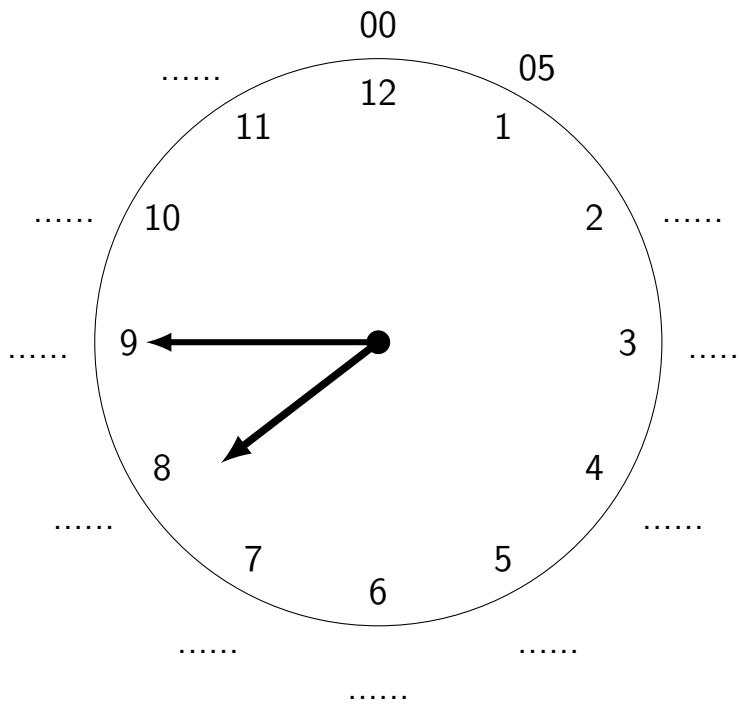


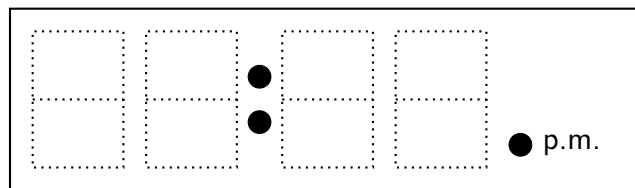
1. Complete these multiples of 5

00	05	1...	1...	2...	2...	3...	3...	4...	4...	5...	5...
----	----	------	------	------	------	------	------	------	------	------	------

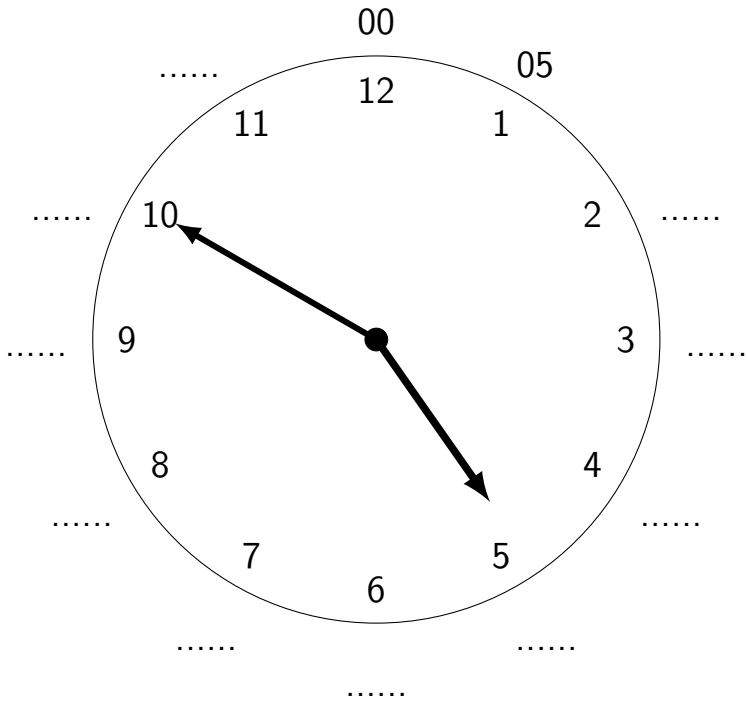
2. (a) Complete the minutes on the outside of this clock face.



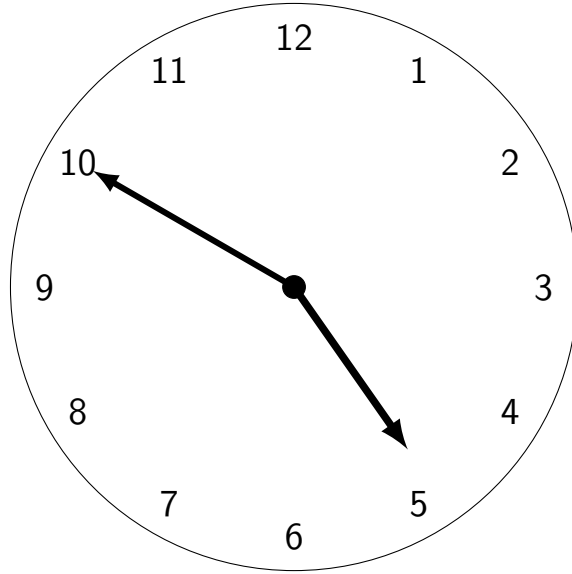
(b) Complete this digital clock.



3. (a) What time is it?



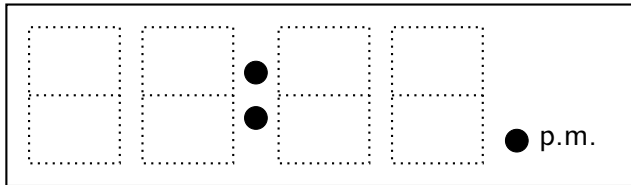
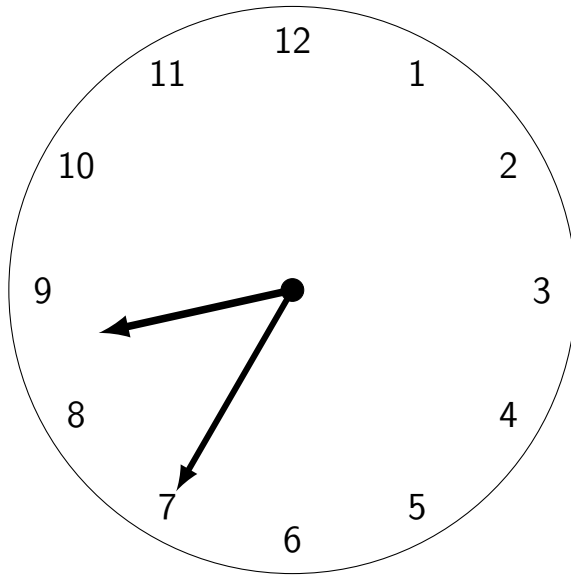
3. (b) Which way would you say this time?



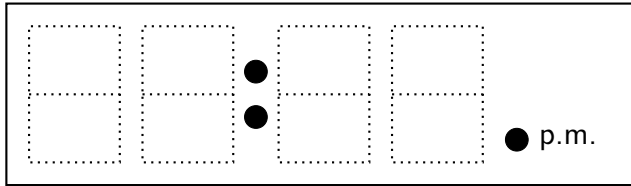
(i) Four fifty (the digital way)

(ii) Ten to five (the old fashioned way)

4. (a) Everybody: complete the first digital clock

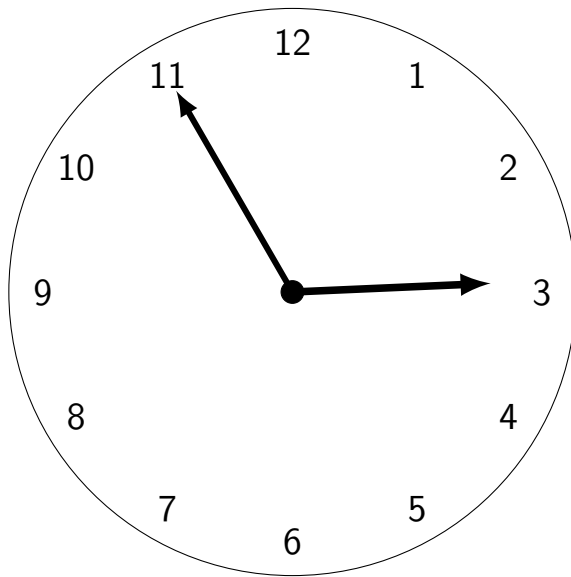


4. (b) Extension: write "five to ten" on the second digital clock



4. (c) Super extension: write down both ways to say time (a), digital and old fashioned.

5. (a) Everybody: complete the first digital clock



□	□	●	□	□	●	p.m.
□	□	●	□	□		

5. (b) Extension: write "ten to five" on the second digital clock

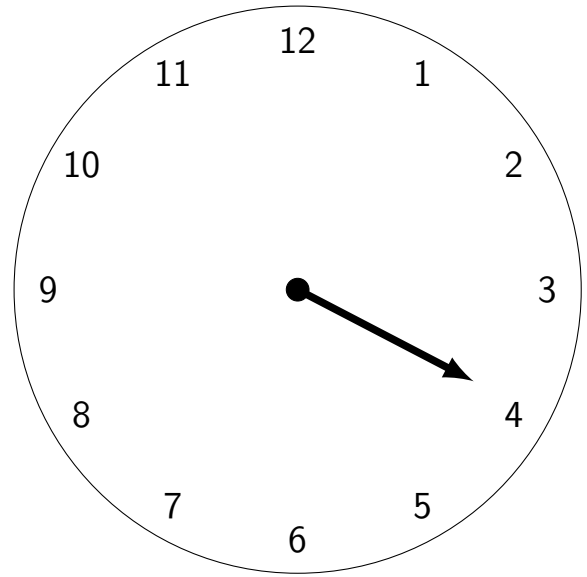
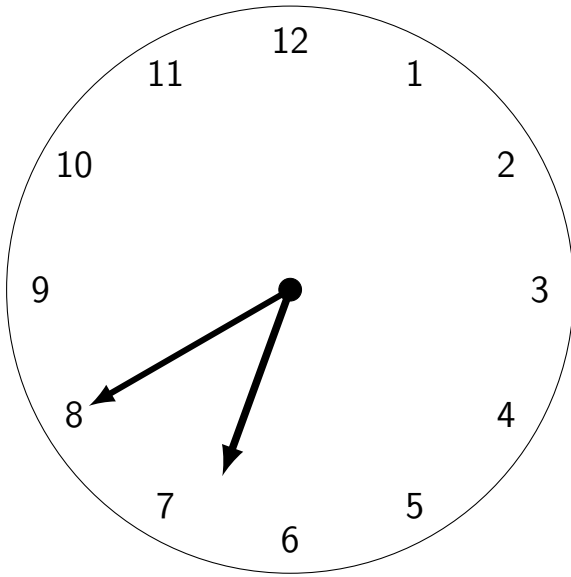
□	□	●	□	□	●	p.m.
□	□	●	□	□		

5. (c) Super extension: write down both ways to say time (a), digital and old fashioned.

6. Complete the digital clocks.

(a) Everyone

(b) Extension: when the minute hand has fallen off!



□	□	●	□	□	● p.m.
□	□	●	□	□	

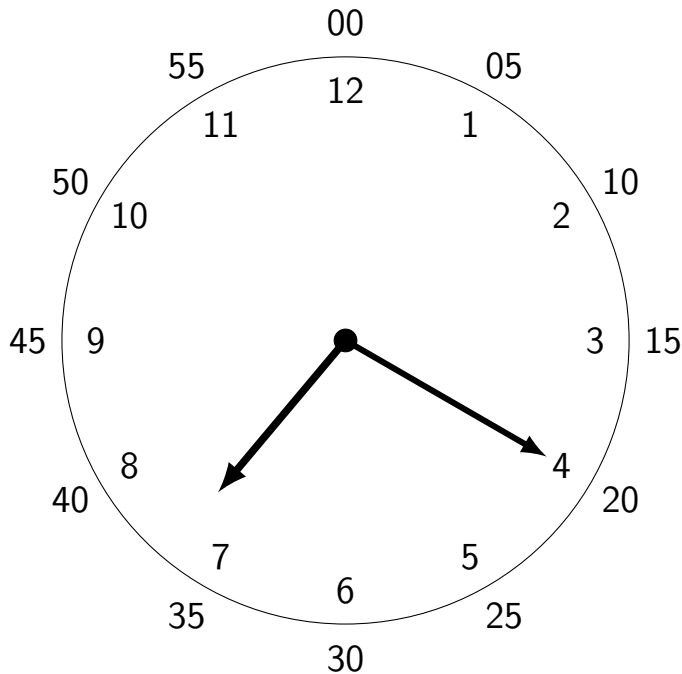
□	□	●	□	□	● p.m.
□	□	●	□	□	

Answers:

1.

00	05	10	15	20	25	30	35	40	45	50	55
----	----	----	----	----	----	----	----	----	----	----	----

2. (a)



2. (b) 07:45

3. (a) 04:50 (b) both answers are OK

4. (a) 08:35 (b) 09:55 (c) digital: eight thirty five, old fashioned: twenty five to nine

5. (a) 02:55 (b) 04:50 (c) digital: two fifty five, old fashioned: five to three

6. (a) 06:40 (b) 03:55 (just a few minutes before 04:00)