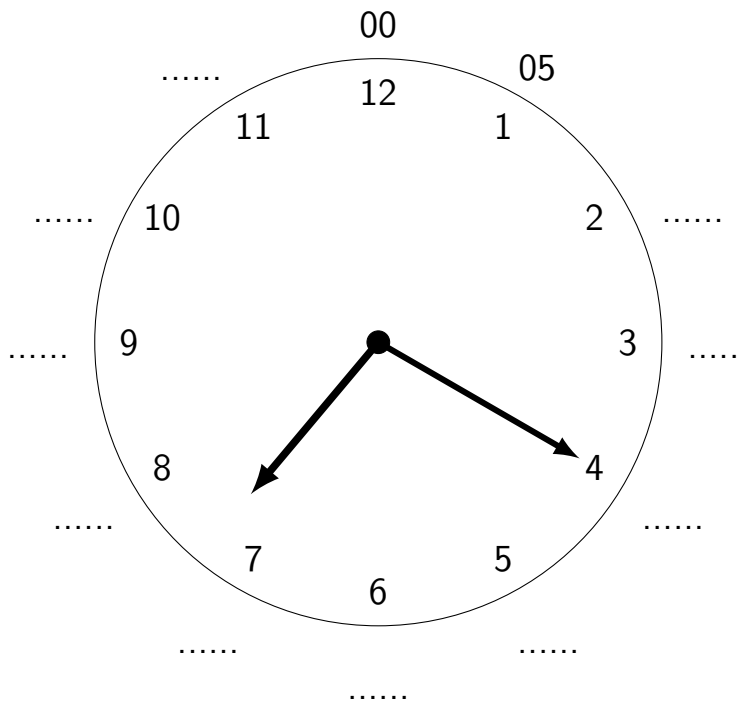


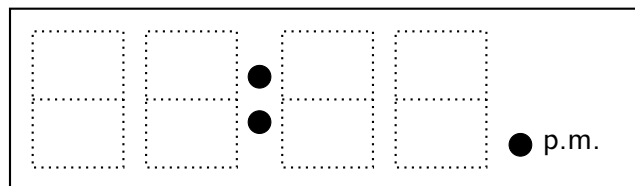
1. Complete these multiples of 5

00	05	1 ...	1 ...	2 ...	2 ...	3 ...	3 ...	4 ...	4 ...	5 ...	5 ...
----	----	-------	-------	-------	-------	-------	-------	-------	-------	-------	-------

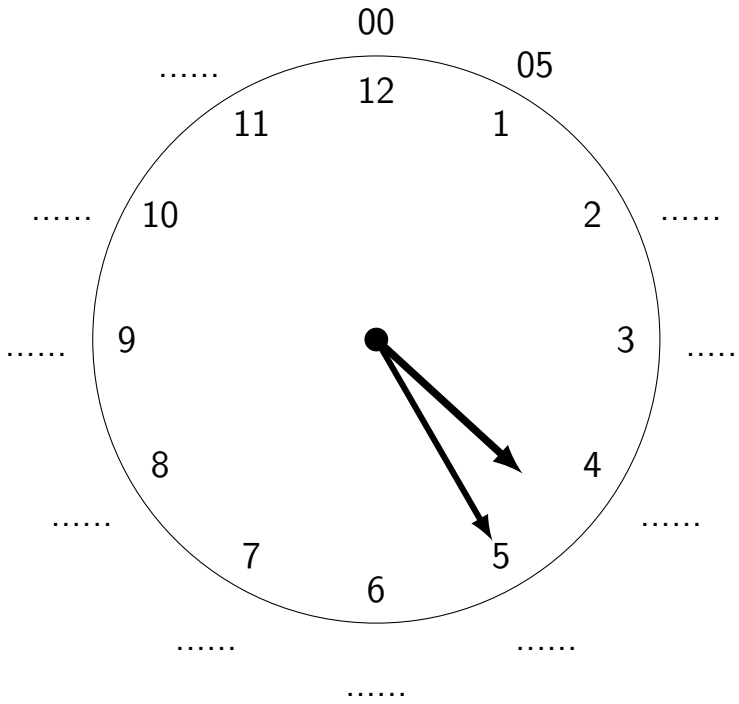
2. (a) Complete the minutes on the outside of this clock face.



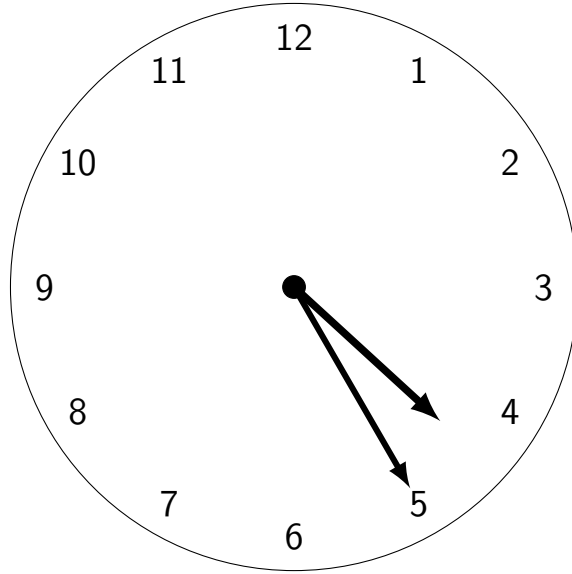
(b) Complete this digital clock.



3. (a) What time is it?



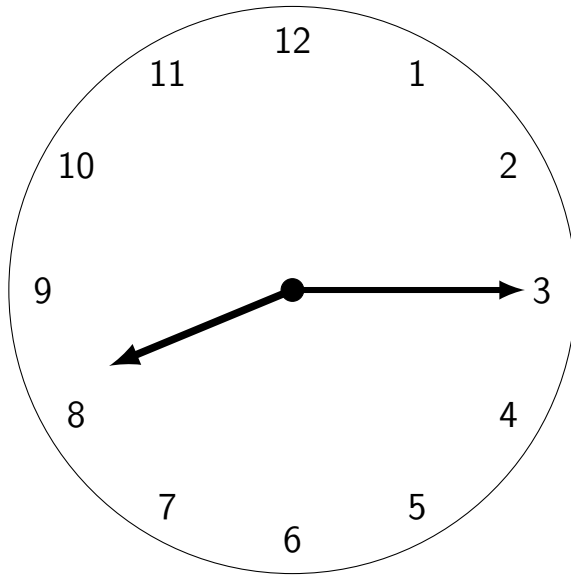
3. (b) Which way would you say this time?



(i) Four twenty five (the digital way)

(ii) Twenty five past four (the old fashioned way)

4. (a) Everybody: complete the first digital clock



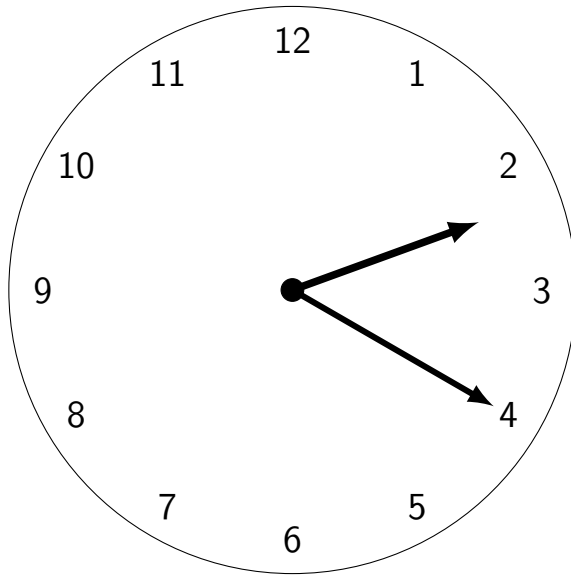
□	□	●	□	□	● p.m.
□	□	●	□	□	

4. (b) Extension: write "five past ten" on the second digital clock

□	□	●	□	□	● p.m.
□	□	●	□	□	

4. (c) Super extension: write down both ways to say time (a), digital and old fashioned.

5. (a) Everybody: complete the first digital clock



□	□	●	□	□	● p.m.
□	□	●	□	□	

5. (b) Extension: write "ten past five" on the second digital clock

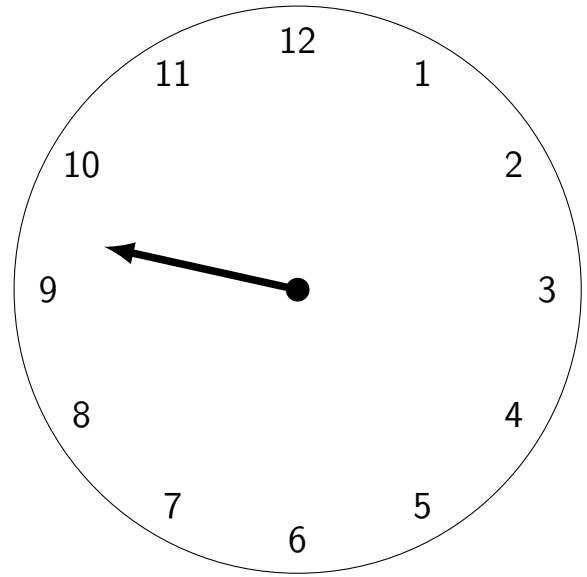
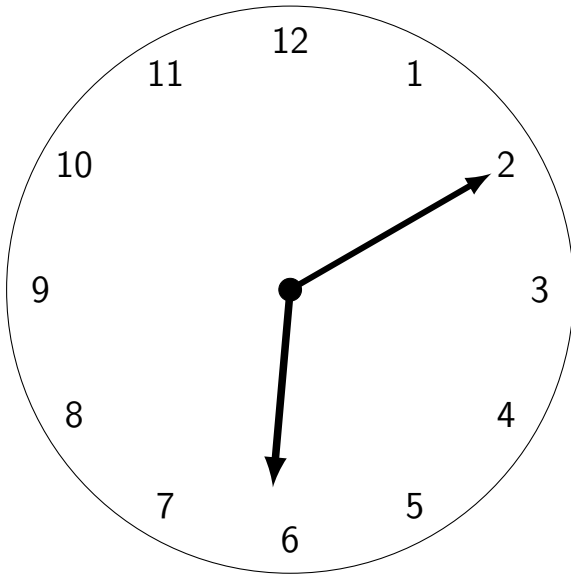
□	□	●	□	□	● p.m.
□	□	●	□	□	

5. (c) Super extension: write down both ways to say time (a), digital and old fashioned.

6. Complete the digital clocks.

(a) Everyone

(b) Extension: when the minute hand has fallen off!



□	□	●	□	□	● p.m.
□	□	●	□	□	

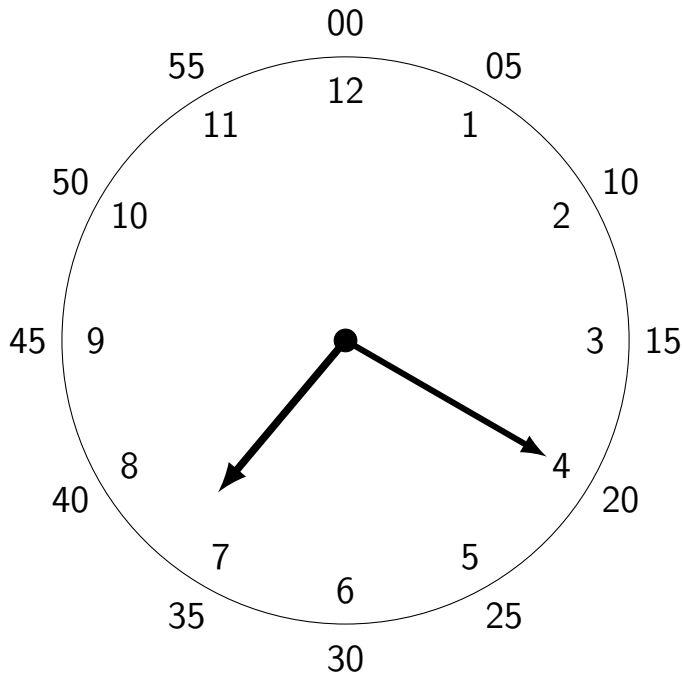
□	□	●	□	□	● p.m.
□	□	●	□	□	

Answers:

1.

00	05	10	15	20	25	30	35	40	45	50	55
----	----	----	----	----	----	----	----	----	----	----	----

2. (a)



2. (b) 07:20

3. (a) 04:25 (b) both answers are OK

4. (a) 08:15 (b) 10:05 (c) digital: eight fifteen, old fashioned: quarter past eight

5. (a) 02:20 (b) 05:10 (c) digital: two twenty, old fashioned: twenty past two

6. (a) 06:10 (b) 09:25 (just a few minutes before 09:30)