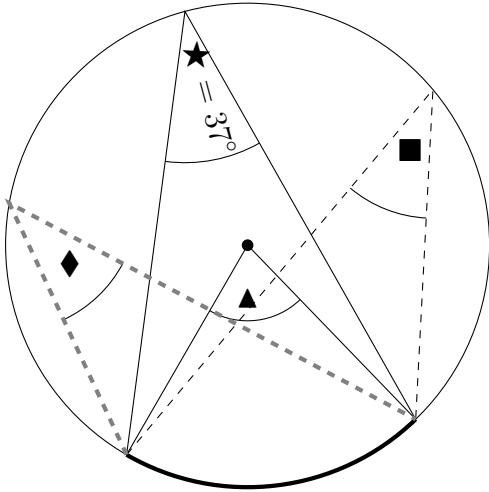


1. “The angle at the centre is twice the angle at the circumference from the same arc”
is a rule to find missing angles in circles.

Complete

- (i) the missing angles \blacktriangle , \blacksquare , \blacklozenge and \spadesuit



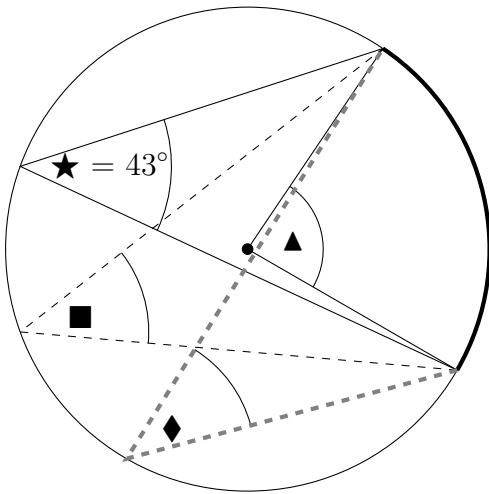
- $\star = 37^\circ$
 $\blacktriangle = \dots\dots^\circ$
 $\blacksquare = \dots\dots^\circ$
 $\blacklozenge = \dots\dots^\circ$

- (ii) A quicker way to work out \blacksquare and \blacklozenge ,
without bothering to work out \blacktriangle and
without having to write:

- “The angle at the centre is twice the angle at the circumference from the same arc”
is to use the rule:
- Angles at the circumference from the same arc are

2. Complete

- (i) the missing angles \blacktriangle , \blacksquare and \blacklozenge

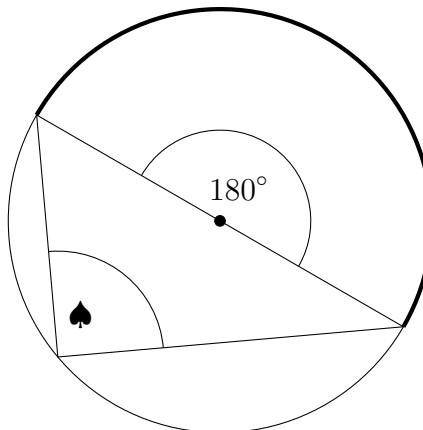


- $\star = 43^\circ$
 $\blacktriangle = \dots\dots^\circ$
 $\blacksquare = \dots\dots^\circ$
 $\blacklozenge = \dots\dots^\circ$

- (ii) A quicker way to work out \blacksquare and \blacklozenge ,
without bothering to work out \blacktriangle and
without having to write:

- “The angle at the centre is twice the angle at the circumference from the same arc”
is to use the rule:
- Angles at the
from the same arc are equal.

3. Complete $\spadesuit \dots\dots^\circ$ because **angle in a semi-circle** = $\dots\dots^\circ$ saves having to write:

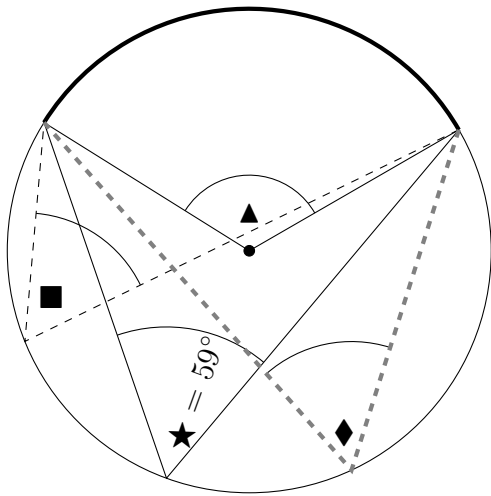


- “The angle at the centre = 180° because the diameter is a straight line” and
- “The angle at the centre is twice the angle at the circumference from the same arc”

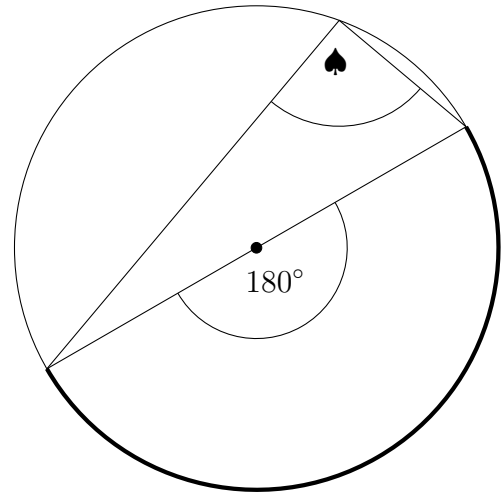
Turn over for more questions and answers.

4. “The angle at the centre is twice the angle at the circumference from the same arc” is a rule to find missing angles in circles.

(i) Complete the missing angles \blacktriangle , \blacksquare , \blacklozenge and \spadesuit



- $\star = 59^\circ$
- $\blacktriangle = \dots\dots^\circ$
- $\blacksquare = \dots\dots^\circ$
- $\blacklozenge = \dots\dots^\circ$
- $\spadesuit = \dots\dots^\circ$

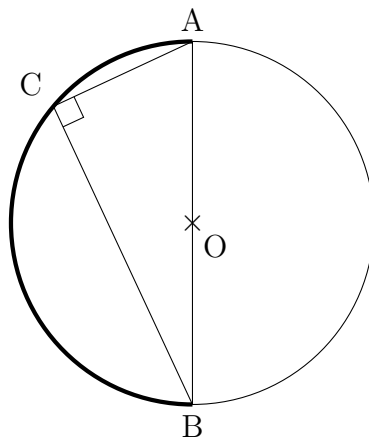


(ii) Complete: A quicker way to work out \blacksquare and \blacklozenge , without bothering to work out \blacktriangle and having to write the rule “The angle at the centre is twice the angle at the circumference from the same arc” is to use the rule:

Angles at the circumference from the same arc are

(iii) Complete: The rule **Angle in a semi-circle** = $^\circ$ saves having to write “The angle at the centre = 180° because the diameter is a straight line” and “The angle at the centre is twice the angle at the circumference from the same arc”

5. Complete: The rule **Angle in a semi-circle** = $^\circ$ saves having to write “Angle AOB = $^\circ$ because the diameter is a straight line and the rule: the angle at the centre is twice the angle at the circumference from the same arc.”



Answers: Q1: (i) $\blacktriangle = 74$, $\blacksquare = \blacklozenge = 37$ (ii) equal; Q2: (i) $\blacktriangle = 86$, $\blacksquare = \blacklozenge = 43$ (ii) circumference
 Q3: 90 ... 90 Q4: (i) $\blacktriangle = 118$, $\blacksquare = \blacklozenge = 59$ (ii) equal (iii) 90 Q5: 90 ... 180