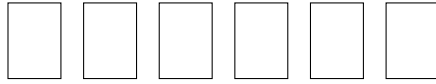



1.

Omari has 6 books



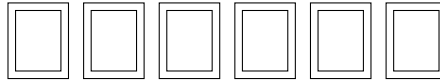
Piotr has 2 books



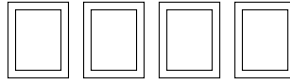
How many books do Omari and Piotr have altogether? .....

2.

Ariana has 6 photos



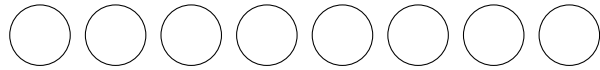
Damien has 4 photos



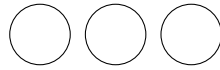
How many photos do Ariana and Damien have altogether? .....

3.

Caden has 8 counters



Baxter has 3 counters




How many counters do Baxter and Caden have altogether? .....

4. Ophelia has 9 spheres



Nicola has 6 spheres



How many more spheres do Nicola and Ophelia have altogether? .....

## Answers

1. 8
2. 10
3. 11
4. 15