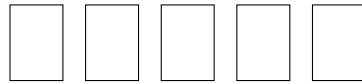


1.

Ela has 5 books



Gabrielle has 2 books



How many books do Ela and Gabrielle have altogether? .....

2.

Isadora has 9 spheres




Harlow has 3 spheres



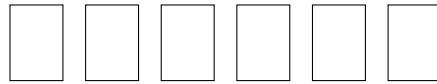
How many spheres do Harlow and Isadora have altogether? .....

3.

Aila has 9 cards



Bronte has 6 cards




How many cards do Aila and Bronte have altogether? .....

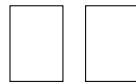
secretADDSign (1) Q1: 7, Q2: 12, Q3: 15 Q4: 14, Q5: 12, Q6: 11

1.

Ela has 5 books



Gabrielle has 2 books



How many books do Ela and Gabrielle have altogether? .....

2.

Isadora has 9 spheres




Harlow has 3 spheres



How many spheres do Harlow and Isadora have altogether? .....

3.

Aila has 9 cards



Bronte has 6 cards



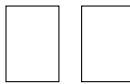
How many cards do Aila and Bronte have altogether? .....

4. Annie has 9 love hearts 

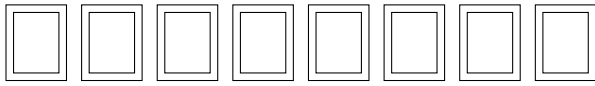
David has 5 love hearts 

Annie has more love hearts than David, how many more love hearts? .....

5. Ela has 5 books 

Gabrielle has 2 books 

Ela has more books than Gabrielle, how many more books? .....

6. Codey has 8 photos 

Aurora has 3 photos 


Codey has more photos than Aurora, how many more photos? .....

4. Annie has 9 love hearts 

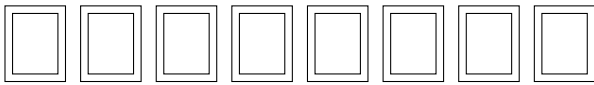
David has 5 love hearts 

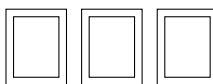
Annie has more love hearts than David, how many more love hearts? .....

5. Ela has 5 books 

Gabrielle has 2 books 

Ela has more books than Gabrielle, how many more books? .....

6. Codey has 8 photos 

Aurora has 3 photos 

Codey has more photos than Aurora, how many more photos? .....