



1. 3 people share 15 cards equally {this means fairly}.

How many cards do they each get?

You may use the diagram to help you.




1.

2. 4 people share 32 counters equally.

How many counters do they each get?

You may use the diagram to help you.




2.

3. 5 people share 20 cards fairly.

How many cards do they each get?

You may use the diagram to help you.




3.

4. 3 people share 21 pound coins equally.

How many pound coins do they each get?

You may use the diagram to help you.



4.

Answers

1. 5

2. 8

3. 4

4. 7