


1.

Adebayo has 7 oranges



Bailey has 4 oranges




Adebayo has more oranges than Bailey

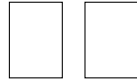
How many more oranges? .....

2.

Safika has 9 books



Wayna has 2 books



Safika has more books than Wayna


How many more books? .....

3.

Ophelia has 9 spheres



Nicola has 6 spheres

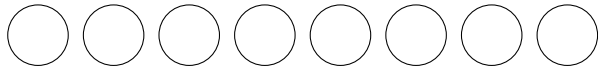


Ophelia has more spheres than Nicola

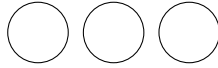
How many more spheres? .....

4.

Caden has 8 counters



Baxter has 3 counters



Caden has more counters than Baxter

How many more counters? .....

## Answers

1. 3

2. 7

3. 3

4. 5