

1. Isadora has 9 spheres

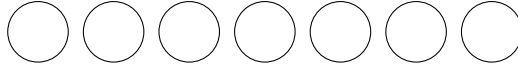


Harlow has 3 spheres

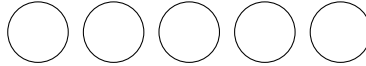


Isadora has more spheres than Harlow, how many more spheres?

2. Rania has 7 counters




Pearl has 5 counters



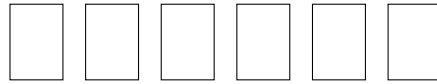
Rania has more counters than Pearl, how many more counters?

3.

Aila has 9 cards



Bronte has 6 cards



Aila has more cards than Bronte, how many more cards?

secretSUBsign (1) Q1: 6, Q2: 2, Q3: 3, Q4: 4, Q5: 3, Q6: 5

1. Isadora has 9 spheres

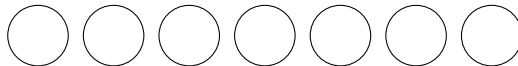


Harlow has 3 spheres

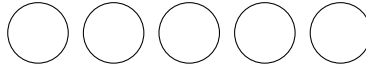


Isadora has more spheres than Harlow, how many more spheres?

2. Rania has 7 counters




Pearl has 5 counters



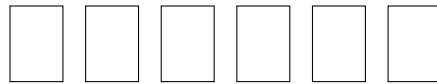
Rania has more counters than Pearl, how many more counters?

3.

Aila has 9 cards



Bronte has 6 cards



Aila has more cards than Bronte, how many more cards?

4. Annie has 9 love hearts 

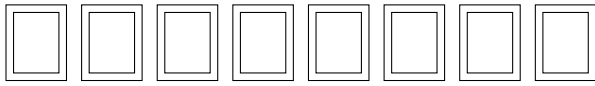
David has 5 love hearts 

Annie has more love hearts than David, how many more love hearts?

5. Ela has 5 books 

Gabrielle has 2 books 

Ela has more books than Gabrielle, how many more books?

6. Codey has 8 photos 

Aurora has 3 photos 


Codey has more photos than Aurora, how many more photos?

4. Annie has 9 love hearts 

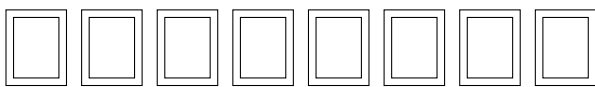
David has 5 love hearts 

Annie has more love hearts than David, how many more love hearts?

5. Ela has 5 books 

Gabrielle has 2 books 

Ela has more books than Gabrielle, how many more books?

6. Codey has 8 photos 

Aurora has 3 photos 

Codey has more photos than Aurora, how many more photos?