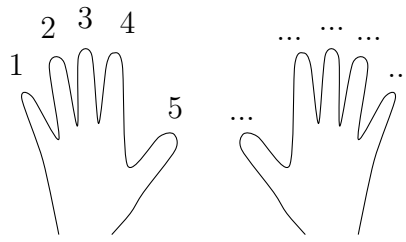
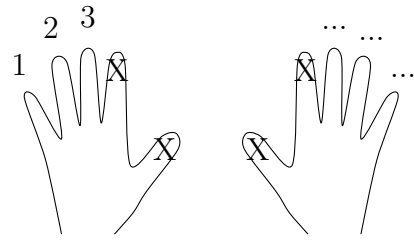


1. (i) Show me the hands in the diagram



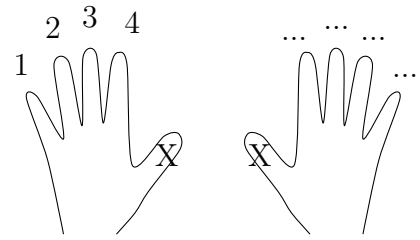
- (ii) When I raise my hand call out the answer to $2 \times 5 = \dots$

2. (i) Show me the hands in the diagram



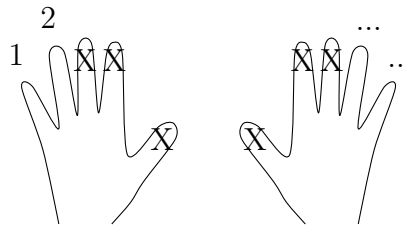
(ii) When I raise my hand call out the answer to $2 \times 3 = \dots$

3. (i) Show me the hands in the diagram



(ii) When I raise my hand call out the answer to $2 \times 4 = \dots$

4. (i) Show me the hands in the diagram



(ii) When I raise my hand call out the answer to $2 \times 2 = \dots$

Answers

1. 10
2. 6
3. 8
4. 4