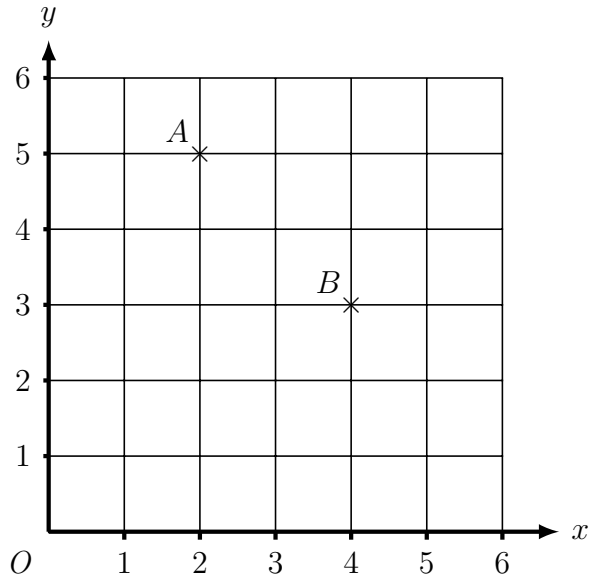


1. Here is a coordinate grid.



Write down the coordinates of the point

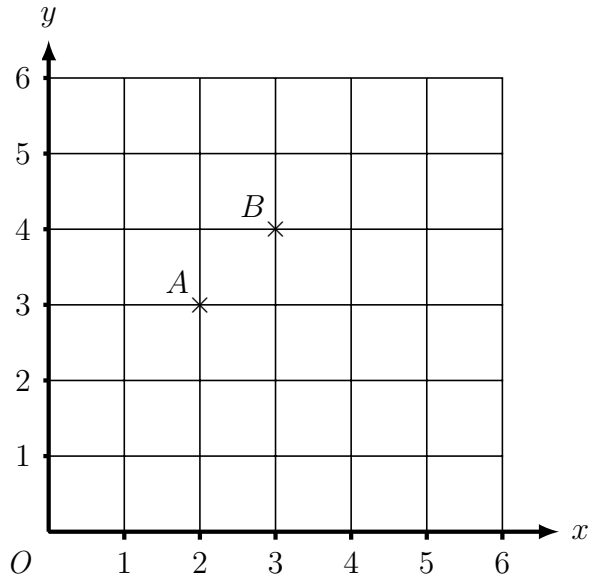
(i)  $A$

(....., .....

(ii)  $B$

(....., .....

2. Here is a coordinate grid.

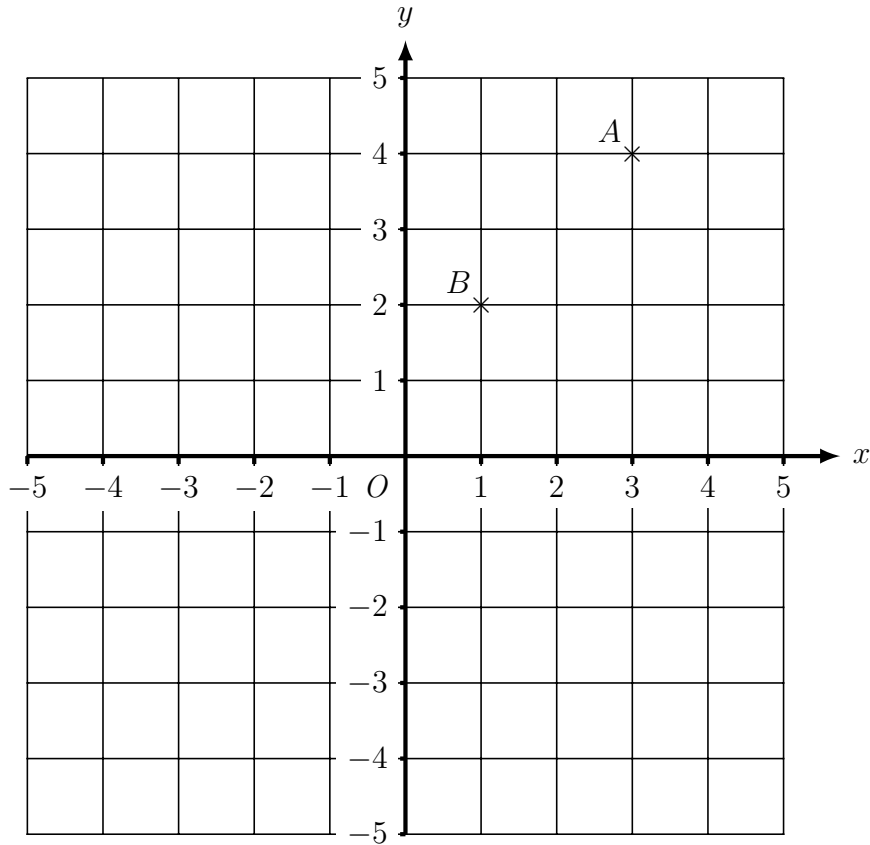


Write down the coordinates of the point

(i)  $A$  (....., .....

(ii)  $B$  (....., .....

3. Here is a coordinate grid.

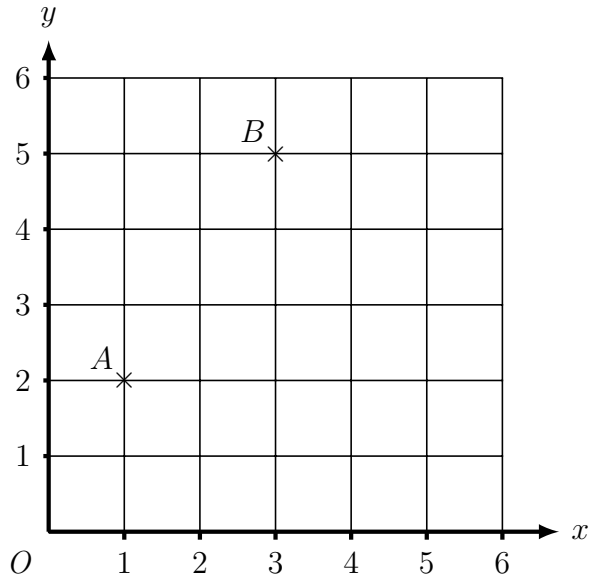


Write down the coordinates of the point

(i) A (....., .....

(ii) B (....., .....

4. Here is a coordinate grid.



Write down the coordinates of the point

(i) A

(....., .....

(ii) B

(....., .....

## Answers

1. A: (2 , 5) and B: (4 , 3)
2. A: (2 , 3) and B: (3 , 4)
3. A: (3 , 4) and B: (1 , 2)
4. A: (1 , 2) and B: (3 , 5)