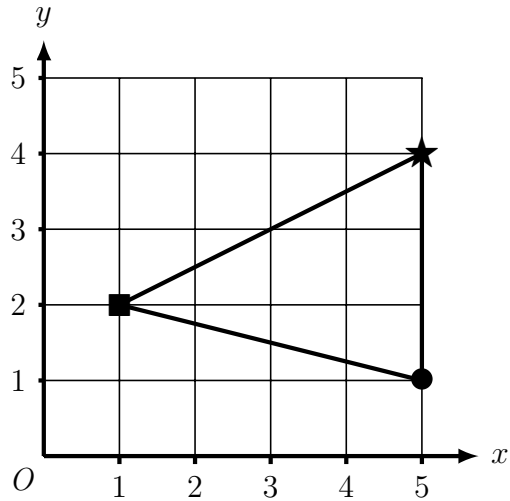
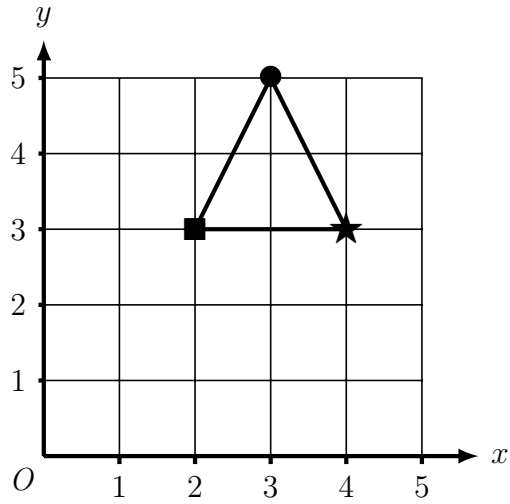


1. Here is a triangle drawn on a coordinate grid.



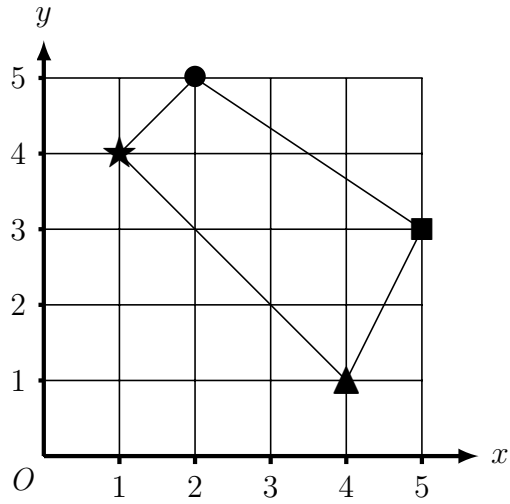
Write down the coordinate of the \blacksquare $\begin{matrix} x & y \\ (& , &) \end{matrix}$

2. Here is a triangle drawn on a coordinate grid.



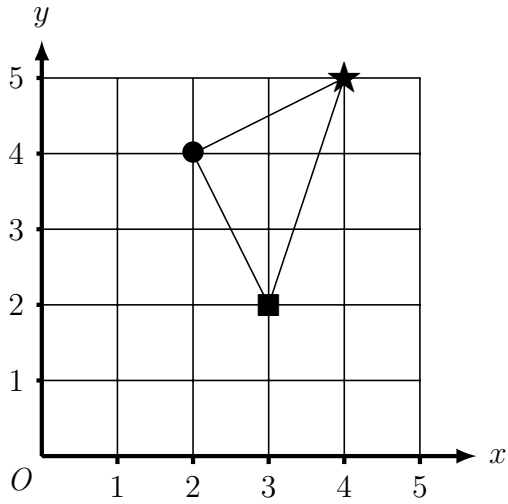
Write down the coordinate of the \bullet $\begin{matrix} x & y \\ (& , &) \end{matrix}$

3. Here is a quadrilateral drawn on a coordinate grid.



Write down the coordinate of the \blacktriangle $\begin{matrix} x & y \\ (& , &) \end{matrix}$

4. Here is a triangle drawn on a coordinate grid.



Write down the coordinate of the \blacksquare $\begin{matrix} x & y \\ (& , &) \end{matrix}$

Answers

1. (1, 2)
2. (3, 5)
3. (4, 1)
4. (3, 2)