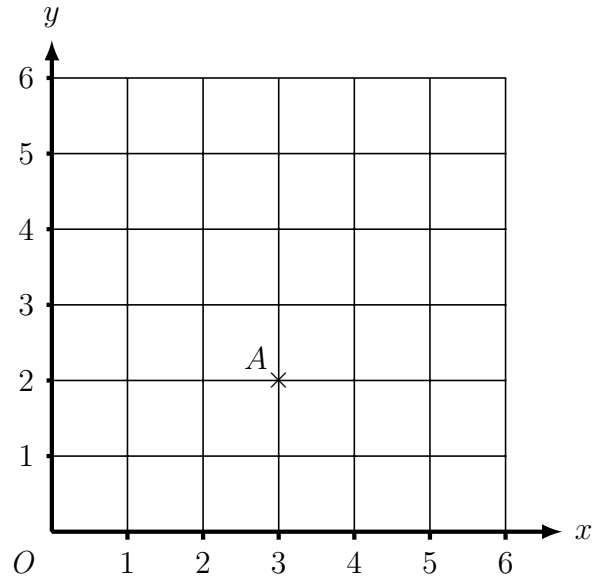


1. Here is a coordinate grid.



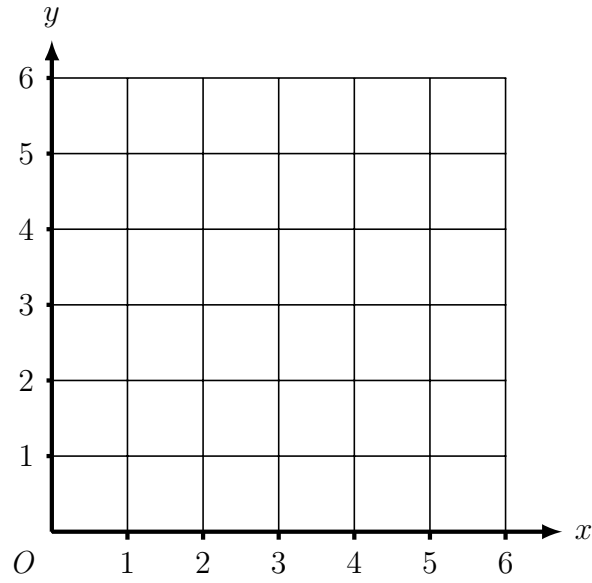
A is the point $(3, 2)$

B is the point $(5, 4)$

Find the coordinates of the midpoint of AB.

(..... ,)

2. Here is a coordinate grid.



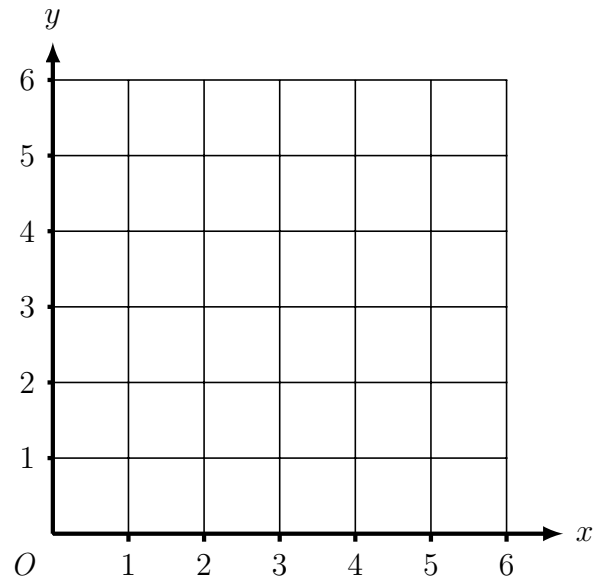
A is the point (1, 2)

B is the point (3, 6)

Find the coordinates of the midpoint of AB.

(..... ,)

3. Here is a coordinate grid.



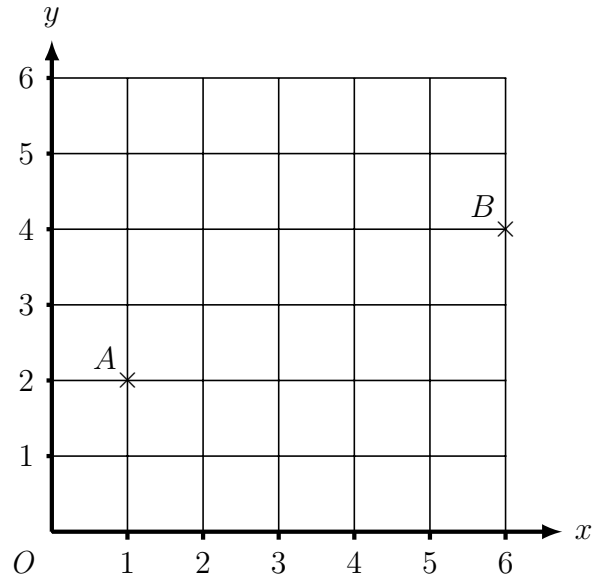
A is the point $(1, 3)$

B is the point $(5, 2)$

Find the coordinates of the midpoint of AB.

(..... ,)

4. Here is a coordinate grid.



Find the coordinates of the midpoint of AB .

(..... ,)

Answers

1. (4, 3)
2. (2, 4)
3. (3, 2.5)
4. (3.5, 3)