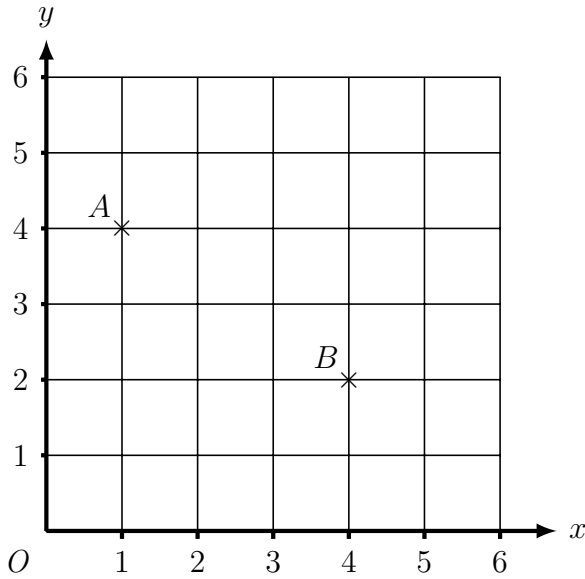
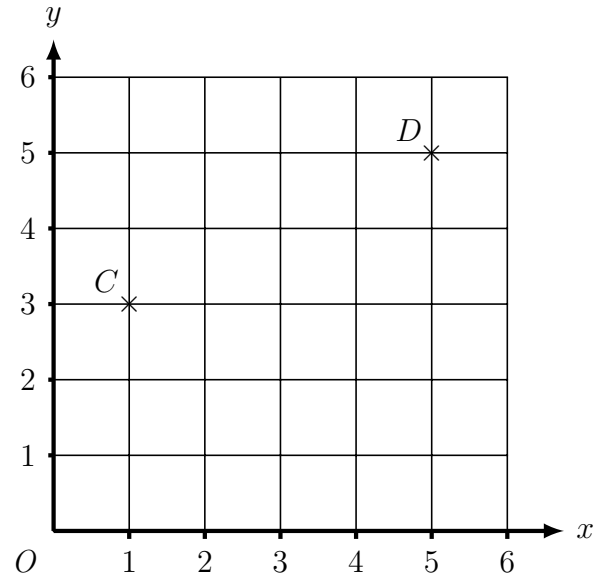


1. (i)



(ii)

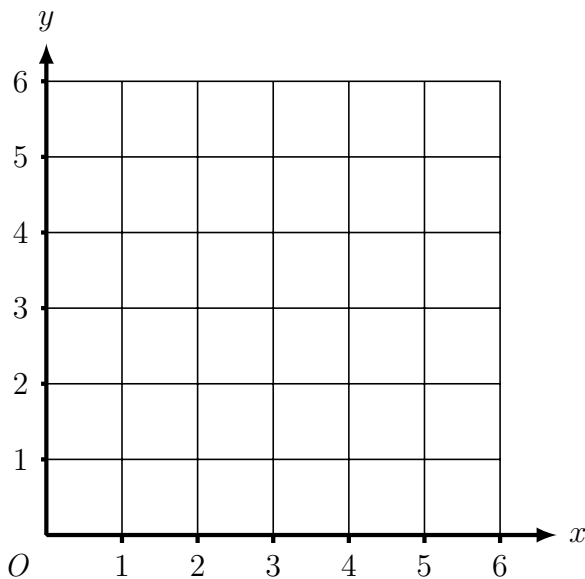


Find the coordinates of

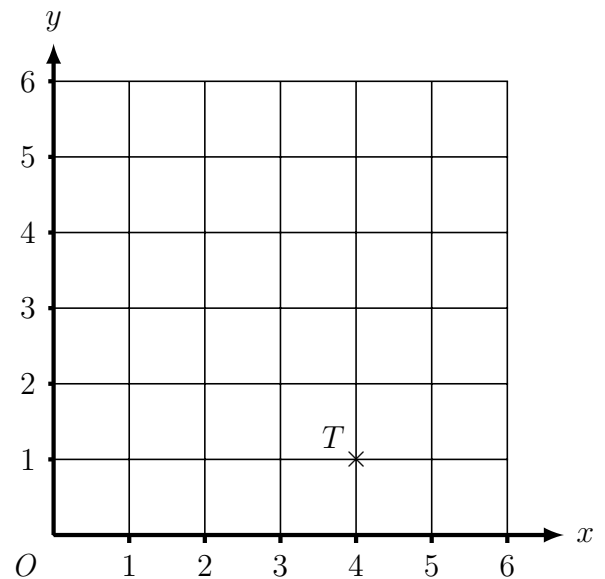
(i) the midpoint of AB (..... ,)

(ii) the midpoint of CD (..... ,)

2. (i)



(ii)



P is the point (2, 3)

T is the point (4, 1)

Q is the point (4, 1)

U is the point (6, 5)

(i) Find the coordinates of the midpoint of PQ.

(..... ,)

(ii) Find the coordinates of the midpoint of TU.

(..... ,)

Answer 1. (i) (2.5, 3) (ii) (3, 4) 2. (i) (3, 2) (ii) (5, 3)