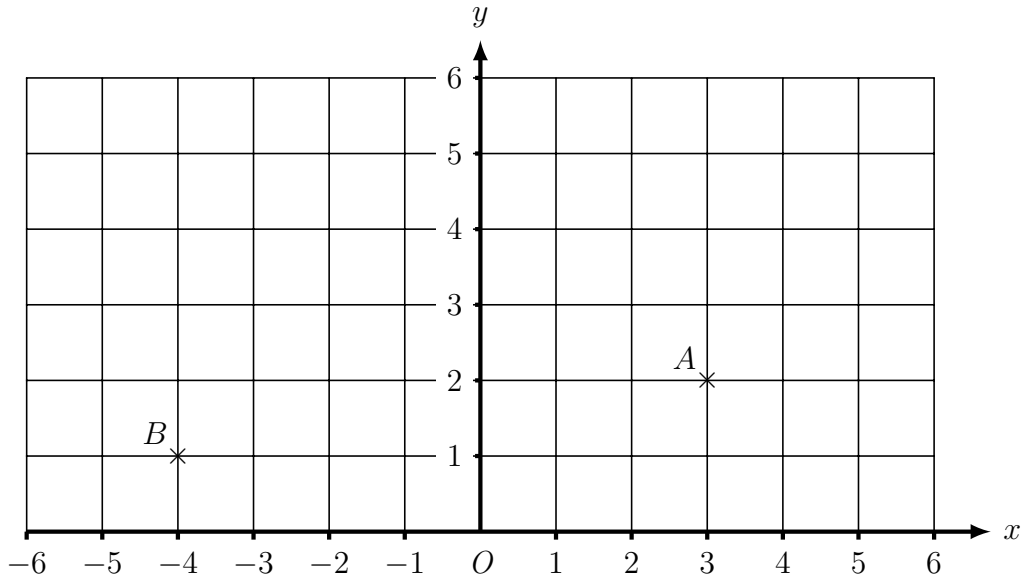


1. Here is a coordinate grid.



(a) Write down the coordinates of the point A

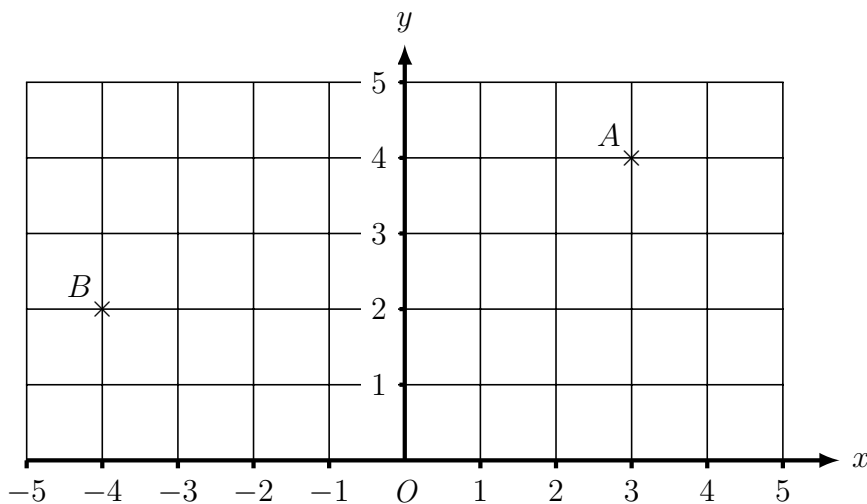
(.....,

(b) Write down the coordinates of the point B

(.....,

(c) On the grid, mark with a cross (\times) the point $(-2, 3)$.
Label this point C.

2. Here is a coordinate grid.



(a) Write down the coordinates of the point A

(.....,

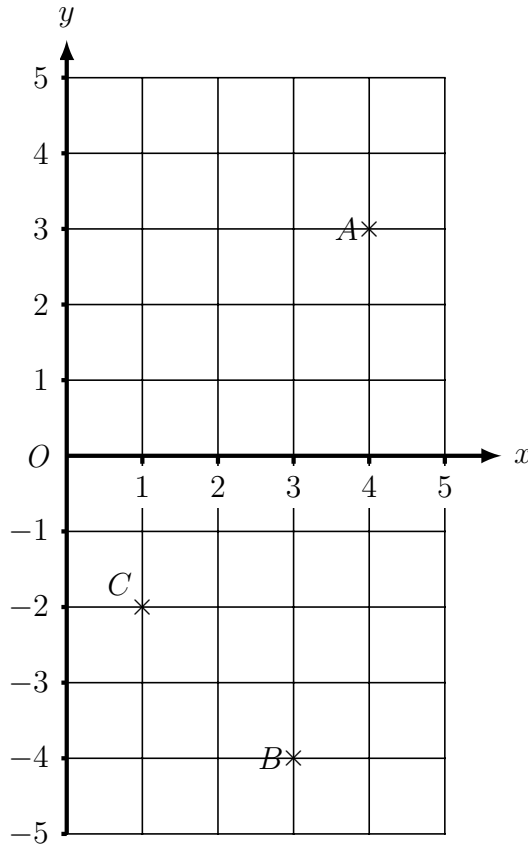
(b) Write down the coordinates of the point B

(.....,

(c) On the grid, mark with a cross (\times) the point $(-3, 4)$.
Label this point C.

Turn over for more questions and answers.

3. Here is a coordinate grid.



- (a) Write down the coordinates of the point A (.....,
- (b) Write down the coordinates of the point B (.....,
- (c) Write down the coordinates of the point C (.....,
- (d) On the grid, mark with a cross (×) the point (5 , -3).
Label this point D.

Answers 1a) (3 , 2) b) (-1 , 4) c) see below 2a) (3 , 4) b) (-4 , 2) c) see below
 3a) (4 , 3) b) (3 , -4) c) (1, -2) d) see below

