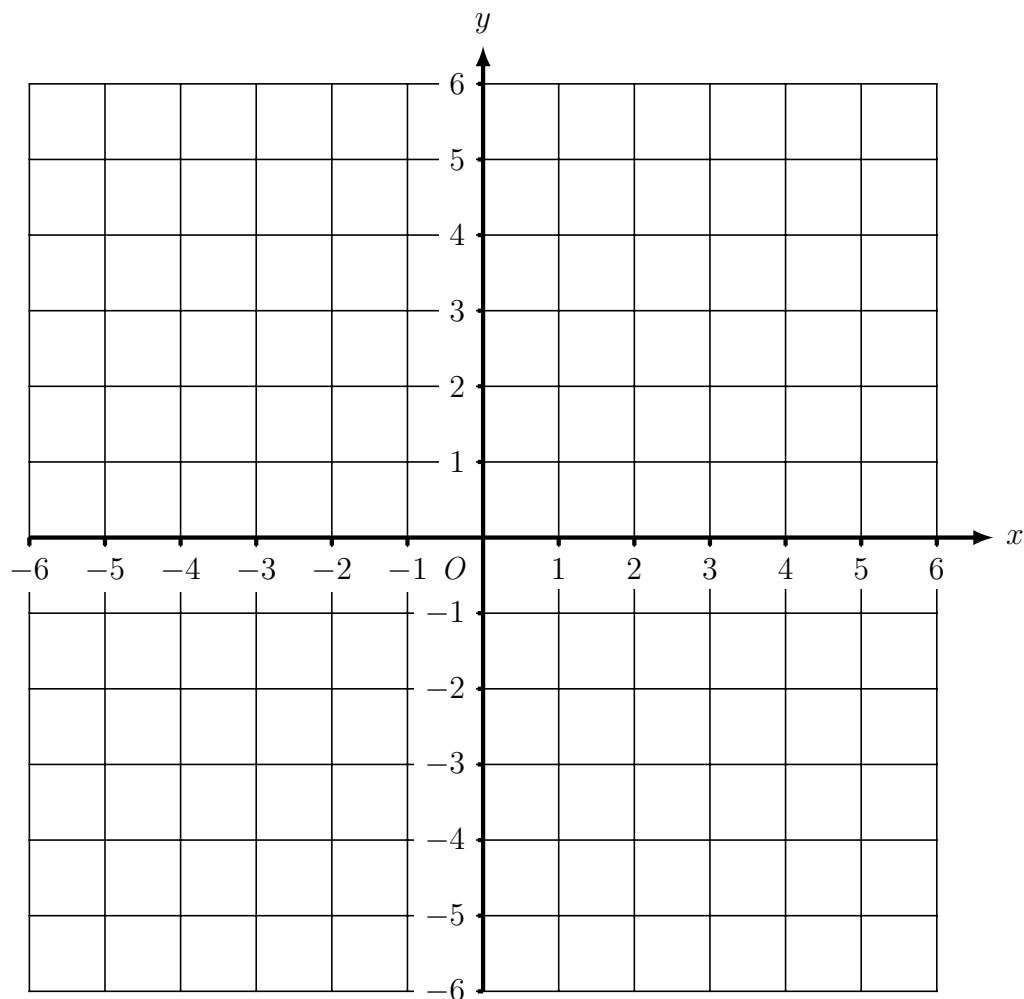


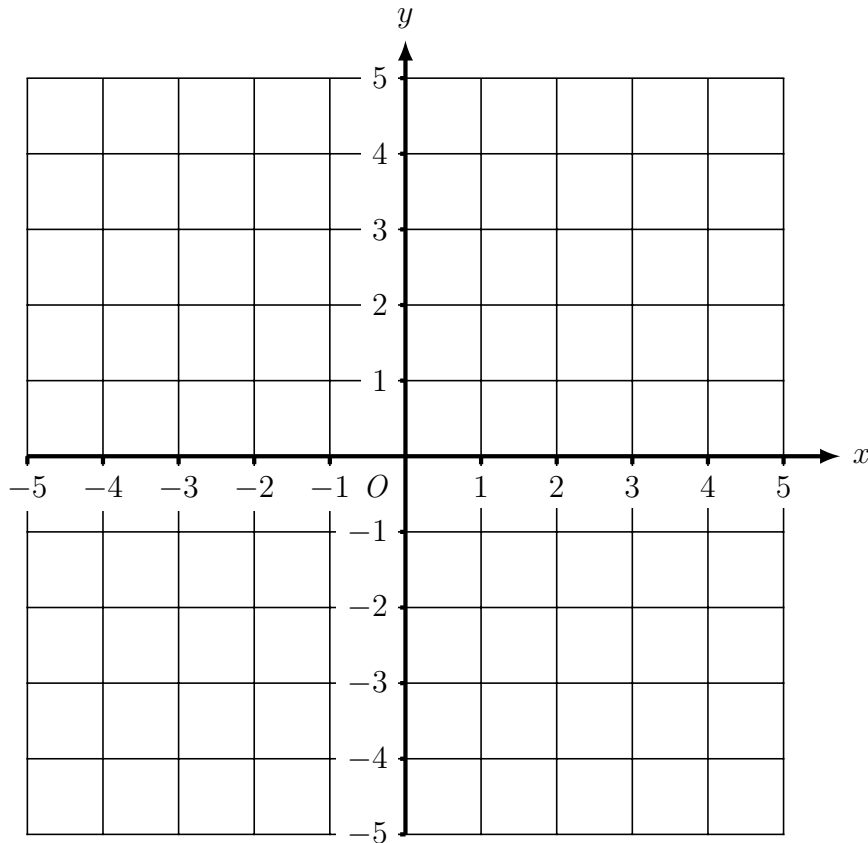
1. Here is a coordinate grid.



- (i) On the grid, mark with a cross (\times)
- (a) the point $(5, 2)$ and label this point A
 - (b) the point $(4, -3)$ and label this point B
 - (c) the point $(1, -2)$ and label this point C
- (ii) Shade in triangle ABC
- (iii) On the grid, plot
- (d) the point $(2, 3)$ and label this point D
 - (e) the point $(-2, 5)$ and label this point E
 - (f) the point $(-5, -3)$ and label this point F
 - (g) the point $(-3, -4)$ and label this point G
- (iv) Shade in quadrilateral DEFG

Turn over for more questions and answers.

2. Here is a coordinate grid.

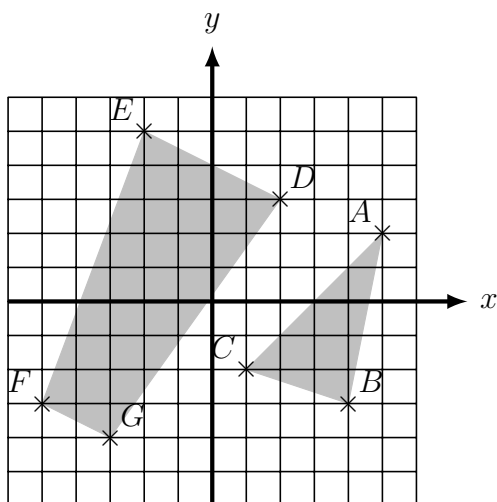


On the grid, mark with a cross (\times)

- the point $(4, 3)$ and label this point A
- the point $(-2, 4)$ and label this point B
- the point $(2, -3)$ and label this point C
- the point $(-1, -4)$ and label this point D
- the point $(-3, -1)$ and label this point E

Answers

1)



2)

