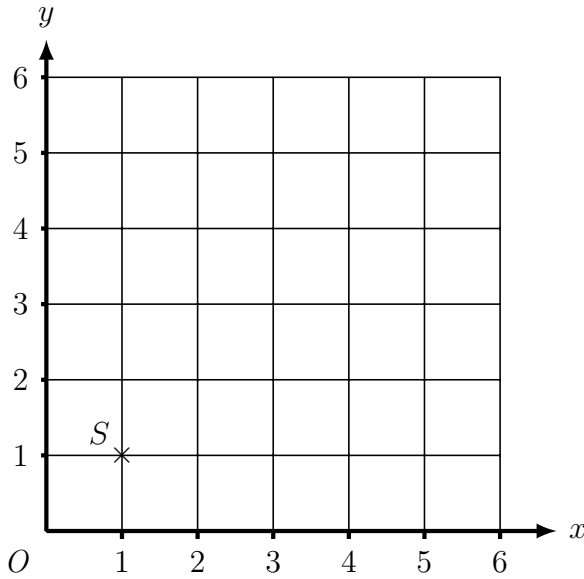


1. Here is a coordinate grid.



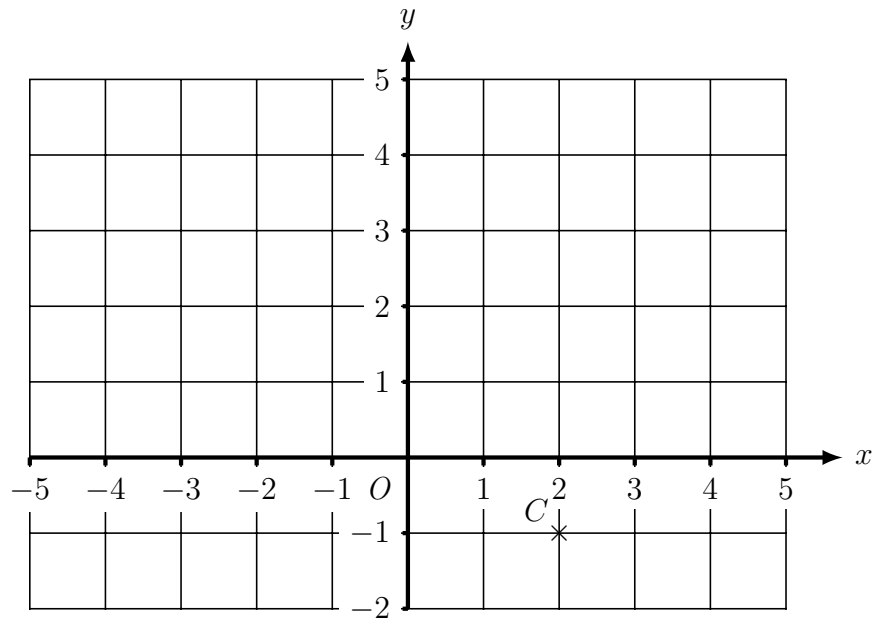
(a) On the grid, mark with a cross (×)

- (i) the point (1 , 3) and label this point P
- (ii) the point (5 , 3) and label this point Q
- (ii) the point (5 , 1) and label this point R

(b) Write down the mathematical name of the quadrilateral PQRS

(b) .....

2. Here is a coordinate grid



On the grid, mark with a cross (×)

- (a) the point (1 , 1) and label this point A
- (b) the point (4 , 3) and label this point B

Turn over for more questions and answers.

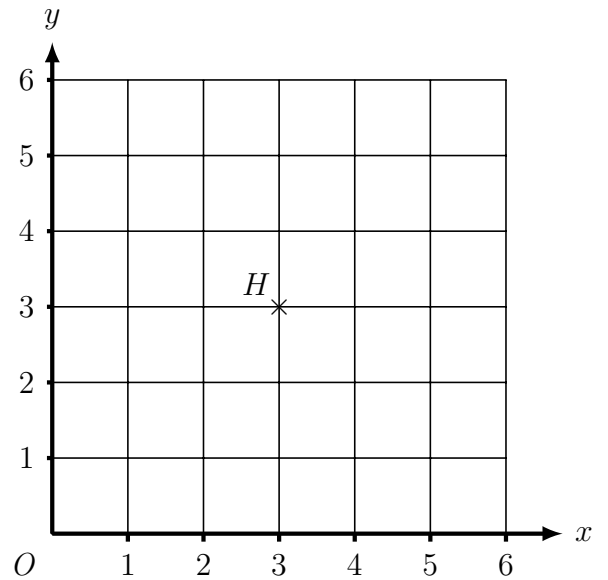
3. (a) Here is a coordinate grid

On the grid, mark with a cross (×)

- (i) the point (4 , 6) and label this point E
- (ii) the point (5 , 3) and label this point F
- (iii) the point (4 , 2) and label this point G

(b) Write down the mathematical name of the quadrilateral EFGH

.....



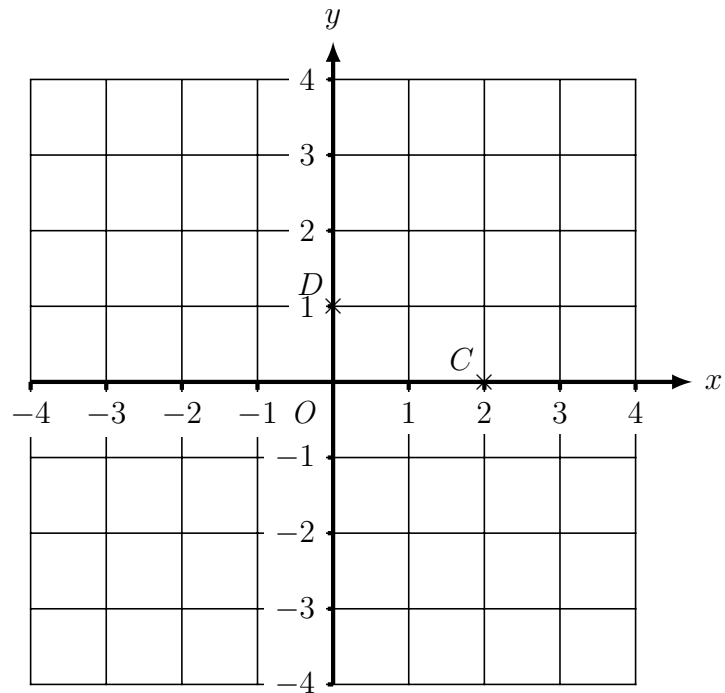
4. (a) Here is a coordinate grid

On the grid, mark with a cross (×)

- (i) the point (1 , 3) and label this point A
- (ii) the point (3 , 2) and label this point B

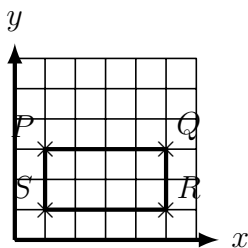
(b) Write down the mathematical name of the quadrilateral ABCD

.....



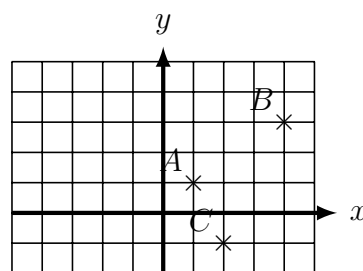
Answers

1a)

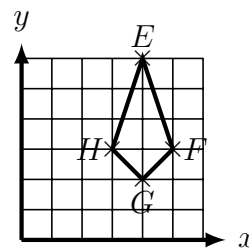


1b) rectangle

2)

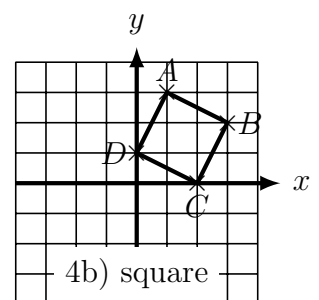


3a)



3b) kite

4a)



4b) square