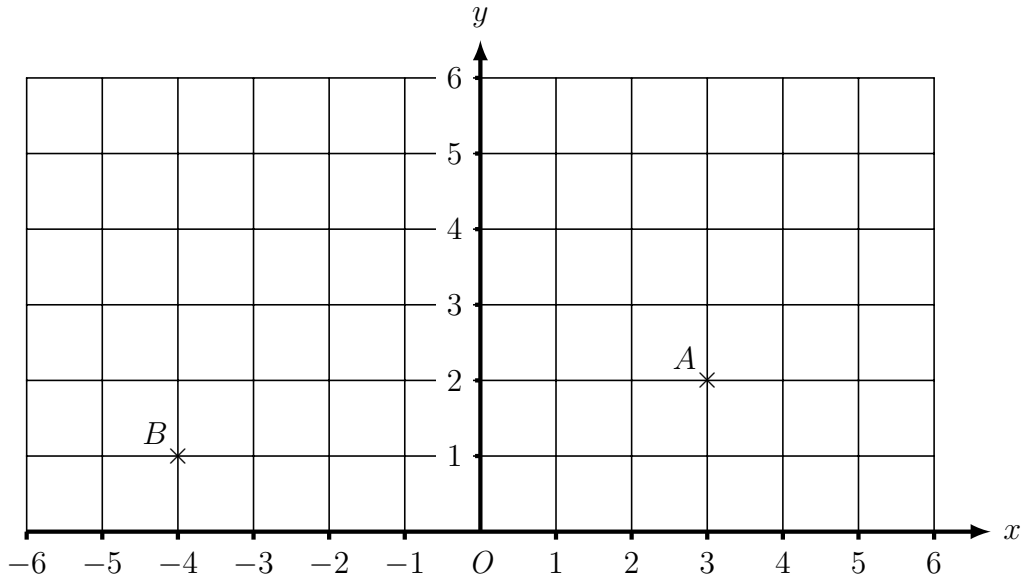
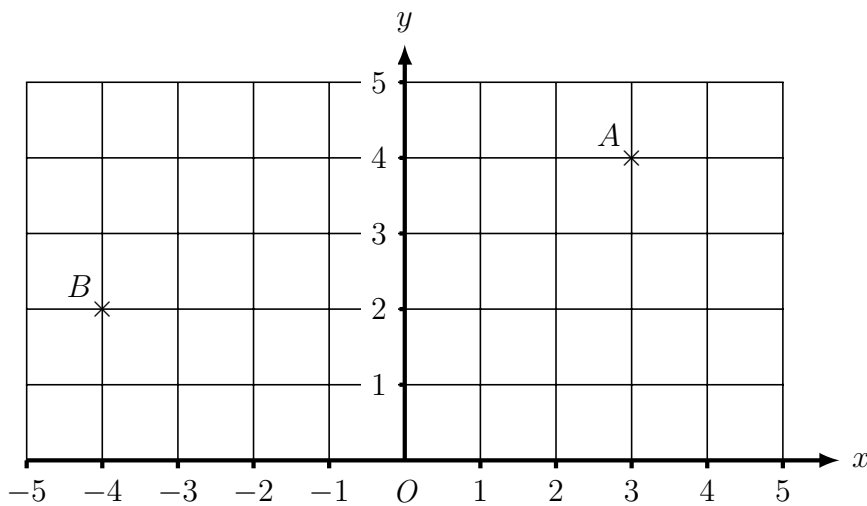


1. Here is a coordinate grid.



- (a) Write down the coordinates of the point A  
(....., .....
- (b) Write down the coordinates of the point B  
(....., .....
- (c) On the grid, mark with a cross (×) the point (-2 , 3).  
 Label this point C.

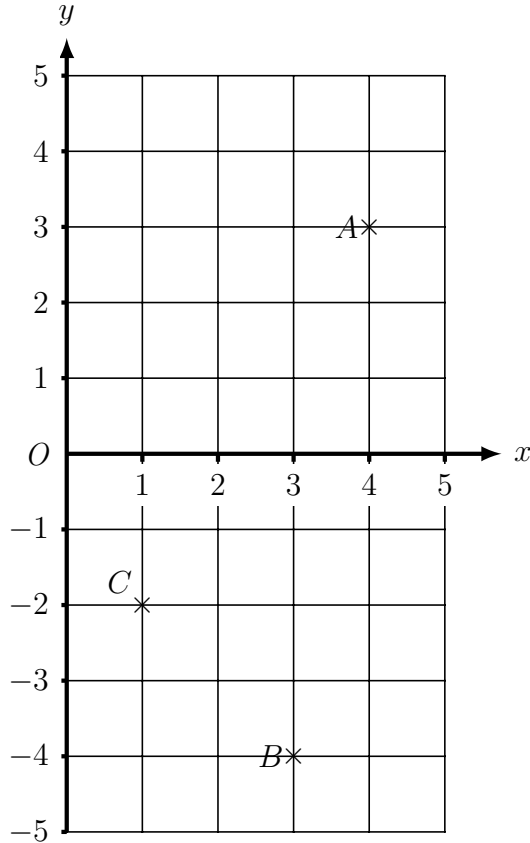
2. Here is a coordinate grid.



- (a) Write down the coordinates of the point A  
(....., .....
- (b) Write down the coordinates of the point B  
(....., .....
- (c) On the grid, mark with a cross (×) the point (-3 , 4).  
 Label this point C.

Turn over for more questions and answers.

3. Here is a coordinate grid.



- (a) Write down the coordinates of the point A (....., .....
- (b) Write down the coordinates of the point B (....., .....
- (c) Write down the coordinates of the point C (....., .....
- (d) On the grid, mark with a cross (×) the point (5, -3).  
Label this point D.

Answers 1a) (3, 2)    b) (-1, 4)    c) see below    2a) (3, 4)    b) (-4, 2)    c) see below  
 3a) (4, 3)    b) (3, -4)    c) (1, -2)    d) see below

