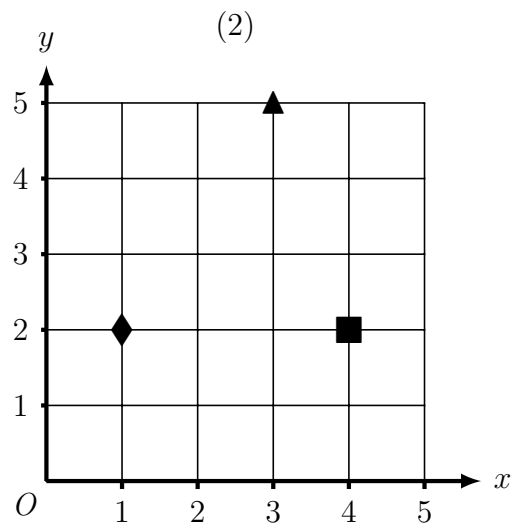
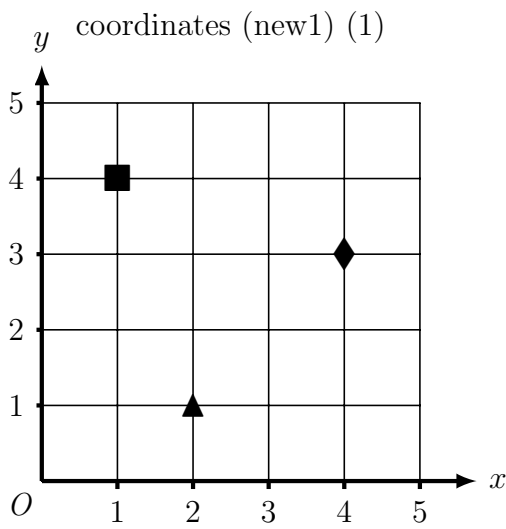
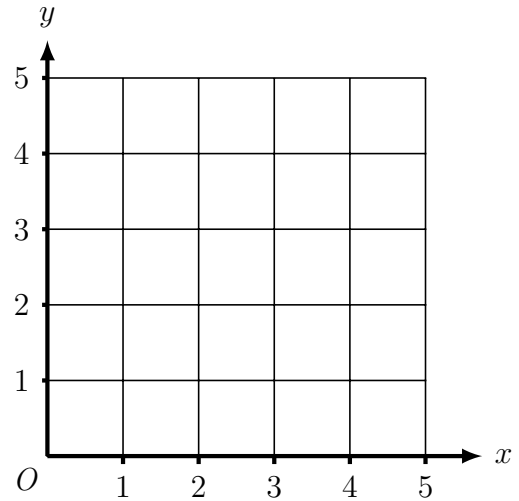


1. Here is a coordinate grid.

x y
 (a) Draw a \blacktriangle at $(2, 1)$

x y
 (b) Draw a \blacksquare at $(1, 4)$

x y
 (c) Draw a \blacklozenge at $(4, 3)$

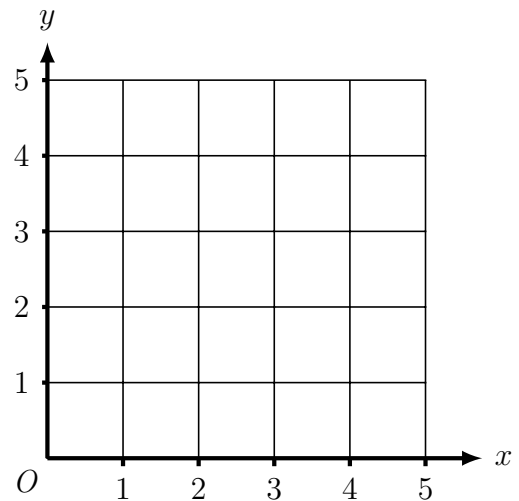


1. Here is a coordinate grid.

x y
 (a) Draw a \blacktriangle at $(2, 1)$

x y
 (b) Draw a \blacksquare at $(1, 4)$

x y
 (c) Draw a \blacklozenge at $(4, 3)$

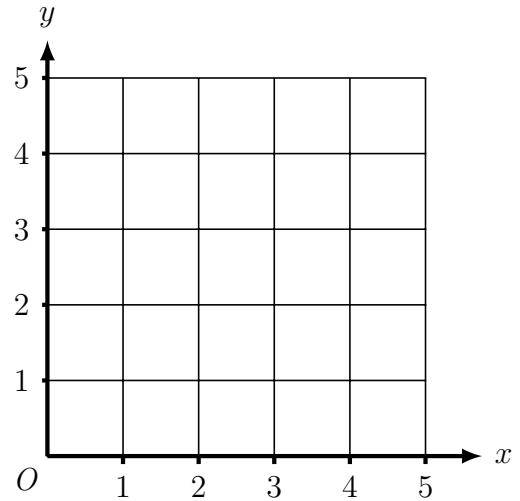


2. Here is a coordinate grid.

x y
(a) Draw a ▲ at (3, 5)

x y
(b) Draw a ■ at (4, 2)

x y
(c) Draw a ◆ at (1, 2)



2. Here is a coordinate grid.

x y
(a) Draw a ▲ at (3, 5)

x y
(b) Draw a ■ at (4, 2)

x y
(c) Draw a ◆ at (1, 2)

