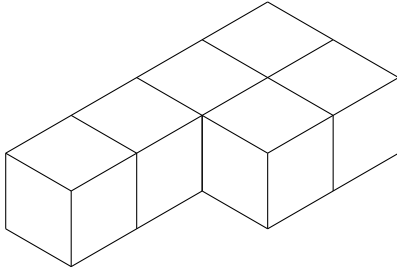


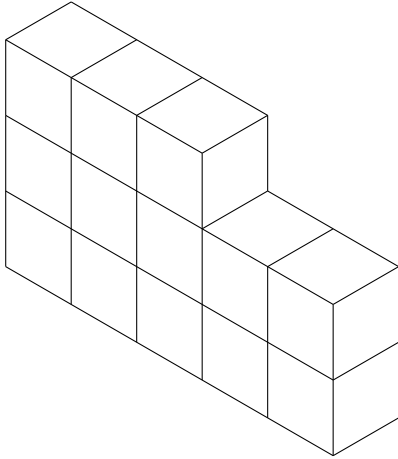
1. This 3-D shape is made from centimetre cubes.



Find the volume of the 3-D shape.

..... cm^3

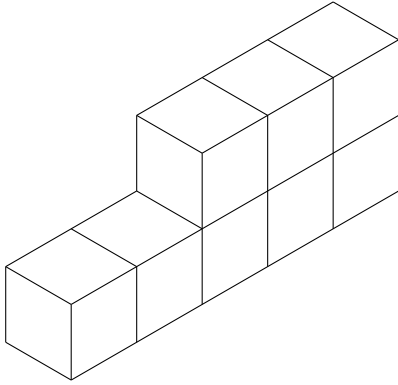
2. This solid shape is made from centimetre cubes.



Find the volume of the solid shape.

..... cm^3

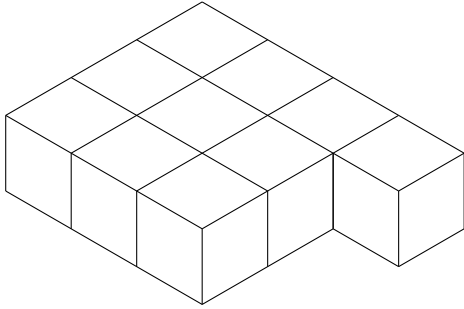
3. This solid shape is made from centimetre cubes.



Find the volume of the solid shape.

..... cm^3

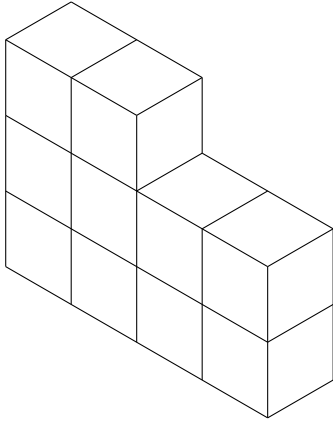
4. This solid shape is made from centimetre cubes.



Find the volume of the solid shape.

..... cm^3

5. This solid shape is made from centimetre cubes.



Find the volume of the solid shape.

..... cm^3

Answers

1. 6 cm^3

2. 13 cm^3

3. 8 cm^3

4. 10 cm^3

5. 10 cm^3