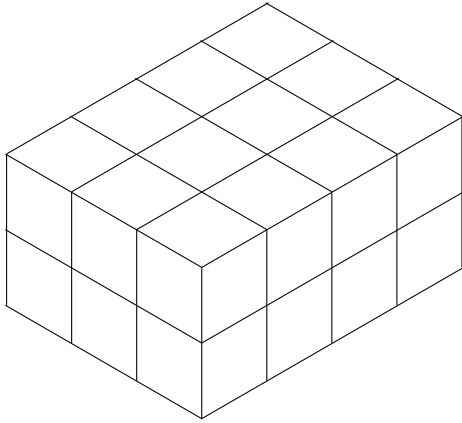


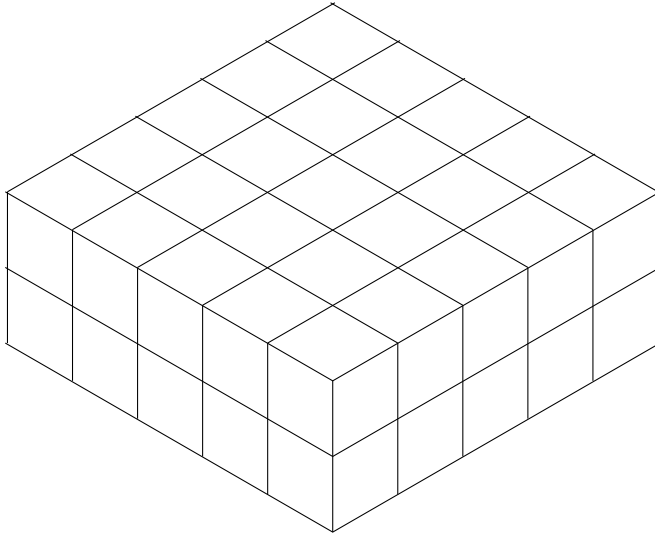
1. This cuboid is made from centimetre cubes.



Work out the volume of the cuboid.

.....  $cm^3$

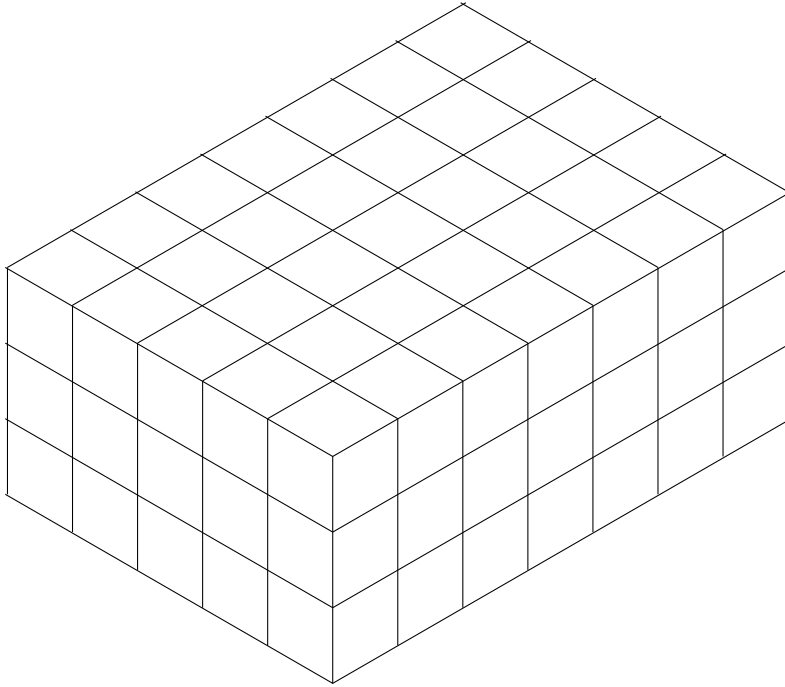
2. This cuboid is made from centimetre cubes.



Find the volume of the cuboid.

.....  $cm^3$

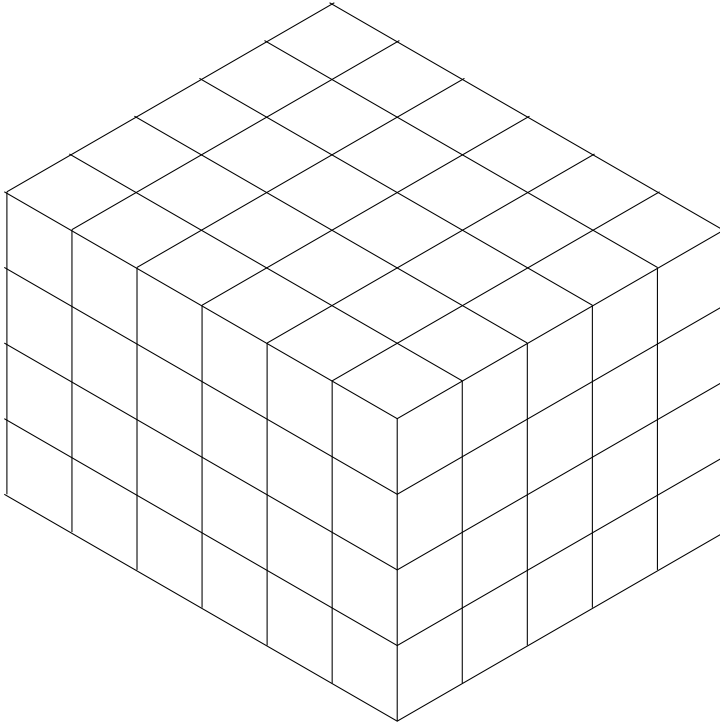
3. This cuboid is made from centimetre cubes.



Find the volume of the cuboid.

.....  $cm^3$

4. This cuboid is made from centimetre cubes.



Work out the volume of the cuboid.

.....  $cm^3$

## Answers

1.  $24 \text{ cm}^3$  because  $4 \times 3 \times 2$
2.  $50 \text{ cm}^3$  because  $5 \times 5 \times 2$
3.  $105 \text{ cm}^3$  because  $7 \times 5 \times 3$
4.  $120 \text{ cm}^3$  because  $5 \times 6 \times 4$