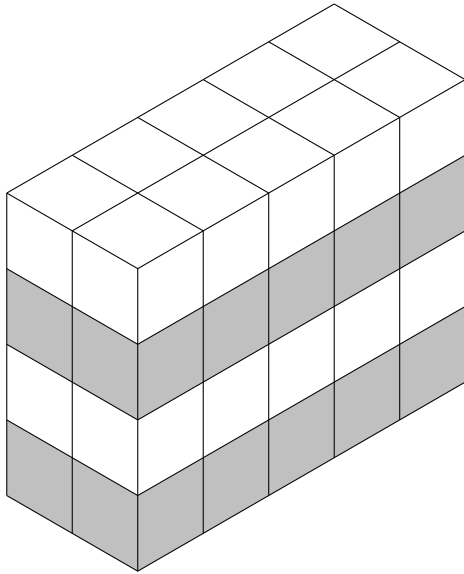


1. This cuboid is made from centimetre cubes.

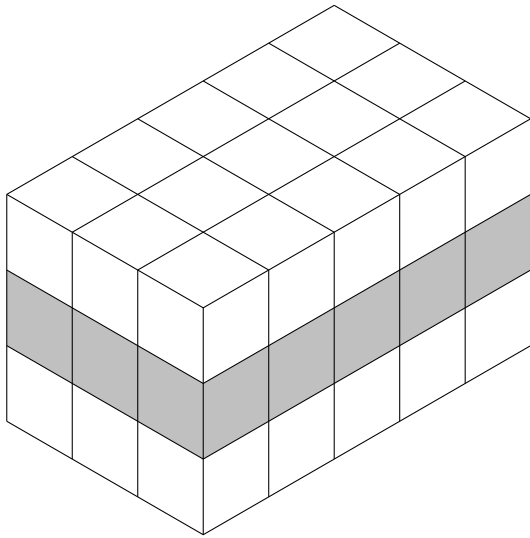


← The number of cubes on the top layer =

← The number of layers =

The volume of the cuboid = cm^3

2. This cuboid is made from centimetre cubes.

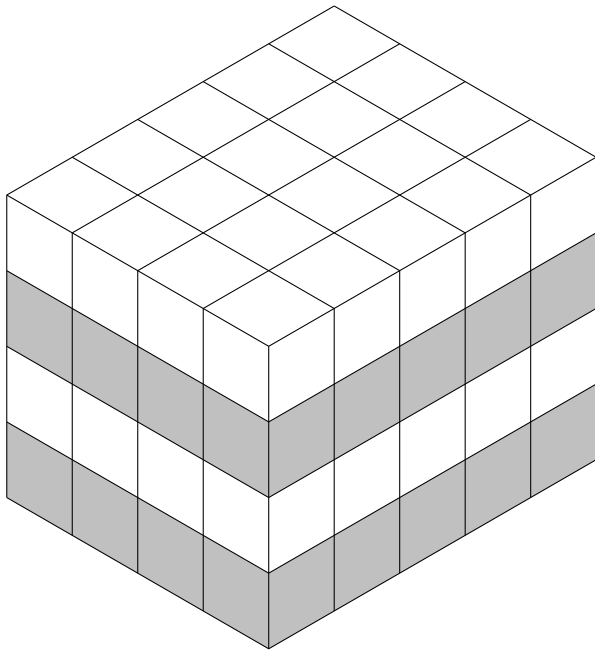


← The number of cubes on the top layer =

← The number of layers =

The volume of the cuboid = cm^3

3. This cuboid is made from centimetre cubes.

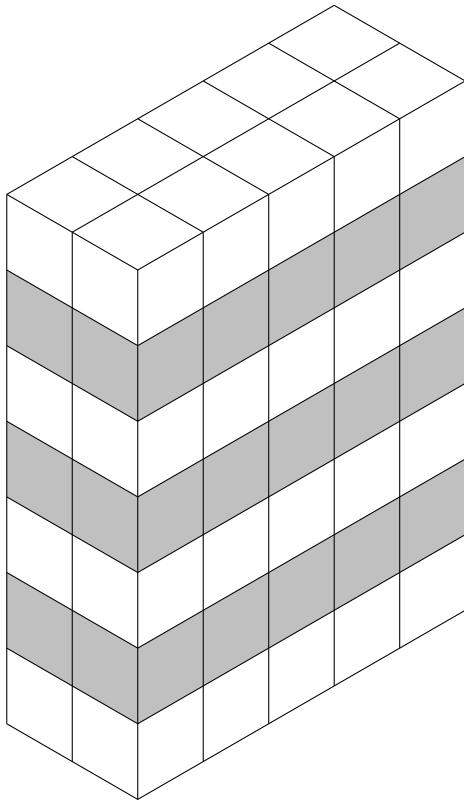


← The number of cubes on the top layer =

← The number of layers =

The volume of the cuboid = cm^3

4. This cuboid is made from centimetre cubes.



← The number of cubes on the top layer =

← The number of layers =

The volume of the cuboid = cm^3

Answers

1. $10 \times 4 = 40 \text{ cm}^3$

2. $15 \times 3 = 45 \text{ cm}^3$

3. $20 \times 4 = 80 \text{ cm}^3$

4. $10 \times 7 = 70 \text{ cm}^3$