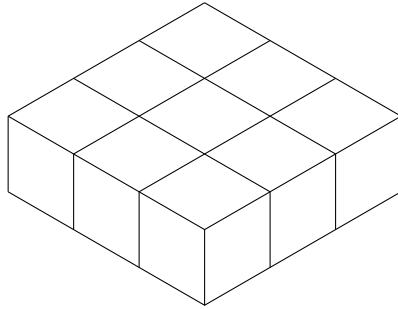
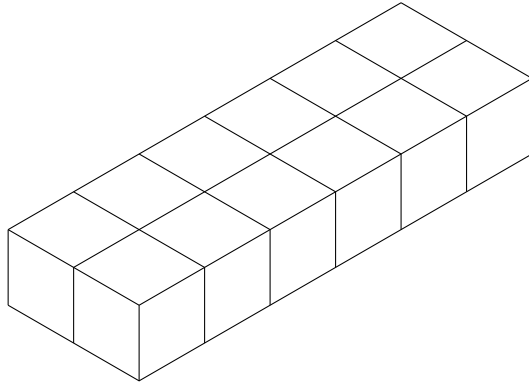


1. Write down the volume of this cuboid made from centimetre cubes.



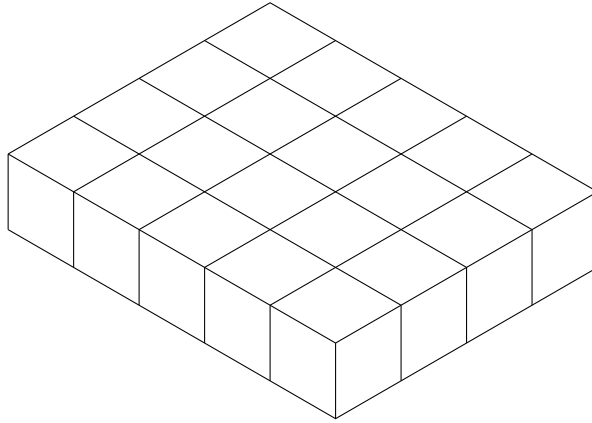
..... cm<sup>3</sup>

2. Write down the volume of this cuboid made from centimetre cubes.



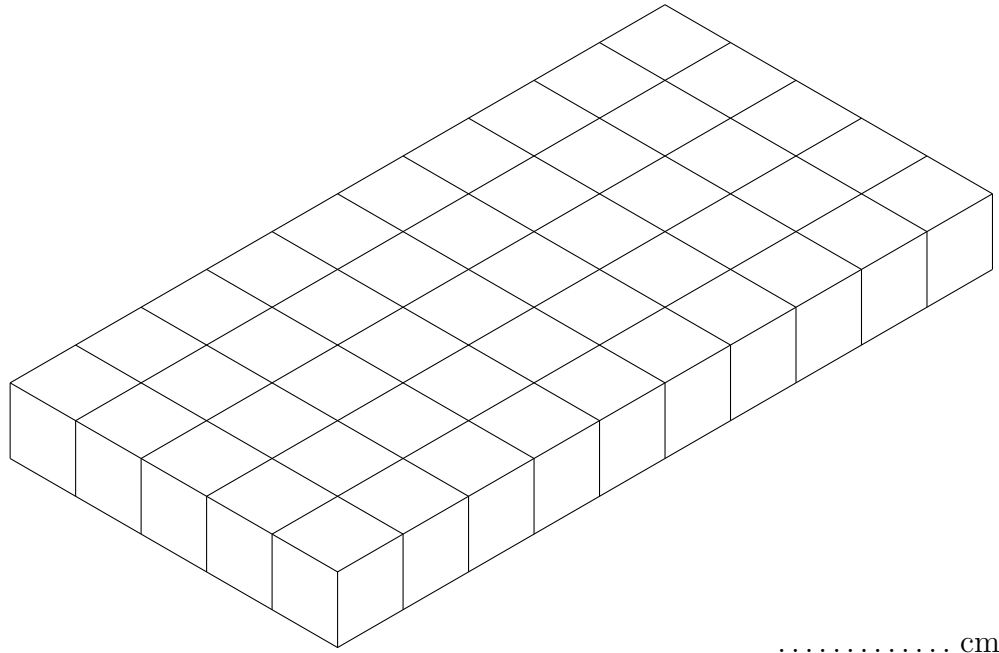
..... cm<sup>3</sup>

3. Write down the volume of this cuboid made from centimetre cubes.



..... cm<sup>3</sup>

4. Write down the volume of this cuboid made from centimetre cubes.



## Answers

1.  $9 \text{ cm}^3$

2.  $12 \text{ cm}^3$

3.  $20 \text{ cm}^3$

4.  $50 \text{ cm}^3$